

**TILDA AND PAUL PRI-SCHOOL
MIXED DAY AND BOARDING
P.O. BOX 43 ENTEBBE-MPALA
TEL:0782634937/0754056534**

**LEARNERS' COMPANION IN S.S.T
(PASS P.L.E S.S.T)
BY
INTERNAL EXAMMINATIONS BOARD OF TILDA AND
PAUL PRI-SCHOOL
AND APPROVED
BY
ACADEMIC ADMINISTRATION**

**SET ONE
SECTION A**

1. What is a family?

2. Why do we need a mortar and a pestle?

3. Mention any one animal found in the bush.

4. Mention any one thing found in the kitchen.

5. Why do people keep dogs at home?

6. Write any one use of a knife at home.

7. Name the type of weather which helps in winnowing.

8. Why do we need doctors in our community?

9. In which season do farmers water their crops?

10. Why do we need a fence in our school?

11. Name any one group of people who put on uniform.

12. What name is given to the leader of children in the school?

13. Give any one way of keeping security in a home.

14. What is the quickest type of transport?

15. Name the element of a good map which tells the map reader what the map is all about.

16. In what time of the day is the shadow shortest?

17. Name any one material for crafts.

18. How is a bicycle useful to a home?

19. Name any one physical feature in our district.

20. Draw a road sign that tells the drivers to reduce speeding cars.

21. What are map symbols?

22. Name any one semi cardinal point.

23. Why are few people using air transport?

24. Use the letter N to show where the compass points when it rests on the diagram below.




25. What is a plateau?

26. Why do map readers need a compass?

27. Name any one member on the L.C.I committee.

28. Draw and name the map for crossing the bridge.



29. What are customs?

30. How is a father important in his family?

31. What is weather?

32. Give any one type of crops grown in our community.

33. How is a hill important to Telecom Company?

34. How important are baskets in a home?

35. Give any importance of a lake to people near it.

36. Mention any one way of caring for plants.

For questions 37 – 40, answer either 'Christianity' or 'Islam'

37. Either: Why do Christians pray after waking up in the morning?

Or: Mention any one pillar of Islam.

38. Either: Who was the twin brother of Jacob?

Or: Who was the wife of Prophet Mohamed?

39. Either: Why do Christians fast?

Or: Why do Moslems fast?

40. Either: Write C.R.E in full.

Or: Write I.R.E in full.

SECTION B

41(a) Name the colour on our national flag that shows brotherhood.

(b) Name any two flags you know.

(i) _____

(ii) _____

(c) How is a school flag useful to us?

42(a) What is communication?

(b) Name any two means people of long age used.

(i) _____

(ii) _____

(c) How do parents get information from our school?

43(a) Give two importance of vegetation to people.

(i) _____

(ii) _____

(b) How do people destroy vegetation?

(c) In which one way can vegetation be dangerous to people?

44(a) Match the lists below.

A

B

(a) Kabaka

Bunyoro

(b) Omusinga

Busoga

(c) Emorimor

Iteso

(d) Omukama

Rwenzururu

45(a) What is a tribe?

(b) Name the tribe in Uganda that practises circumcision.

(c) Name any two clans under Baganda.

(i) _____

(ii) _____

46(a) What is weather?

(b) Give any two factors of weather.

(i) _____

(ii) _____

(c) Mention the weather condition used for planting crops.

47(a) Give any one resource.

(b) In which one way can you save electricity?

(c) Name any two resources that can be saved.

(i) _____

(ii) _____

48(a) What is transport?

(b) Why is road transport used by many people?

(c) Why are humps put in busy roads?

(d) Why is water transport the most suitable for fragile bulky goods?

49(a) What term is used to mean the period when early man used tools made out of stones?

(b) Which animals was the first to be tamed by early man?

(c) In which two ways was fire useful to early man?

50(a) What are economic activities?

(b) Write any two activities done by people in your community.

(i) _____

(ii) _____

(c) Why do some families fail to meet their needs?

(i) _____

(ii) _____

For questions 51 – 55, answer either 'Christianity' or 'Islam' but not both.

51. Either: (a) Why do Christians pray?

(b) Mention any two requests made in the Lord's Prayer.

(i) _____

(ii) _____

(c) Who taught us the Lord's Prayer?

Or: (a) What do Moslems pray?

(b) Name any two leaders in the mosque.

(i) _____

(ii) _____

(c) Who is the founder of Islam?

52. Either: (a) What is a church?

(b) Who is an Arch Bishop?

(c) Name two things that happened to the apostles on the Pentecost day.

(i) _____

(ii) _____

Or: (a) What is Ramathan?

(b) Name any two things a Muslim must not do during Ramathan.

(i) _____

(ii) _____

(c) How many days do Moslems fast?

53. Either: (a) Who is martyr?

(b) When are martyrs remembered in Uganda?

(c) In which two ways are martyrs important to the church today?

(i) _____

(ii) _____

Or: (a) Who is a hajj?

(b) In which country do Moslems pay pilgrims?

(c) In which two ways is paying pilgrims important to Moslems?

(i) _____

(ii) _____

For both

54(a) What are voluntary organizations?

(b) Name any two voluntary organizations.

(i) _____

(ii) _____

(c) How do voluntary organizations help in community?

55. Match the following books with their writers.

A

B

- | | |
|-------------|-----------|
| (a) David | Psalms |
| (b) Moses | Exodus |
| (c) Solomon | Epistles |
| (d) Paul | Proverbs. |

**SET TWO
SECTION A**

1. Name any one neighbouring country of Uganda that is handicapped by her location.

2. Which factor enabled the Indians to be in Uganda?

3. Which type of tax is charged on goods entering into a country?

4. How does climate influence population distribution?

5. State the reason why there are no people living on the top of Mt. Rwenzori.

6. Why was Colonel Charles Gordon hated by the people of Acholi?

7. How did the Anglo-Germany agreement of 1890 affect Uganda?

8. How did Buganda's involvement in Long Distance Trade help her to expand?

9. Give any one social importance of mountains to the people of Uganda.

10. Why did Sir Winston Churchill refer Uganda as the Pearl of Africa?

11. Give one example of values in our community.

12. Give the reason why the Baganda were not happy with the formation of LEGCO at first.

13. Under which arm of government do we find the clerk to parliament?

14. How do longitudes help to locate places on a map?

15. Name any one department of the East African Community that survived after the collapse of the East African Community in 1977.

16. State the reason why African chiefs and kings never wanted slave trade to end.

17. Give one reason why most of the explorers to Uganda passed through Tanzania than Kenya which was a shorter distance.

18. Name the Arab trader who helped Vasco Da Gama to reach India from the Coast of East Africa.

19. State the reason why German rule was unpopular among the people of Tanganyika during colonial rule.

20. Why is bee keeping the major economic activity carried out in the Miombo woodlands of central Tanzania?

21. How does rural-electrification reduce deforestation?

22. Mention one activity done by the National Water and Sewerage Cooperation.

23. How is Fort Jesus economically important to the government of Kenya?

24. The population of Kasangati town council is 1000 people /km . It has a total population of 50,000 people. Find the total area covered by Kasangati town council. Study the sketch map below and answer the questions that follow.



25. Name the economic block that unites the countries found in the shaded region.

26. How is the economic block mentioned in number 25 similar to E.A.C in terms of their objectives?

27. Who were the Boers?

28. State one reason why River Congo carries the greatest volume of water to the ocean.


29. Which organ of AU is responsible for the day today activities of the union?

30. State the reason why equatorial regions of DRC are poorly settled.

31. Why are most lagoon lakes found at the coast of West Africa?

32. State the reason why the Africans hated paying taxes to the colonialists.

33. In the space below, draw an illustration showing the sea breeze.



34. State the evidence that the illustration above is of a sea breeze.

35. Why did Khedive Ismail attempt to colonise Uganda?

For questions 36 – 40, answer either Christianity or Islam but not both alternatives in a number.

36. Either: What did Prophet Zechariah prophesize about?

Or: What did Prophet Isa prophesize about?

37. Either: What is the meaning of incarnation?

Or: What is the meaning of Jihad?

38. Either: How did Jesus show power over death while at Bethany the home of Mary and Martha?

Or: How did Prophet Muhammad show power of Allah?

39. Either: Who are saints according to Christianity?

Or: Who were the caliphs?

40. Either: Give one characteristic of love according to 1 Corinthians 13: 4 – 8?

Or Give one characteristic of love according to Islam.

SECTION B (60 MARKS)

41(a) Give any one Bantu tribe that settled in highland areas.

(b) State any two reasons why the Bantu settled in highland areas.

(i) _____

(ii) _____

(c) Mention any one effect of the Bantu migration into Uganda.

42(a) What was the first group of foreigners to come to Uganda?

(b) State two reasons the group mentioned in 42(a) carried out slave trade.

(c) State one way how the Arabs have benefited the people of Uganda.

43(a) What is a nation?

(b) Which people made Uganda as a nation?

(c) State two ways how the above people create Uganda as a nation.

(i) _____

(ii) _____

44(a) Name the traditional leader who fought for Uganda's independence.

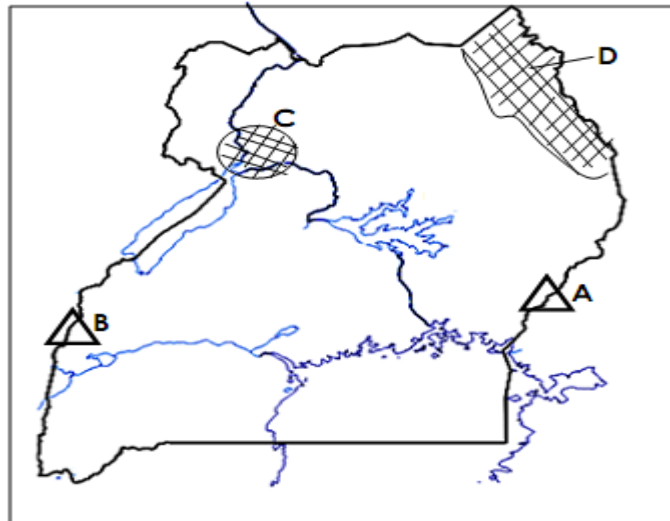
(b) State two ways how political parties fought for Uganda's independence.

(i) _____

(ii) _____

(c) Give one challenge facing political parties in Uganda today.

45. Study the sketch map of Uganda below and answer the questions that follow.



(a) Name the national parks found on the shaded regions

(i) D _____

(ii) C _____

(b) How was the formation of Mt. marked A different from that marked B?

(c) State the reason why there are few people living in the region marked D.

(d) How is Mt. marked A politically important to the government of Kenya?

46(a) Write E.A.C in full.

(b) Mention any two characters involved in the formation of E.A.C in 1967.

- (i) _____
 (ii) _____
 (c) How did Rwanda join the E.A.C?

47(a) Complete the table below.

Name	Total population	Total area	Population density
Matuga	_____	320km ²	250 people / km ²
Karambi	128000 people	_____	320 people / km ²
Kasangati	_____	50km ²	1000 people / km ²

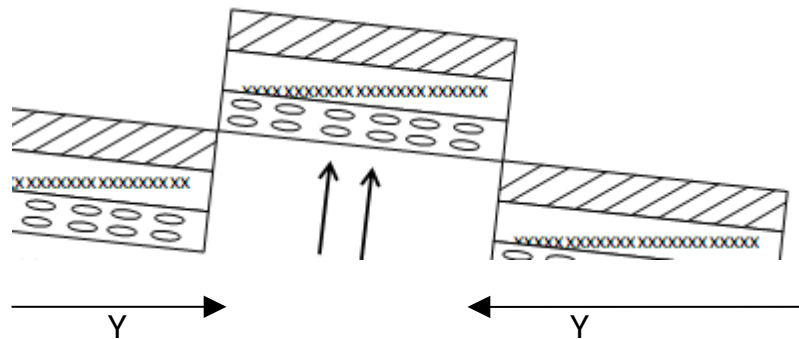
(a) Give the reason why population differs in different areas.

48(a) Mention the major mineral mined at Mwandui in Tanzania.

(b) State any two modern methods of mining used in East Africa.
 (i) _____
 (ii) _____

(c) How can mining lead to soil exhaustion?

49. The diagram below shows how some physical features were formed in East Africa.



(a) Name the forces marked Y.

(b) What process is shown in the diagram above?

(c) Mention any two mountains in East Africa that were formed as a result of the process shown above.
 (i) _____
 (ii) _____

50(a) Name any two examples of solid wastes.
 (i) _____
 (ii) _____

(b) State any two proper ways of managing wastes in our community.
 (i) _____

(ii) _____

51(a) Write down any two gifts of the Holy Spirit.

(i) _____

(ii) _____

(b) Give any two fruits of the Holy Spirit.

(i) _____

(ii) _____

52(a) Apart from Christianity and Islam, name any other two world religions.

(i) _____

(ii) _____

(b) State any two ways of respecting and relating to people of other religions at school.

(i) _____

(ii) _____

53(a) What is marriage?

(b) Give any two qualities of a good marriage partner.

(i) _____

(ii) _____

(c) Give any one common marriage problem.

54(a) Which sacrament is celebrated by Christians to remember the death of Jesus.

(b) Apart from the above sacrament, name any other two sacraments.

(i) _____

(ii) _____

(c) State any one condition fulfilled before one takes the Holy Communion.

55. "Take them out of here! Stop making my father's house a market place". John 2:16.

(a) Who said the above words?

(b) Why did he say the above words?

(c) State any two ways people respect God's house today.

(i) _____

(ii) _____

SET THREE

SECTION A

1. What name is given to the drawing of an object as seen from the sides?

2. Name the most common means of transport used in highland areas.

3. How was the tool below useful to the people of long ago?



4. Use letter P to show where the sun is seen in the evening on the compass rose below.



5. Why is it dangerous to settle in wetlands?

6. Give the meaning of the term community.

7. State the ministry responsible for the police in Uganda.

8. Give one way people in mountainous areas control soil erosion.

9. Why do farmers plant their crops during a wet season? 10. How are nimbus clouds important to farmers?

11. Name the source of raw-material for the item below.




12. Give one reason why school going children wear uniforms.

13. What term is given to people and their surroundings?

14. Draw and name one example of crafts.

15. What does the map symbol below represent?



16. What term is given to the movement of people out of a country to settle in another permanently?

17. How do people manage sunny weather?

18. The arrow of a wind is pointing to the south. To which direction is the wind blowing?

19. How can children help to maintain security in their areas?

20. State one role of the LCI chairman.

21. In which way are class prefects useful in a class?

22. How is a bank useful in our community?

23. What is gender?

24. Why do parents sign out their children from schools in case they are needed?

25. Write one problem faced by people living in highly populated areas?

26. State any one cause of conflicts between a school and its neighborhood?

27. Mention the most common cultural practice among the Bagisu.

28. How does drought cause shortage of food in a country like Uganda?

29. How can a Zoo be economically important to the government of Uganda?

30. Which condition of weather is responsible for the low water levels in water bodies?

31. How is a community useful to a school?

32. How are lollipops important on our busy roads?

33. State any one reason why it is important to care for forests.

34. Why is a hut not called a permanent house?

35. What does the yellow colour on the Uganda National Flag represent?

For questions 36 – 40, answer either Christian or Islamic but not both.

36. Either: How was Jesus helpful to His parents during His childhood?

Or: How was Prophet Muhammad helpful to his parents during his childhood?

37. Either: Name any one God's promise to Abraham.

Or: Name any one Allah's promise to Ibrahim.

38. Either: Mention the founder of Christianity.

Or: Mention the founder of Islam.

39. Either: Give the meaning of the word 'sin' according to Christians.

Or: Give meaning of the word 'Sin' according to Islam.

40. Either: Name any one group of people in your Christian society who need special care.

Or: Name any one group of people in your Muslim society who need special care.

SECTION B

41(a) Give the meaning of the term agro-forestry.

(b) Give two reasons why people in Uganda cut down trees.

(c) Name the type of wood got from natural forests.

42(a) Mention two health service centers in your community.

(i) _____

(ii) _____

(b) Mention two problems faced by the state when providing health services to the people

(i) _____

(ii) _____

43. Below is a graph showing the number of farmers who grow different crops in Buwaate village.

(a) Name the traditional cash crop grown in Buwaate village.

(b) Why do farmers grow Matooke?

(c) Give one reason why farmers in the village above need rainfall.

(d) Name one product got from maize.

44(a) What are children's rights?

(b) Give two ways children's rights have been abused in our community.

(i) _____

(ii) _____

(c) Write one way child abuse can be controlled in our district.

45(a) What term is given to a group of people related by blood or marriage.

(b) Give any one type of families in our society.

(c) Give two reasons why some families fail to meet their needs.

(i) _____

(ii) _____

46. Give the meaning of the following term;

(a) Urban-Urban migration

(b) Rural – Urban migration

(c) Give two reasons why people migrate today.

(i) _____

(ii) _____

47(a) What is saving?

(b) Why do people save resources?

(c) Why do people turn off water taps after use in their homes?

48(a) Name two economic activities carried out on the lake of Uganda.

i. _____

ii. _____

(b) How are lakes dangerous to people?

(c) Draw a map symbol for a seasonal lake in the space below.



49(a) Mention two attributes of a school?

(i) _____

(ii) _____

(b) Apart from school going children, name any two examples of people who wear Uniforms.

(i) _____

(ii) _____

50(a) Write one safe way of using the road.

(b) Why are the following road signs put on busy roads.



(c) Name the type of transport where boats are needed.

For questions: 51 to 55, answer Either Christian or Islam but not both.

51. Either: (a) What was the symbol of God's covenant with Noah.

(b) Mention the mountain where Noah's Ark rested after the floods.

(c) Which creature did Noah send to approve the drying up of the floods?

(d) What lesson do you learn from the story of Noah.

Or: (a) What was the symbol of Allah's covenant with prophet Nuru?

(b) Mention the mountain where prophet Nuru's Ark rested during the floods.

(c) Name any one of the children of prophet Nuru's children.

(d) What lesson do you learn from the story of Prophet Nuru.

52. Either: (a) Name the type of marriage that is conducted at the district level.

(b) Why do some married couples separate?

(c) State any one characteristics of religious marriage.

Or: (a) What is Nikah?

(b) Why do some married couples separated?

(c) State nay two characteristics of religious marriage (Nikah)

(i)

(ii)

53. Either: a) What is failure?

(b) Write down any two signs of failure.

(i) _____

(ii) _____

(c) State anyone way of avoiding failure in a Christian life.

53(a) Name the place where Moses received the Ten Commandments.

(b) Mention any two commandments God gave to Moses.

(i) _____

(ii) _____

(c) Why did God give Moses the Ten Commandments?

Or: (a) Name the place where Prophet Muhammad received the Holy Qur'an.

(b) Write three pillars of Islam

(i) _____

(ii) _____

(iii) _____

54. Either: (a) What name is given to the law books in the Bible?

(b) Write down any three law books in the Bible.

(i) _____

(ii) _____

(iii) _____

OR: (a) What do you understand by the term Islam?

b) Give two reasons why Muslims pray.

(i) _____

(ii) _____

(c) Name the fasting period for Muslims.

55. Both:

(a) Who is a leader?

b) Give two qualities of a good leader.

(i) _____

(ii) _____

(c) Give one way of getting leaders in our community.

SET FOUR SECTION A

1. What type of nation is Uganda?

2. State any one way physical features like rivers influence people's activities.

3. What type of winds is responsible for the semi-arid climate in North-East Uganda?

4. State one way population records are important to the government.

5. What society sent the first group of missionaries to Uganda?

6. How did Uganda benefit from the work done by early explorers?

7. How did the migration of ethnic groups affect Uganda economically?

8. State the main similarity between Lake Nyungu and Lake Katwe in terms of their formation.

9. Apart from cheetah, name one other animal found in kidepo valley National park.

10. Name the type of government that comes into power by use of a gun.

11. Which political party had the largest number of members in the LEGCO in 1961?

12. Apart from HE Yoweri .K. Museveni, mention one other leader of East Africa who signed the E.A.C treaty in 2001.

13. Why was the early man mostly interested in living near water bodies?

14. Mention one role of the head of legislature.

15. State one way low population may affect the country.

16. Name the road sign in the picture.



17. How are Bagishu and Chagga similar in terms of economic activities?

18. Name the traditional cash crop grown in Kericho in Kenya.

19. State one way the government benefits from Uganda's cultural centers.

20. How are coral reefs important to the mining industry of Kenya?

21. Why is it important for the government to guard against poaching in East Africa?

22. State one reason why Uganda should trade with Japan.

23. Name the type of climate that is experienced in Transvaal, Natal and Orange Free State provinces.

24. How did the Germans carry out their rule in Tanganyika?

25. What was Great Trek as practiced in South Africa?

26. Why did Sir Samuel Baker travel to Uganda through the North?

27. State one way apartheid policy was practiced in South Africa?

28. State any one challenge African states faced after independence.

29. Why is it important to build an industry near a source of raw materials?

30. Name any one product obtained from rubber.

31. How are camels adapted to the dry and desert conditions?

32. Name any one group of people that participated in the trans-Saharan Trade apart from the Berbers.

33. Why did Portuguese rule collapse shortly after settlement in East Africa?

34. How do Canary currents affect Africa's climate?

35. In which vegetation zone are cacti and acacias found?

- For questions 36 – 40, answer either Christian or Islamic but not both.**
36. Either: What is a sacrament?

- Or: What is Iman?

37. Either: How is the birth of Jesus important to Christians?

- Or: How was Khadijah important in the spread of Islam?

38. Either: Why was Jesus rejected by the people of Nazareth?

- Or: Why was Prophet Muhammed undermined by the people of Mecca?

39. Either: State the message that was preached by Prophet Zechariah.

- Or: What role did Prophet Ibrahim play towards Islam?

40. Either: State any one way emotional suffering can be controlled today.

- Or: How can emotional suffering be controlled today?

SECTION B

40(a) What is a nation?

(b) What is a heterogeneous nation?

(c) How did the British make Uganda a nation?

41(a) What is agriculture?

(b) Why are Ugandans Advised to rare exotic or animals that are cross breed?

(c) Why is it difficult to set up a dairy farm in Kabong district in North Eastern Uganda?

42(a) How can a map reader find the directions of different places on a map?

(b) How is the international Dateline important to a map reader?

(c) What is a hemisphere?

43(a) Name one of the first missionaries to come to Uganda.

(b) How was Mutesa I helpful to the Christian missionaries who came to Uganda in 1877– 1879?

(c) State one way missionaries affected Uganda economically.

(d) How was IBEACO important to the spread of Christianity in Uganda?

44(a) What other name is given wet savanna vegetation?

(b) State one reason why gorillas and Chimpanzee are mostly found in forest zones.

(c) Apart from producing hardwood, state one other way of identifying a natural forest from the planted.

(d) How can natural vegetation be protected in Uganda today?

45(a) Which direction is Uganda from Rwanda?

(b) How are Bagisu and Bafumbira similar in terms of their settlement?

(c) How did vegetation influence the settlement pattern of Hamities?

(d) How is culture economically important to a country like Uganda?

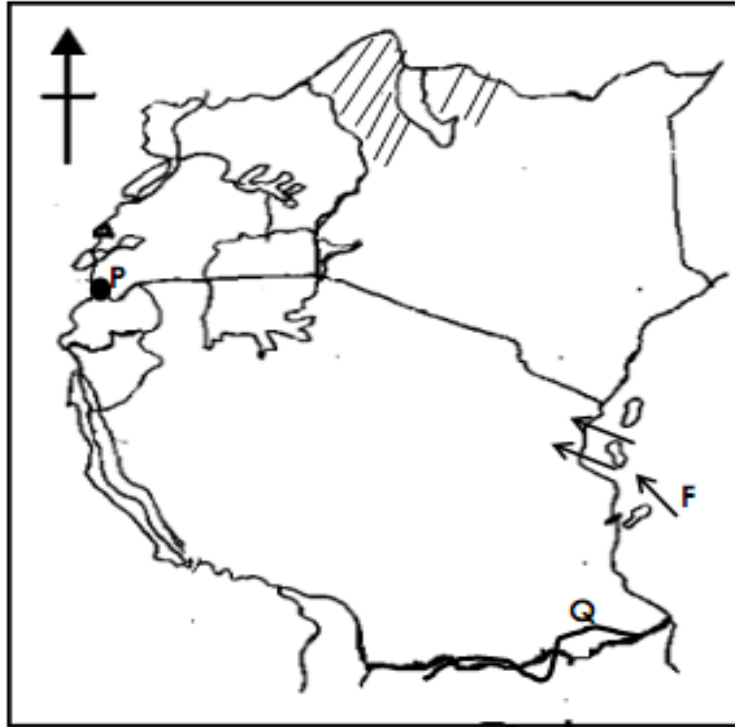
46(a) What is optimum population?

(b) How do the following factors influence population distribution in an area?

(i) Soils

(ii) Urbanization

47. Study the map carefully and answer questions that follow.



(a) Name the National park marked P.

(b) Name the physical feature marked Q

(c) Why is the shaded region is sparsely populated?

(d) How does the prevailing winds marked F Affect East Africa?

48(a) What is mining?

(b) Which mineral is obtained from the following places?

(i) Mwadui _____

(ii) Tororo _____

(c) How do minerals promote development in countries where they are found?

49(a) Name any two European explorers / Missionaries that carried out work along the coast of East Africa.

(i) _____

(ii) _____

(b) How was Rabai Mpya important to the spread of Christianity in East Africa?

c) How did he local people of Tanganyika benefit from the missionaries named in (a) above.

50(a) Name the ministry that is responsible for all national parks in Uganda.

(b) Name any two factors that influence animal distribution in Uganda's game parks.

(i) _____

(ii) _____

(c) How can animal life be conserved in Uganda's game parks?

For questions: 51 to 55, answer Either Christian or Islam but not both.

51. Either: (a) What do we mean by communion of saints?

(b) State any two ways communion of saints is done by Christians today.

(i) _____

(ii) _____

(c) Name the pope who canonized the Uganda martyrs in 1969.

Or: Write down any four pillars of Faith.

(i) _____

(ii) _____

(iii) _____

(iv) _____

52. Either: (a) Name the type of marriage that is conducted at the district level.

(b) Why do some married couples separate?

(c) State any one characteristics of religious marriage.

Or: (a) What is Nikah?

(b) Why do some married couples separated?

(c) State nay two characteristics of religious marriage (Nikah)

(i) _____

(ii) _____

53. Either: (a) Write A.T.R in full.

b) State any two similarities between A.T.R and Christianity.

(i) _____

(ii) _____

(c) State nay one difference between A.T.R and Christianity.

Or: (a) Write A.T.R in full.

(b) State any two similarities between A.T.R

(i) _____

(ii) _____

(c) State one difference between A.T.R and Islam

54. Either: Match correctly:

- | A | B |
|----------------|-------------------------------------|
| (a) Mt. Sinai | Jesus ascended to Heaven |
| (b) Mt. Olives | Moses received the Ten Commandments |
| (c) Mt. Ararat | Jesus was crucified |
| (d) Golgotha | Noah's Ark landed after the flood. |

55. Both:

State four qualities of a religious leader.

- (i) _____
- (ii) _____
- (iii) _____
- (iv) _____

**SET FIVE
SECTION A.**

1. Which economic activity supports the activities of a carpenter?

2. State one social value of a school to the community around.

3. Why is child labour education important in Uganda?

4. Give one way people can use the roads safely.

5. Why should children be given their needs?

6. Which traditional leader fought for Uganda's independence?

7. Give one advantage of getting leaders through volunteering.

8. Give one way veterinary officers are important to farmers.

9. Which service is provided by health centres to control population growth?

10. Give one example of bad weather change that cause food shortage in districts.

11. State the importance of a frame on a map.

12. Name the element of a map that helps map readers to find the direction of places.

13. Why do we need to care for the social service centres?

14. Name the largest ocean on the world map.

15. How is the capital city of Ethiopia important to Africa?

16. Write one factor that cause the type of rainfall received in plains.

17. Why do people in Equatorial regions build houses with slanting roofs?

18. Which physical feature is found close to Indian Ocean?

19. Give one way people have contributed to climatic change in Africa.

20. Name the British governor who promoted higher education in Uganda.

21. Write any one planted forest in Uganda.

22. Give one reason why highlands receive a lot of rainfall.

23. What are multipurpose river projects?

24. Which climatic region of Africa receives rainfall during winter?

25. State one way of improving skilled labour in East Africa.

26. Why is Arabica coffee not grown in many places in East Africa?

27. Write one product got from sisal.

28. Give one reason why monkeys live in forests.

29. State one problem faced by land as a resource.

30. Give one reason why Kampala has more industries than any other districts of Uganda.

31. Name the first Archaeological site in Uganda.

32. What is a National language?

33. Give one disadvantage of having more teenagers than adults.

34. Who are the "foreigners" in Uganda?

35. State any one way in which culture is preserved in Uganda.

36. Give one reason why a good Christian should be humble during prayers.

37. State one characteristic of a good friend.

38. How do people use their body parts to praise God?

39. Which message do we read from the Gospel books?

40. State one way we can overcome temptations.

SECTION B.

41. (a) Give one example of a lake formed as a result of ;

(i) River meandering

(ii) Dam construction

(iii) Down warping

(b) Give one way lakes promote trade.

42. (a) Which two ethnic groups settled in West Nile of Uganda?

(i)

(ii)

(b) Why did the above people settle in West Nile?

(i)

(ii)

43. (a) Which people introduced the first form of paper money in Uganda?

(b) What type of trade did the above people promote in Uganda?

(c) State any two factors which promote trade in the region of East Africa.

(i)

(ii)

44. Use the climatic table below to answer questions that follow.

Months	J	F	M	A	M	J	J	A	S	O	N	D
Temp °C	23	21	20	21	25	24	23	21	20	20	21	24
Rainfall (mm)	40	80	200	250	170	70	110	150	250	220	90	50

(a) Name the type of climate shown in the table above.

(b) State one characteristic of the climate shown above.

(c) Mention one country in Africa with above climate.

(d) Which problem is likely to be faced by people living in the climatic region above?

45. (a) Give two reasons why Mau Mau rebellion took place in Kenya.

(i)

(ii)

(b) State any two disadvantages of the Mau-Mau rebellion in Kenya.

(i)

- (ii) _____
46. (a) Give two reasons why some places don't have the same vegetation.
 (i) _____
 (ii) _____
- (b) State any two commercial importance of vegetation.
 (i) _____
 (ii) _____
47. (a) Write the first line of the National Anthem.

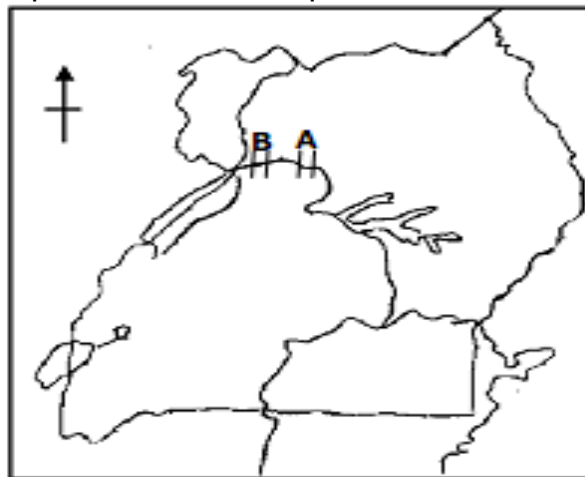
- (b) Who composed the National anthem?

- (c) Why is the National Anthem sang at school?

- (d) State one message we learn from the first stanza of the National Anthem.

48. (a) Write NFA in full.

- (b) State any three ways NFA is trying to protect the Natural forests in Uganda.
 (i) _____
 (ii) _____
 (iii) _____
49. (a) Mention the catholic missionaries who came to Uganda in 1879.
 (i) _____
 (ii) _____
- (b) How did the coming of the above missionaries affect the people of Uganda?
 (i) _____
 (ii) _____
50. Use the map below to answer question 50.



- (a) Name the water falls marked A and B.
 A _____
 B _____
- (b) How do people benefit from the waterfalls marked A?
 (i) _____
 (ii) _____

51. Either:

(a) Which prayer did Jesus teach his disciples?

(b) Why did Jesus teach his disciples the prayer stated above?

(c) State any two requests made from the above prayer.

(i) _____

(ii) _____

Or:

(a) What is salat?

(b) Give any two importance of salat to a Muslim.

(i) _____

(ii) _____

(c) How do Muslims prepare for salat?

52. Either:

In the parable of the lost sheep: Jesus teaches that if one sheep out of one hundred is lost, the shepherd will leave the ninety-nine and look for the lost one.

(a) Who is the shepherd in this parable?

(b) Who were the sheep?

(c) Who did Jesus refer to as the lost sheep?

(d) Why are the ninety-nine sheep not as important as the lost one according to Jesus

Or:

(a) What is Tayammum?

(b) Give any one condition under which Tayammum is done.

(c) Give any two things that can be used during Tayammum.

(i) _____

(ii) _____

53. Either:

(a) Name the three women who visited the tomb where Jesus was buried.

(i) _____

(ii) _____

(iii) _____

(b) Why did they visit the tomb of Jesus Christ?

Or:

(a) State the duty of Angel Israafeel on the day of Judgement.

(b) Mention any two things that will happen before the day of judgement.

(i) _____

- (ii) _____
(c) Why will Allah judge all the believers on the day of judgement?

54. Either:

(a) Give any two examples of international organisations which act like Good Samaritan.

- (i) _____
(ii) _____
(b) How do the above organizations act as a good Samaritan.

- (i) _____
(ii) _____

Or: (a) Give any two examples of Muslim organisations in Uganda that act like a Good Samaritan.

- (i) _____
(ii) _____
(b) How do the above organisations act like Good Samaritan?

- (i) _____
(ii) _____

55. For Both.

(a) When does a married person supposed to re-marry?

(b) State three things which make married people unhappy.

- (i) _____
(ii) _____
(iii) _____

SET SIX SECTION A

1. What is a map?

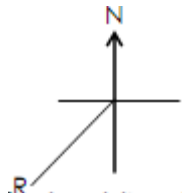
2. What is a picture?

3. State any one difference between a map and a picture.

4. Give any one similarity between a map and a picture.

5. Mention the element of a map that helps to interpret the details of a map.

6. What does letter R represent on the compass?



7. Why is a foreign visitor given a map of Uganda when he reaches Entebbe airport?

8. Why do shadows appear in the west in the morning?

9. What is the direction of Uganda from Kenya?

10. Why do people in Mombasa see the sun earlier than people in Tororo?

11. Apart from locating places, give another use of longitudes.


12. Name the condition of weather that requires people to put on gumboots.

13. Which type of rainfall is received around L. Victoria?

14. State the difference between off-shore and on-shore winds.

15. Of what importance are map symbols on a map?

16. Draw a map symbol for a hill.



17. Mention any one area where we commonly find a wind sock.

18. Name one element of wind measured at a weather station.

19. What are isobars?

20. Why is it necessary for a farmer to have weather knowledge?

21. How is a camel adapted to desert conditions?

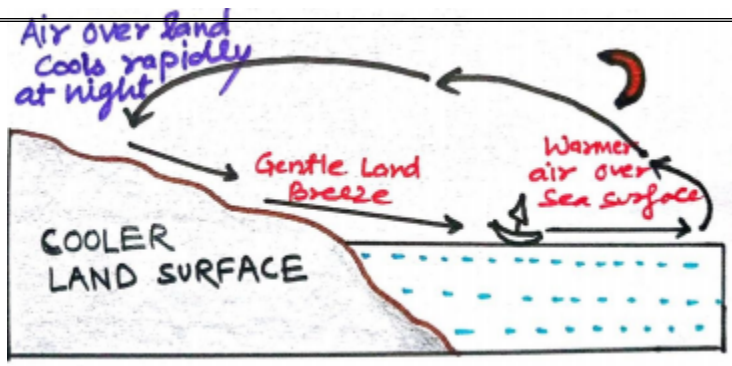
22. What nature of roofs do houses in equatorial region have?

23. Give one effect of equinox.

24. Mention one district in Karamoja region.

25. Why is North Eastern Uganda and Kenya dry?

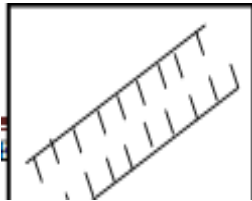
26. What type of breeze is shown below?



27. Mention the month when the sun is overhead the tropic of Capricorn.

28. What element of a good map helps a map reader to understand the details of the map?

29. What does the map symbol below represent?



30. Name the winds responsible for the formation of Sahara desert.

31. Why does Mbale region receive relief rainfall?

32. Apart from giving us rainfall, give any other use of clouds to people.

33. What is the major function of a six's thermometer at a weather station?

34. Where do we find the meteorological station in Uganda?

35. State any one effect of warm ocean currents.

For questions 36 – 40, answer either Christianity or Islam but not both in each question.

36. Either: What does the word gospel mean?

Or: What does the word Hadith mean?

37. Either: Why did Cain kill his brother?

Or: Why did Qabel kill his brother?

38. Either: How did Joseph come to live in Egypt?

Or: How did Yusuf come to live in Maseru?

39. Either: What is the Christian teaching on marriage?

Or: What is the Islamic teaching on marriage?

40. Both: How do African traditional believers remember their dead?

SECTION B

41. Draw the map symbol below.

canal	bridge	dam	waterfall

(a) Mention any three types of scales.

(i) _____ (ii) _____

(iii) _____

(b) How is a scale important to a map reader?

43. Study the weather types below and answer questions that follow.



(a) Name the types of weather named.

(i) C _____ (ii) D _____

(b) How does a farmer benefit from weather type B?

(c) Why are the trees in B bending?

44(a) What are weather disasters?

(b) Mention any two weather disasters.

(i) _____ (ii) _____

(C) How can the government help victims of weather disasters in (b) above?

45. The table below shows climate and rainfall patterns. Use it to answer questions that follow.

Months	J	F	M	A	M	J	J	A	S	O	N	D
Temp °C	15	16	18	22	28	29	30	29	28	25	22	20
R/F (mm)	40	30	—	—	—	—	—	10	—	—	31	45

(a) Name the month that received the highest amount of rainfall.

(b) Calculate the temperature range.

(c) Which type of climate is shown above?

(d) Give a reason to support your answer in (c).

46(a) Which type of climate is experienced at Drakensberg in South Africa?

(b) Give any two characteristics of the above climate in (a).

(i) _____

(ii) _____

(c) Give one factor that favours sheep rearing in the temperate region.

47. Complete the table below.

Weather instrument	Uses
Barometer	_____
_____	Speed of wind
Hygrometer	_____
_____	Temperature of a place

48(a) What is global warming?

(b) Mention any two human activities that may lead to global warming.

(i) _____ (ii) _____

(c) State any one effect of global warming.

49(a) What is a breeze?

(b) Draw an illustration of the types of breezes below.

(i) land breeze



(ii) sea breeze



(c) Which type of breeze occurs at night?

50. Use the map of Africa below to answer the questions that follow.

(a) Name the climatic region shown by

(i) x x _____

(iii) T _____

(b) Mention any two plantation crops that grow well in region

x x (i) _____

(ii) _____

For questions 51 – 55, answer Christianity or Islam but not both in each question.

51. Either: (a) What name is given to the first five books in the Bible?

(b) Mention the first two books in the Bible.

(i) _____ (ii) _____

(c) Name the prophet who wrote the above books in (b).

Or: Mention the books that were received by the prophets below.

(i) Muhamad (SAW) _____

(ii) Dauda _____

(iii) Isa _____

(iv) Musa _____

52. Either: (a) What is a covenant?

(b) Mention any two people in the Bible who made a covenant with God.

(i) _____ (ii) _____

(c) Mention one promise that God made to Noah.

Or: (a) What is a surat?

(b) Mention any two surats.

(i) _____ (ii) _____

(c) In which surat is the story of the creation?

53. Either: (a) Mention any two Christian values.

(i) _____ (ii) _____

(b) State any two ways of upholding Christian values.

(i) _____

(ii) _____

Or: (a) Mention any two Islamic values.

(i) _____ (ii) _____

(b) State any two ways of upholding Islamic values.

(i) _____

(ii) _____

54. Match the prophets below to their message in B.

A

(a) Jonah

(b) Amos

(c) Isaiah

(d) Jeremiah

B

messianic prophet

trust, justice and right living

new covenant

judgment to people of Nineveh

55. Both: (a) What is reconciliation?

(b) State any two traditional ways of reconciliation.

(i) _____

(ii) _____

(c) Why should a Christian reconcile with one another.

SET SEVEN

SECTION A.

1. Name the map symbol drawn below.



2. How can tourists be able to locate places of their interest at Entebbe airport?

3. By what process were basin lakes formed?

4. Give one importance of the central bank of Uganda.

5. What does the term nationalism mean?

6. Why do very few people use newspapers as a medium of communication in rural areas?

7. What is the direction of Uganda from South Sudan?

8. Name the national park famous for mountain gorillas in Uganda.

9. Give the reason why the Nile valley is densely populated.

10. Name the country in East Africa which has the highest population density.

11. State the main effect of the earth's rotation on its axis.

12. Name one mountain in East Africa crossed by the equator.

13. Which stanza of the Uganda National Anthem shows that Uganda is an agricultural country?

14. How does literacy among people promote development?

15. How did fertile soils contribute to the growth of Buganda kingdom?

16. State one factor which can promote the tourism industry.

17. On which river was Akasombo river project constructed?

18. Why is the government of Uganda encouraging modernization of agriculture?

19. State the main economic activity carried out in the temperate regions of South Africa.

20. Why do most farmers in Uganda prefer subsistence farming to any other type of farming?

21. How do forests influence farming activities?

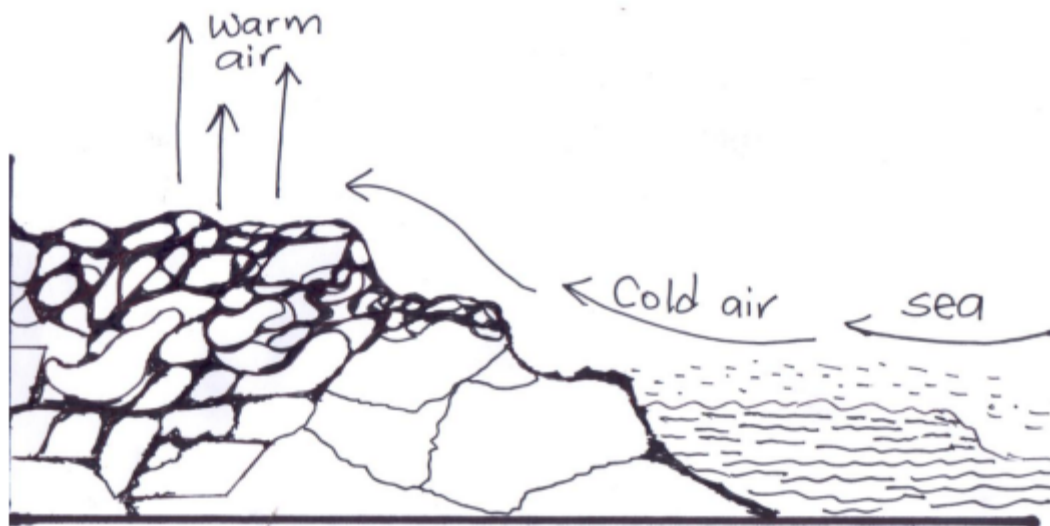
22. Mention any one way the government can control rural-urban migration.

23. Why did the British invite Indian Coolies to East Africa?

24. Why does Kenya find it easier to carry out overseas trade than Uganda?

25. How can the construction of dams on African rivers be dangerous to the tourism industry?

26. Which climatic region of Africa is suitable for growing crops such as lemons and oranges?
27. State the factor which is likely to slow down the development of Kasese.
28. How were porters useful to traders before the construction of railways in East Africa?
29. State any one negative effect of smuggling to local manufacturers.
30. How are the Chagga similar to the Bakonjo in their settlement patterns?
31. State the reason why you would prefer a donkey to a lorry as a means of transport in Bundibugyo.
32. Uganda has always had a deficit budget. What problem does this bring to Uganda?
33. Give one reason why the British decided to settle in the Kenya highlands.
34. How did the coming of Asians promote economic developments in East Africa?
35. What breeze is shown in the diagram below?



For numbers 36 to 40, answer either christianity or islam but not both.

36. Either:- Which son of Adam committed the first murder against his brother?

Or:- Which son of Adam committed the first murder against his brother?

37. Either:- State one thing you can do as a Christian in order to come back to God after sinning.

Or:- State one thing you can do as a Moslem in order to come back to Allah after sinning.

38. Either:- In which book in the bible do we find the story of Israelites leaving Egypt to Canaan?

Or:- Which Surah in the Quran tells us the life of Isa?

39. Either:- Give one reason why Moses ran away from Egypt to Midian.

Or:- Give one reason why Mohammad ran away from Mecca to Medina.

40. Either:- Name one cause of suffering in Christianity.

Or: Name one cause of suffering in Islam.

SECTION B

41. (a) Name the type of budget where the expenditure is less than the income.

(b) State the two parts of a budget.

(i) _____

(ii) _____

(c) Give one importance of making a plan of what you want to buy before spending.

42. (a) State any two ways in which a school passes on information to parents.

(i) _____

(ii) _____

(b) In which two ways can a headteacher pass on information to school children?

(i) _____

(ii) _____

43. (a) What title is given to the head of Legislature?

(b) Give one example of people who make up the Legislature.

(c) State any two roles of the Legislature.

(i) _____

(ii) _____

44. Study the climatic table below of Liberia and answer the questions that follow.

Temp ⁰ C	22	24	28	30	32	28	26	26	27	26	25	24
Rainfall mm	0	0	25	50	75	115	205	250	145	20	0	0
Months	J	F	M	A	M	J	J	A	S	O	N	D

(a) What type of climate is shown above on the table?

(b) Calculate the temperature range of this area.

(c) State one characteristic of the above type of climate.

(d) Give one economic activity done in the type of climate shown above.

45. (a) State two factors which can promote trade in an area.

(i) _____

(ii) _____

(b) Give two advantages of industrialization in an area.

(i) _____

(ii) _____

46. (a) Which countries are known as the Nile valley countries?

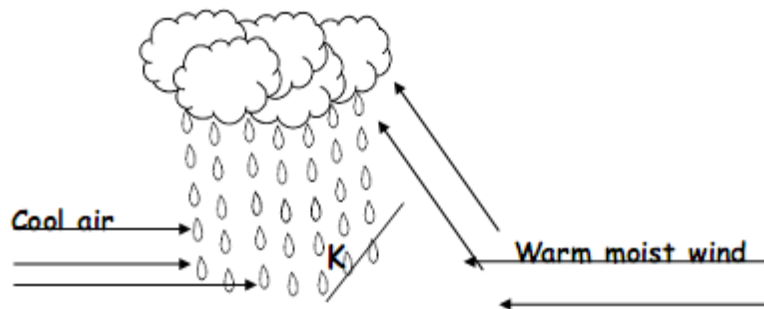
(b) Name two Nile valley countries.

(i) _____

(ii) _____

(c) Mention the major cash crop grown in the Nile valley.

47. Study the diagram below and answer questions about it.



(a) What type of rainfall is shown above in the diagram?

(b) Name the part marked with letter "K".

(c) Mention two districts in Uganda where the above type of rainfall is received.

(i) _____

(ii) _____

48. Match A with B correctly.

A

Legend

- (i) Kintu and Nambi
- (ii) Mundu and Seera
- (iii) The Spear and the Bead
- (iv) Isaza and the king of hell

B

Tribe which tells us about it.

- Batoro
- Bagisu /Bamasaba
- Baganda
- The Luo

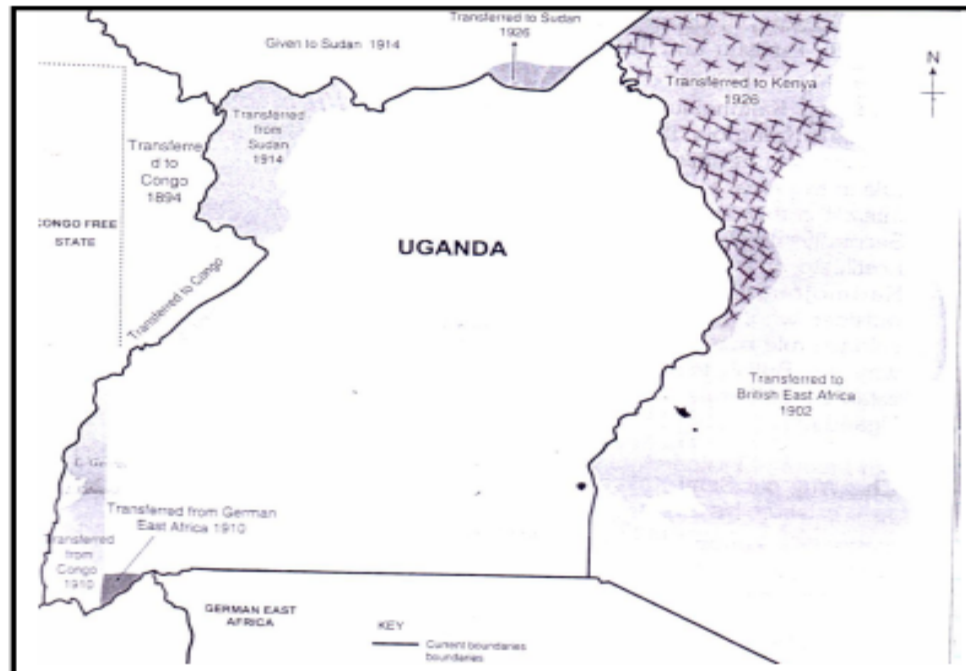
49. (a) Give one reason why kingdoms were restored in Uganda in 1993.

(b) Name the Ugandan President who restored kingdoms after twenty six years.

(c) State two disadvantages of kingdoms.

- (i) _____
- (ii) _____

50. Study the map below and answer the questions about it. Evolution of Uganda Boundaries.



(a) How did the evolution of Uganda's boundaries affect some tribes?

(b) Mention two tribes which were divided from their relatives during the fixing of Uganda's boundaries.

- (i) _____
- (ii) _____

(c) Why was the part shaded with letters XXXXX transferred from Uganda to Kenya in 1926?

For numbers 51 to 55, answer either christianity or islambut not both.

51. Either:-

(a) Name the town in Galilee where Jesus Christ lived with his parents.

(b) Mention one Christian value Jesus showed to his parents during his childhood.

(c) Give the name of Zechariah's wife who was a relative to Mary the mother of Jesus.

(d) How did God punish Zechariah when he refused to believe in the Angel's message of his wife bearing a son at an old age?

Or:-

(a) Name the town where Prophet Mohammad was born.

(b) State two reasons why Prophet Mohammad was loved by his foster parents.

(i) _____

(ii) _____

(c) Who was the foster mother of Prophet Mohammad?

52. Either:

(a) What was God's purpose of creating Adam?

(b) Where did Adam live?

(c) In which way was Adam different from other creatures?

(d) How did Adam fail to live happily with God?

Or:-

(a) What was Allah's purpose of creating Adam?

(b) Where did Allah put Adam to live?

(c) In which way was Adam different from other creatures?

(d) How did Adam break his good relationship with Allah?

53. Either:-

(a) Give two ways in which a Christian can give selfless service to people in a community.

(i) _____

(ii) _____

(b) Mention two selfish behaviours among Christians today to people in a community.

(i) _____

(ii) _____

Or:-

(a) Give two ways in which a Moslem can give selfless service to people in a community.

(i) _____

(ii) _____

(b) Write down any two selfish behaviours among Moslems today.

(i) _____

(ii) _____

54. Either:-

(a) State any two Gospel books in the Bible.

(i) _____

(ii) _____

(b) What do you understand by the term "Gospel"?

(c) Which book in the Bible talks about the creation of the earth?

Or:-

(a) State any two Holy books in Islam.

(i) _____

(ii) _____

(b) Which Holy book was given to the following people:-

(i) Prophet Mohammad (PBUH)?

(ii) Prophet Musa ?

(iii) Prophet Dauda?

55. Either:-

"Whoever refuses to work is not allowed to eat" (2 Thessalonians 3:10)

(a) Give two reasons why people should work.

(i) _____

(ii) _____

(b) State two challenges people meet at their places of work.

(i) _____

(ii) _____

Or:-

"Grasp five things before five others; your leisure before you work" Sunan Tirmidhi 11:51: 74)

(a) Give two reasons why Islam encourages people to work.

(i) _____

(ii) _____

(b) State two challenges people meet at their places of work.

(i) _____

(ii) _____

SET EIGHT SECTION A.

1. Name the social service provided by drivers.

2. What problem is likely to be caused by oil mining in the Albertine region?

3. Give one reason why the government of Uganda is encouraging BodaBoda riders to put helmets on their heads?

4. Write one result of floods in our community.

5. How can people in rural areas of Uganda improve on their income?

6. Name the local council one executive member in charge of children's affair.

7. State any one way UNRA is important to the government of Uganda.

8. Why should children be grateful to missionary work in Africa?

9. Mention any one way that makes the growing of crops possible in Libya.

10. How have hills led to the promotion of communication?

11. Give one way early man used to get food.

12. Under what condition is a bye-election carried out?

13. Name one district in Uganda that grows cocoa on a large scale.

14. Why didn't the Nilotes form kingdoms compared to the Bantu?

15. Give one condition for a country to qualify to be a member of the African Union(A.U)

16. Mention one way in which commercial banks promote development in a country.

17. Mention one problem Zambia faces for being a land locked country.

18. Name the group of people the Maji Maji rebellion was staged against?

19. Give one problem faced by people in slum areas.

20. State the ministry responsible for primary schools in Uganda.

21. Identify any one duty of the electoral Commission.

22. Name the water body that has the largest number of hippopotamuses in Uganda.

23. How helpful are trees to the fishing industry?

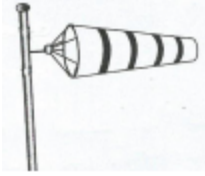
24. Give one way business men benefit from the nearby community.

25. Name the type of energy resource generated from hot springs.

26. Identify any one animal commonly used for transport in desert land.

27. Why did Captain Fredrick Lugard sign an agreement with Kabaka Mwanga II?

28. How is the weather instrument below useful to a pilot?



29. How is vegetation important to the tourism industry?

30. Mention any one reason why civil wars are common in African countries.

31. Which African Nationalist started Pan Africanism in Africa?

32. Identify any one advantage of a surplus budget to a country.

33. State the major role of a sick bay in a school.

34. Give one reason why the white settlers decided to settle in Kenya.

35. What one factor led to development of Kiswahili culture in East Africa?

For each of the questions 36 – 40, answer Either the Christian or Islamic questions but not both. No mark will be awarded to a candidate who attempts both alternatives in a number.

36. Either:- What important message did God tell Moses on Mountain Sinai?

Or:- What important message did angel Jibril bring to Muhammed on Mountain Hira?

37. Either:- Why did Joseph and Mary take baby Jesus to Egypt?

Or:- Why was prophet Muhammad forced to leave Mecca for Medina in 622AD?

38. Either:- Which prophet was swallowed by a fish because of his disobedience?

Or:- According to the Quaran, name the prophet who was swallowed by a fish due to his disobedience.

39. Either:- State any one way in which Abraham showed his obedience to God.

Or:- State any one way in which Abraham showed his obedience to Allah.

40. For both:- What symbol of faith in Islam is compared to the cross in Christianity?

SECTION B.

41. (a) Give two reasons why population in Uganda is increasing at a high rate.

(i) _____

(ii) _____

(b) Give two reasons why there is a low contraceptive use in Uganda today.

(i) _____

(ii) _____

42. (a) Give one way the police station promotes peace and security in the community.

(b) Give any two ways of caring for social service centres.

(i) _____

(ii) _____

(c) Identify any one thing that can destroy social service centres.

43. (a) Name two vegetation zones of Africa that are not in Uganda.

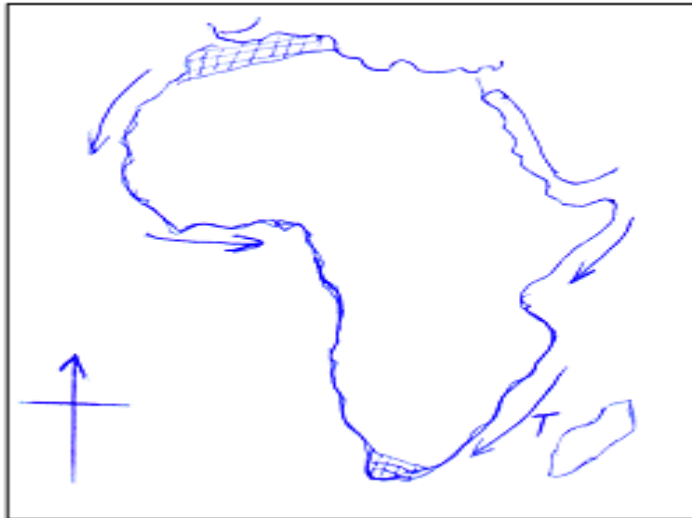
(i) _____

(ii) _____

(b) What do we call the vegetation that grows in drier areas of Africa?

(c) State the difference between planted and natural vegetation.

44. Study the map of Africa below and answer questions that follow.



(a) Name the type of climate located in the shaded part  .

(b) State any two economic activities carried out in the type of climate named in (44 a) above.

(i) _____

(ii) _____
(c) Name the type of ocean current marked T.

45. (a) List any two challenges that hinder development in African countries.

(i) _____

(ii) _____

(b) Suggest two ways the government of Uganda has tried to eradicate illiteracy.

(i) _____

(ii) _____

46. (a) Why is 8th October 1995 remembered in the history of Uganda?

(b) State two ways in which the constitution is related to elections.

(i) _____

(ii) _____

(c) Give one way the constitution promotes peace.

47. (a) Give two reasons why Africans fought for their independence.

(i) _____

(ii) _____

(b)

State any two problems that Africans faced during their struggle for independence.

(i) _____

(ii) _____

48. (a)

Point out two differences between Uganda and Nigeria in terms of geographical location.

(i) _____

(ii) _____

(b) Give one way the oil drilling industry in Nigeria benefit its high population.

(c) How is the Semliki river valley similar to the Niger Delta in terms of economic activities?

49. (a) What is plantation farming?

(b) Identify any three problems faced by the farmers in the East African states.

(i) _____

(ii) _____

(iii) _____

50. (a) Give a reason why developing countries are encouraging the growth of small scale industries.

(b) Identify three factors that influence industrial growth in an area.

(i) _____

(ii) _____

(iii) _____

For each of the questions 51 to 55, Answer Either the Christian or Islamic questions but not both. No marks will be awarded to a candidate who attempts

both alternatives in a number.

51. Either:- (a) What is a miracle according to Christianity?

(b) Give two major reasons why Jesus performed miracles during his life time.

(i) _____

(ii) _____

(c) State the miracle Jesus performed at Cana.

Or:-a) What is a miracle according to Islam?

(b) Give two major reasons why prophet Isa performed miracles during his life time.

(i) _____

(ii) _____

(c) State one belief among the Moslem community about Isa.

52. Either:-

(a) Mention one example of a good decision made by a Christian.

(b) State two results of making a good decision.

(i) _____

(ii) _____

(c) Suggest one reason why making bad decisions is not liked by God.

Or:-

(a) Mention one example of a good decision made by a Moslem.

(b) State two results of making a good decision.

(i) _____

(ii) _____

(c) Suggest one reason why making bad decisions is not liked by Allah.

53. Either:- (a) Write three things Christians observe during lent season.

(i) _____

(iii) _____

(b) Identify the significance of Palm Sunday to Christians.

Or:- (a) Which three groups of people can be excused from fasting during the month of Ramadhan?

(i) _____

(ii) _____

(iii) _____

(b) Identify the festival that marks the end of Ramadhan.

54. Either: (a) State the importance of these sacraments as practiced by Christians.

(i) Confirmation

(ii) Anointing of the sick.

(iii) Holy matrimony.

(b) What does Jesus say about divorce?

Or:- (a) Name two pillars of Islamic practice. (Ibadat)

(i)

(ii)

(b)

List down any two beliefs (Iman) of Moslems.

(i)

(ii)

55. For both:-

(a) Identify any two qualities of a good wife.

(i)

(ii)

(b)

Give two reasons why people marry.

(i)

(ii)

SET NINE SECTION A.

1. Name the smallest social set up of people in a community.

2. What title is given to the chief accounting officer in a district?

3. In which district is Uganda's International Airport located?

4. How do farmers promote industrial growth in a country?

5. State any one effect of climate change.

6. In which type of rule are presidents elected into office?

7. State one way people living along the Nile River control floods.

8. Mention any one way people living along slopes of mountains can control landslides.

9. State one way alternative fuel can conserve our natural forests.

10. How useful was the church missionary society to IBEACO during colonial rule?

11. Which group of people built the Tanzam railway?

12. Why is it bad to have wars in the neighbouring countries frequently?

13. State one way people of Pre-colonial societies were politically organized.

14. Why was Ghana called God coast before its independence?

15. Name the only highland Nilotic tribe in Uganda.

16. Name the map symbol drawn below.


17. Name the country in East Africa which has the largest population density.

18. On which river in Africa was Akasombo dam/river project constructed?

19. Write the first line in the last stanza of the Uganda National Anthem.

20. How does illiteracy among people effect development in a country?

21. What title is given to the political head of a municipality?

22. State any other cause of land fragmentation in a country apart from high population.

23. State any one way Ugandans express patriotism in their country.

24. Give one way the government of Uganda can overcome a deficit budget.

25. What type of rainfall is experienced in areas that are flat?

26. Mention any one tribe which was affected by the evolution of Uganda's boundaries.

27. How can the construction of dams on African rivers be dangerous to the tourism industry?

28. Give one step followed when conducting elections.

29. State one problem African countries faced after getting Independence from the colonialists.

30. What does the golden colour signify on the African Union flag?

31. Give any one effect of insecurity in a given community.

32. State one way Ugandans benefit from being under democratic rule.

33. How are bye-laws important to people in a community?

34. Name the first government hospital to be constructed by the colonialists in Uganda.

35. What is a by-election?

For questions 35 to 40, answer either christianity or islam but not both.

36. Either: How was the death of the first born males of the Egyptians a blessing to the Israelites?

Or:- Why do Muslims remember prophet Mohammad?

37. Either:- Name the man of God who persecuted the early church but later became a great preacher.

Or:- In which way does fasting help a Moslem?

38. Either:- What is fear in Christianity?

Or:- Give the meaning of fear in Islam.

39. Either:- Give one cause of divorce among married Christians today.

Or:- Give one cause of divorce among married Moslems today.

40. Either:- State any one factor that may fail a Christian marriage to take place.

Or:- Give any one factor which may fail Islamic marriage to take place.

SECTION B

41. (a) Apart from the judiciary, name one other organ of a democratic government.

(b) Mention any one department under the judiciary.

(c) Give any two groups of people who interpret laws under the judiciary.

(i) _____

(ii) _____

42. (a) Why was the Namirembe agreement signed?

(b) State any one of the terms of the Namirembe agreement.

(c) Give two reasons why Kabaka Mutesa II was exiled in 1953.

(i) _____

(ii) _____

43. (a) Give any one way a National budget helps a country to develop economically.

(b) Apart from taxes, give any other two ways the government gets income.

(i) _____

(ii) _____

(c) Give any one challenge the government faces in collecting taxes.

44. (a) Give the meaning of Nomadic pastoralism.

(b) State two characteristics of Nomadic pastoralism.

(i) _____

(ii) _____

(c) Identify one disadvantage of practising nomadic pastoralism.

45. (a) Name the first European explorer to cross through Masai land.

(b) Mention any two ways explorers sped up the colonization process of African states.

(i) _____

(ii) _____

(c) Give any one problem that was faced by the explorers in East Africa.

46. (a) What is land fragmentation?

(b) State any two causes of land fragmentation in an area.

(i) _____

(ii) _____

(c) Give one way people may use land to increase on their source of income.

47. (a) What is Burundi's neighbouring country to the East?

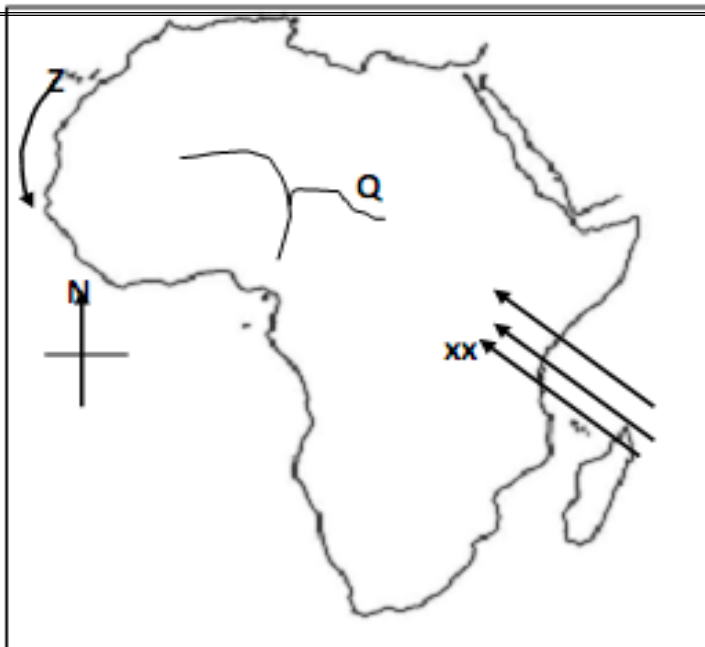
(b) Why should Burundi promote good relationship with its neighbours ?

(c) Mention any two ways in which the above named country benefits from Burundi.

(i) _____

(ii) _____

48. Study the sketch map of Africa and answer questions about it.



(a) Name the river marked Q.

(b) How do winds marked xx affect the climate of East Africa?

(c) Use letters KKK to show the position of the Atlas Mountains.

(d) Name the ocean current marked Z.

49. (a) Why did European missionaries come to East Africa?

(b) Mention two forms of Western civilization that the missionaries brought to East Africa.

(i) _____

(ii) _____

(c) What health problem did early European missionaries face in East Africa?

50. (a) Apart from Kampala, name any one other capital city in the East Africa community countries.

(b) Identify the ruling political parties in the following East African countries.

(i) Uganda _____

(ii) Kenya _____

(iii) Tanzania _____

For Questions 51 to 55 Answer Either Christianity or Islamic But Not Both.

51. Either:-

(a) Who was the king of Judea at the time of the birth of Jesus Christ?

(b) What showed the three wise men that Jesus Christ had been born?

(c) Name any two presents that were brought to baby Jesus Christ by the three wise men.

(i) _____

(ii) _____

Or:-

(a) Who was the first person to be converted to Islam?

(b) Who converted the above person to Islam?

(c) Mention any two things that happened after the above person was converted to Islam.

(i) _____

(ii) _____

52. Either:-

(a) Give any one reason why Jesus went to the wilderness.

(b) Why did the devil tempt Jesus in the wilderness?

(c) Mention any two ways in which Christians overcome temptation.

(i) _____

(ii) _____

Or:-

(a) Who escorted Prophet Mohammad to Taif?

(b) Why did Prophet Mohammad go to Taif?

(c) Mention any two ways Muslims overcome temptations.

(i) _____

(ii) _____

53. Either:-

(a) State any one way Christians can promote good relationship with God.

(b) Give any one benefit of maintaining good relationship with God.

(c) State any two Godly values that should be seen in a true Christian.

(i) _____

(ii) _____

Or:-

(a) State any one way Muslims can promote good relationship with Allah.

(b) Give any one benefit of maintaining good relationship with Allah.

(c) State any two values that should be seen in a true Muslim.

(i) _____

(ii) _____

54. Either:-

"I will ask the Father, and he will give you another helper, who will stay with you

forever (John 14: 16 – 26)”

(a) Who said the above words?

(b) Name the promised helper according to the statement above.

(c) State any two ways in which the helper guides Christians today.

(i) _____

(ii) _____

Or:-

(a) Name the first caliph of Prophet Mohammad.

(b) In which two ways were caliphs helpful in Islam?

(i) _____

(ii) _____

(c) Give one lesson a Muslim can learn from the work of caliphs.

55. Either:-

“Are you the king of the Jews?”

(a) Who was asked the above question?

(b) Who asked the above question?

(c) Why was the above question asked to the person in (a) above?

(d) What things happened after the two people had completed their conversation?

Or:-

“They are the enemy, so be aware of them.”

(a) Whom did Allah refer to as the enemy?

(b) Which chapter in the Qu’ran did Allah condemn the above enemy?

(c) Give two qualities of such enemies Allah referred to in the above chapter.

(i) _____

(ii) _____

SET NINE SECTION A.

1. What is the direction of Uganda from Kenya?

2. For what reason do school children wear uniform?

3. Which political party led Uganda to independence?

4. What was the major reason for the coming of Arabs to the coast of East Africa?

5. Give any one way early man obtained food.

6. Why does the government of Uganda encourage all citizens to have the National Identity Cards?

7. Name one active volcanic mountain in Uganda.

8. In which way is poaching a problem to the tourism industry?

9. Give any one reason for which Uganda national flag is flown at half mast.

10. Write in full the date, month and year when Uganda got her independence.

11. Name the rebellion that was staged in Kenya during the British colonial rule.

12. Under which organ of democratic government are civil servants?

13. Why was Liberia not colonized by the Europeans?

14. In which way did Dr. Albert Cook promote health of Ugandans?

15. If it is 2:30 pm at Greenwich Mean Time (G.M.T), what time will it be in a place which is 450 East of Greenwich meridian?

16. What title is given to the political head of a sub county?

17. Write down any one reason why a country like Rwanda should trade with her neighbours.

18. Which cash crop is used in the manufacture of insecticides?

19. Name one landlocked country in the horn of Africa.

20. Which lake in Uganda has oil deposits?

21. Give any one state that was formed as a result of the Great Trek in South Africa.

22. Which physical feature covers the largest part of Africa?

23. Which body is responsible for conducting elections in Uganda today?

24. Suggest one importance of feeder roads in rural areas.

25. Describe the desert climate?

26. Mention any one use of a school notice board.


27. State the role of sergeant at arms in Parliament.

28. Name the city in Africa that is crossed by longitude 0° .

29. Why is Bigo Byamugenyi important to Uganda?

30. Mention any one factor that influence population distribution in East Africa.

31. In the space below, draw a map of water pot.



32. Compare Mt. Atlas and Drankensberg mountains in terms of formation.

33. Why is culture important to people?

34. Why is northern Kenya sparsely populated?

35. Abraham was facing south-west. If he turned 1350 anti clockwise, which direction will he face?

For questions 36 – 40, answer Either Christianity OR Islam but both in a number.

36. Either:- In which city was Jesus Christ born?

Or:- In which city/town was Prophet Mohammad born?

37. Either:- Why do Christians celebrate 3rd June every year?

Or:- Why do Moslems go to Mecca during the holy month of Ramadhan?

38. Either: Name Jesus' apostle who strongly doubted his resurrection.

Or:- Why is it important for Muslims to clean their bodies before praying?

39. Either:-Name the mother of the John the Baptist.

Or:- Name the mother of Prophet Mohammad.

40. Either:- How do the Christians overcome temptations?

Or:- How do Moslems overcome temptations?

SECTION B.

41. (a) What is weather?

(b) State any two weather conditions.

(i) _____

(ii) _____

(c) Of what importance is a rain gauge to a farmer?

42. (a) What is an ethnic group?

(b) Identify the largest ethnic group of Africa.

(c) Match ethnic group with the tribe correctly in list A and list B.

List A

Plain Nilotes

Bantu

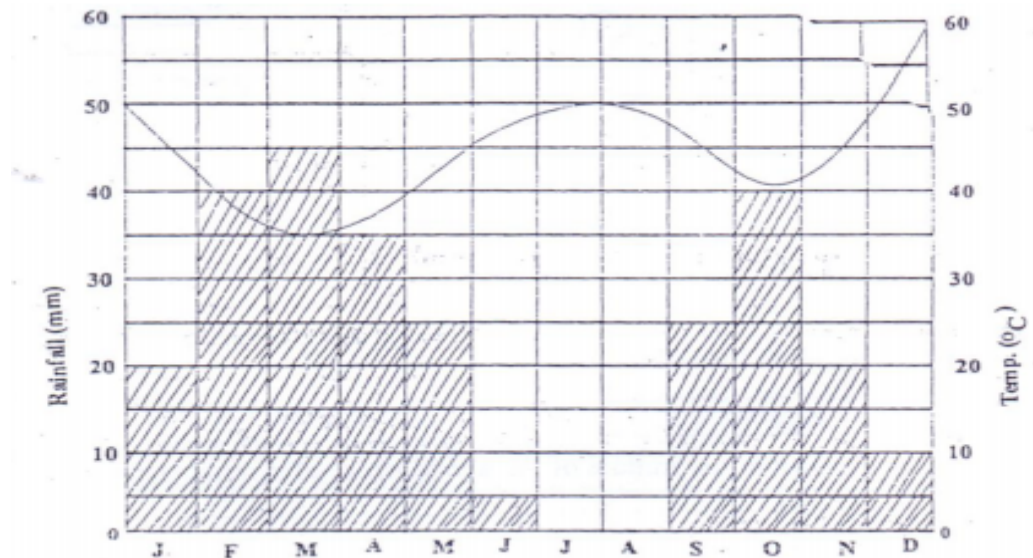
List B

Nyamwezi

Karimojong

Lugbara

43. Use the graph below to answer the questions.



(a) Name the month which received the highest amount of rainfall.

(b) In which climatic region was this graph recorded?

(c) What is the relationship between rainfall and temperature?

(d) In which month was the lowest temperature recorded?

44. (a) Give any two economic uses of natural forests.

(i) _____

- (ii) _____
(b) Mention two factors that influence vegetation distribution.
(i) _____
(ii) _____

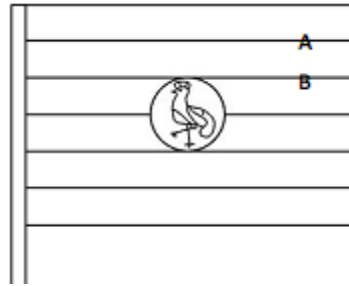
45. (a) Why was the Uganda railway called so?

(b) Why was the Uganda railway extended to Pakwach?

(c) Mention two problems faced by builders of the Uganda railway.

- (i) _____
(ii) _____

46. Study the drawing shown below and answer questions about it.



(a) Who designed the above national symbol?

(b) Name colours of the national symbol shown above.

(i) A _____

(ii) B _____

(c) Why is the bird in the middle of the above national symbol standing on one leg?

47. (a) What are swamps?

(b) Identify any two crops grown in swamps.

(i) _____

(ii) _____

(c) State any one effect of swamp drainage.

48. (a) What is communication?

(b) State any two traditional means of communication.

(i) _____

(ii) _____

(c) Name any one radio station that people of your area listen to most.

49. (a) Who were the founders of Bunyoro-Kitara Empire?

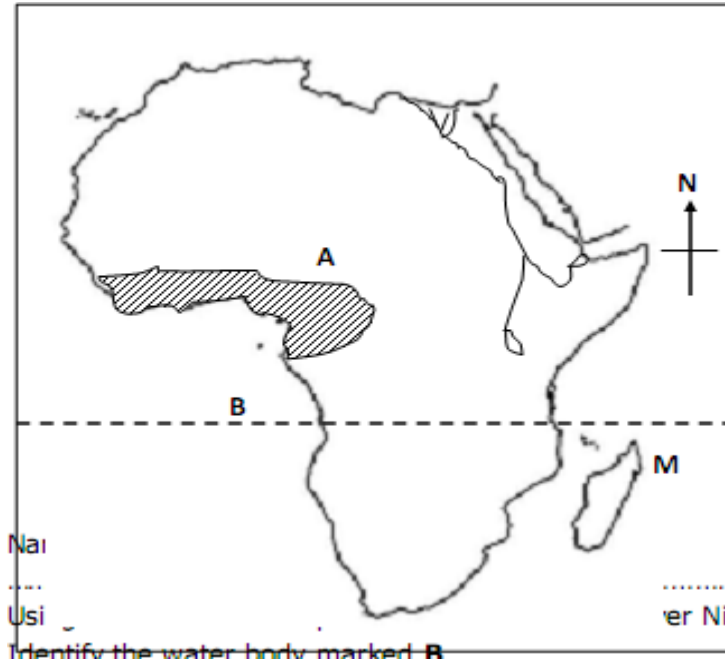
(b) Name the founder of Luo-Babito dynasty.

(c) Give two factors that led to the decline of Bunyoro-Kitara Empire.

(i) _____

(ii) _____

50. Study the map of Africa and answer the questions that follow.



(a) Name the climatic region marked with letter A.

(b) Using letter K mark the position of the mouth of river Nile.

(c) Identify the water body marked B.

(d) Name the latitude marked M.

For questions 51 – 55, answer Either Christianity Or Islam but not both in a number

51. Either:-

(a) On which day did the Holy Spirit appear to the apostles?

(b) Outline any two fruits of the Holy Spirit.

(i) _____

(ii) _____

(c) How does the Holy Spirit help Christians today?

Or:

(a) On which day do Muslims celebrate the end of Ramadhan?

(b) List any three groups of people who are exempted from fasting.

(i) _____

(ii) _____

(iii) _____

52. Either:-

(a) Which creature is blamed for the fall of man?

(b) Name the garden where Adam and Eve were put to live.

(c) Name two sons of Adam and Eve.

(i) _____

(ii) _____

Or:-

(a) Which animal tempted Haawa to sin against Allah?

(b) Where did Adam and Haawa live?

(c) Name two sons of Adam and Haawa.

(i) _____

(ii) _____

53. Either:-

(a) Who was the first Christian martyr?

(b) How did the person named in (a) above meet his death?

(c) Mention any two lessons we learn from the Uganda martyrs.

(i) _____

(ii) _____

Or:-

(a) Who was the first Islamic martyr?

(b) How did the above named person meet her death?

(c) Give any two ways the early followers of Prophet Mohammad suffered.

(i) _____

(ii) _____

54. Either:-

(a) What material did God use to make man?

(b) Why was man made the summit of all God's creation?

(c) How did man break his relationship with God?

(d) State any one result of the fall of man.

Or:-

(a) Name any four compulsory prayers said by Moslems.

(i) _____

(ii) _____

(iii) _____

(iv) _____

55. For both candidates.

(a) What term is given to the union of a man and a woman as husband and wife?

(b) Give any two reasons why people unite like in (a) above.

- (i) _____
(ii) _____
(c) Identify any one quality of a good partner to unite with as in (a) above.

SET TEN
SECTION A.

1. Why are the pupils in your school taught how to draw maps?

2. Which East African country is referred to as the "Pearl of Africa"?

3. Give one reason for not allowing people to settle in swamps.

4. Name one building material which can be got from a lake.

5. How was the formation of Lake Albert different from that of Lake Victoria?

6. How is a feeder road useful to the people in your sub-county?

7. Mention one basic need of a community.

8. How does mountain Rwenzori promote economic development?

9. Give one effect of spending money without a budget?

10. In what way has the parliament of Uganda tried to protect our forests?

11. How did Ethiopia become a land locked country?

12. Why are most people in Libya settled along the Mediterranean sea?

13. State one disadvantage of an extended family.

14. Mention one way that children's rights are being abused in our schools today.

15. Why is it possible to carry out large scale irrigation in Sudan?

16. How will the programme of rural electrification reduce rural-urban migration in Uganda?

17. Give one way Apartheid affected the blacks in the Republic of South Africa.

18. Why is a passport important?

19. Give one reason for introducing many industries in Uganda.

20. Which missionary brought the first improved cotton seeds in Uganda?

21. Apart from attracting tourists, how is Lake Katwe economically important?

22. Name the East African country which is not a member of COMESA.

23. Give one symbol of the East African Community.

24. How was the formation of Mt. Elgon similar to that of Mt. Mufumbiro?

25. Mention one way that the Africans affected by white settlers in Kenya.

26. Why was it easy for the Arab traders to get slaves from East Africa?

27. Mention one problem facing the forests in Uganda.

28. Why is it good for countries to join international organizations?

29. Give one factor that has led to the increase in population in Kampala?

30. How is the Uganda police force promoting Law and Order in your home area?

31. Apart from spreading Christianity and Islam, how have the religious Organisations improved the standards of living in our communities?

32. How is the government of Uganda trying to fight poverty in our homes?

33. Which organization unites all English speaking countries of the world?

34. Why are some people kept in prisons?

35. Give one factor that delayed the entry of Europeans into Africa.

For each of the questions 36 to 40, answer EITHER the Christian OR Islamic question but NOT both. No marks will be given to a candidate who attempts both questions in a particular number.

36. Either:- Give one way Jesus Christ showed concern for the suffering.

Or:- Give one way Mohammad (PBUH) showed concern for the suffering.

37. Either:- How was Adam helpful after the completion of creation?

Or: How was Adam helpful after the completion of creation?

38. Either:- Why is it good for every Christian to make an offertory?

Or:- Why is it good for every Muslim to give Zakat el-Fitri?

39. Either:- Give one duty of the church when a Christian dies.

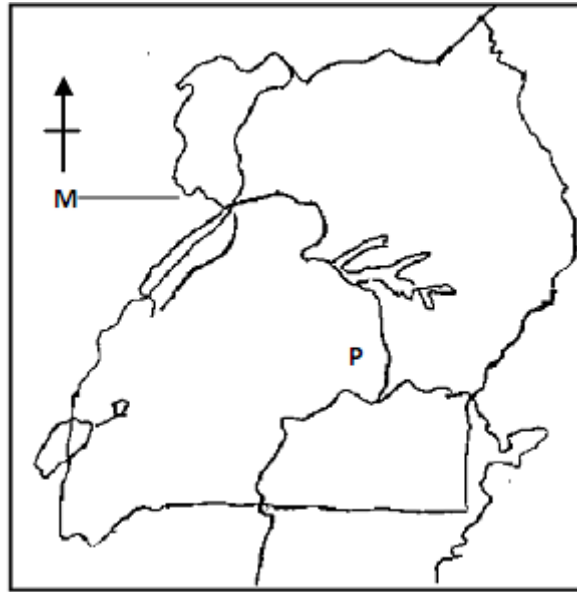
Or:- Give one duty of angles when muslims die.

40. Either:- Why was King Herold unhappy with the birth of Jesus Christ?

Or:- Why did Prophet Mohammed migrate from Mecca to Median in 622A.D?

SECTION B.

41. Study the map below and answer questions a – d.



(a) Name one district of Uganda found in the feature marked P.

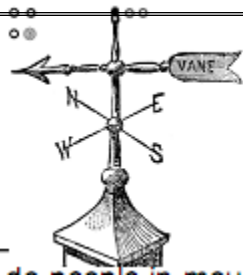
(b) What problem does the district in (a) above face?

(c) How is the government of Uganda trying to settle the problem in (a) above face?

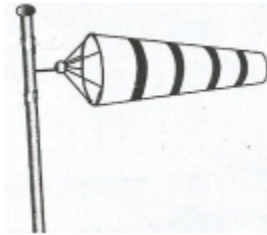
(d) In what way is feature P economically different from M?

42. (a) Why is it good to study weather?

(b) Give one importance of each of the following instruments:-



(i)



(ii)

(c) Why do people in mountainous areas wear thick clothes?

43. (a) Name two countries that share the Nile valley basin.

(i)

(ii)

(b) Why did farming in Africa originate in the Nile Valley?

(c) Which cash crop is grown under irrigation in the Nile Valley?

44. (a) Apart from power, give two factors that have led to the fast development of Kampala City.

(i)

(ii)

(b) Mention two problems that have been caused by large population in the towns of Uganda.

(i)

(ii)

45. (a) Give two traditional methods of fishing.

(i)

(ii)

(b) Why does the fishing industry need a good transport system?

(c) How have the modern fishing methods affected the fishing industry?

46. (a) Apart from Civil Authority, give two types of authority.

(i)

(ii)

(b) Write down two symbols of civil authority.

(i)

- (ii) _____
47. (a) Mention two causes of the refugee problem in Africa.
(i) _____
(ii) _____
- (b) Give one organization that is helping the refugees in Uganda.

- (c) State one way refugee problem can be reduced in Africa.

48. (a) Name two Pan-Africanists who led their countries to self rule in E.Africa.
(i) _____
(ii) _____
- (b) Give two methods used by the Pan-Africanists?
(i) _____
(ii) _____
49. (a) Name two symbols of Uganda that are found in our Coat of Arms.
(i) _____
(ii) _____
- (b) Why is it important for every country to have symbols?

- (c) How do school children show patriotism at their assemblies?

50. (a) Name the country in the Horn of Africa which is affected by civil war?

- (b) Give one way that the African Union is helping the people who are suffering from wars in Africa.

- (c) Give two reasons how wars have affected the people of Africa.
(i) _____
(ii) _____

For each of the questions 51 – 55, answer EITHER the Christian OR the Islamic question but NOT both. No marks will be given to a candidate who attempts both questions in a particular number.

51. Either:

Complete the sentences in B by matching with words in List A below:

List A

Adam
Abel
Eve
Cain
Noah

List B

The first person to kill
The first person to be killed
The first person to sin
The first person to hear God's voice

Or: Complete the sentences in B by matching with words in List A below:

List A

Adam
Habeel
Qabeel
Hawa
Nuuh

List B

The first person to kill
The first person to be killed
The first person to sin
The first person to hear Allah's voice

52. Either:-

(a) Who was sold to the Egyptians by his brothers?

(b) Which prophet was born in Egypt?

(c) Why was baby Jesus taken to Egypt?

(d) Give one result of the Exodus.

Or:-

(a) Who was sold to the Egyptians by his brothers?

(b) Which prophet was born in Misri?

(c) Name the prophet who was a son of Mariam?

(d) Give one result of the Exodus.

53. Either:-

(a) Give two ways of reconciliation.

(i)

(ii)

(b) State two benefits of reconciliation.

(i)

(ii)

Or:-

(a) Give two ways of reconciliation.

(i)

(ii)

(b) State two benefits of reconciliation.

(i)

(ii)

54. Either:-

(a) Which summarized commandment makes us to believe that there is only one God?

(b) Give two Christian practices that strengthen one's faith.

(i)

(ii)

(c) What is the greatest reward from being faithful?

Or:-

(a) Which pillar of Islam makes us to believe that there is only one Allah?

(b) Give two Islamic practices that strengthen one's faith.

- (i) _____
(ii) _____

(c) What is the greatest reward from being a faithful Moslem?

55. Either:-

(a) Give the meaning of the word Saint.

(b) State one traditional belief about life after death.

(c) Mention two Christians who have been declared as Saints by the church.

(i) _____

(ii) _____

Or:-

(a) Write the first month of Islamic calendar.

(b) When does fasting take place in Islam?

(c) Identify any two benefits of fasting in Islam.

(i) _____

(ii) _____

SET ELEVEN SECTION A

1. Give the importance of a sweeping rota in a classroom.

2. Which vegetation zone is found along the coast of East Africa?

3. Why is it important for people to go to school and acquire skills?

4. Mention one way of preserving culture.

5. State any one source of solar energy.

6. Why are children's rights important to children in an area?

7. Write down one cause of poor relationship in a home.

8. Give one advantage people in Equatorial climatic region have over those in other climatic regions.

9. Apart from money, mention any other measure related to transport.

10. Mention the social service centre where one can report a robbery case.

11. How is industrial growth a problem to the environment?

12. What are multi-purpose river projects?

13. How is a high population a disadvantage to a district like Kampala?

14. Give the capital city of the Democratic Republic of Congo.

15. How can trespassing cause conflicts in our community?

16. Give the main duty of the Uganda People's Defence Forces (UPDF).

17. Mention the region of Africa that has the highest number of countries.

18. Who were the earliest people to live in Africa?

19. Give any one factor that led to the collapse of the Portuguese rule at the coast of E. Africa.

20. What title is given to the head of all civil servants in a district?

21. Who was the first ruler of the Bachwezi?

22. Mention any one group of foreigners that came to Africa.

23. How is slave trade different from slavery?

24. Which was the first animal to be tamed by man?

25. Mention any one product obtained from hides.

26. State one way of caring for plants.

27. Why were Indian Coolies brought into East Africa?

28. Give one product got from soft wood.

29. It is 2:00p.m at Accra (GMT). What time is it in East Africa?

30. Which compass direction lies opposite of South West?

31. Name the Nationalist who led Burundi to independence.

32. State the raw material from which insecticides is obtained.

33. How will the construction of wide and new roads in Kampala be of importance?

34. State any bad practice done by electorates during elections.

35. Why are most of Africa's natural resources not exploited?

For questions 36 – 40, answer EITHER the Christian OR Islamic questions but not both.

36. Either: How has HIV/AIDS led to suffering in Uganda?

Or: How has HIV/AIDS led to suffering in Uganda?

37. Either: Apart from Christianity and Islam, mention any other example of a world religion.

Or: Apart from Christianity and Islam, mention any other world religion.

38. Either: Name the Arch Bishop of Uganda who was declared a saint early this year.

Or: Give one example of a martyr in Islam.

39. Either:- Why was Jesus Christ liked by His parents at childhood?

Or: Why was prophet Isa liked by His parents at childhood?

40. Either : Give any one similarity between African Traditional Religion and Christianity beliefs.

Or: State any one similarity between African Traditional Religion and Islamic beliefs.

SECTION B.

41. (a) What is a tribal group?

(b) Mention any two causes of early migration.

(i) _____

(ii) _____

(c) State the last Bantu tribe to migrate in East Africa.

42. (a) How did R. Nile influence the coming of most explorers to Uganda?

(b) Mention any two effects of European exploration in Africa.

(i) _____

(ii) _____

(c) Give any one problem the explorers encountered in Africa.

43. Give two methods of fishing.

i) _____

ii) _____

b) Mention any two importance

i) _____

- ii) _____
44. (a) What is tourism?

(b) Give a reason why tourism is called an invisible export.

(c) Under which ministry are game parks and game reserves in Uganda?

(d) How do craft makers benefit from the tourist attraction features in their localities?

45. (a) Give the meaning of weather forecasting.

(b) How is weather forecasting important to the following people;
(i) sailors _____
(ii) pilots _____
(c) Name the biggest meteorological station in Uganda.

46. (a) What was the "Berline conference"?

(b) Name the European who called for the Berlin conference.

(c) Mention any one European country that attended the Berlin conference.

(d) Give any one effect of the Berlin conference.

47. (a) Explain the meaning of environmental conservation.

(b) State one danger of plastic materials to the environment.

(c) Give any one way people can prevent the danger mentioned in 47(b) above.

(d) Write NEMA in full.

48. (a) What is a constitution?

(b) How is a national constitution important in a country?

(c) How many constitutions has Uganda had?

(d) Which constitution abolished kingdoms in Uganda?

49. (a) Give any two reasons why the fishing industry should be well developed among African countries.
(i) _____
(ii) _____
(b) State any one problem faced by the fishing industry in Uganda.

(c) State any one possible solution to the problem mentioned in (b) above.

50. Match the following correctly.

A
Tilda irrigation scheme
Mwea Tebere
Kilombero valley
Gezira irrigation scheme

B
Tea
cotton
rice
sugarcane

For each of the questions 51 to 55, answer Either Christianity or Islamic but not both.

51. Either:- "If you are the son of God, command this stone to become bread" (Luke 4:3)

(a) Who said those words?

(b) Name the person to whom the words were said.

(c) Where was the person in (b) above to hear those words?

(d) Why did the person in (a) above say those words?

Or: (a) Explain the importance of performing Hijja.

(b) How is Hijja different from Umrah?

(c) Write down any two activities performed during Hijja.

(i) _____

(ii) _____

52. Either:- (a) Mention any two forms of suffering faced by Christians.

(i) _____

(ii) _____

(b) State any two ways in which Jesus Christ shared in people's suffering.

(i) _____

(ii) _____

Or:- Mention any two forms of suffering faced by Muslims.

(i) _____

(ii) _____

(b) How did prophet Isa share in people's suffering?

(i) _____

(ii) _____

53. Either:- (a) Write down the two greatest commandments as taught by Jesus Christ to His people.

(i) _____

(ii) _____

(b) How are the Ten Commandments similar to the national constitution?

(c) Give any one importance of observing

54. Either: (a) What is marriage?

(b) Give any one reason why marriage is called a social institution.

(c) State any two purposes of marriage.

(i) _____

(ii) _____

Or: (a) What is marriage in Islam?

(b) Give any one reason why marriage is called a social institution.

(c) State any two purposes of marriage.

(i) _____

(ii) _____

55. Either:-

(a) What is selfishness?

(b) Give any two examples of selfish behaviour among Christians.

(i) _____

(ii) _____

(c) State one cause of selfish behavior among Christians .

Or:-(a) What is selfishness?

(b) Give any two examples of selfish behaviour among Muslims.

(i) _____

(ii) _____

(c) State one cause of selfish behavior among Muslims.

SET TWELVE SECTION A

1. Name the instrument that tourists use to find the direction of places.


2. How is the Blue Nile important to the Gezira Irrigation Scheme?

3. What title is given to the traditional ruler of Bunyoro Kitara?

4. Give one danger of brick making to the environment.

5. State one problem facing people in urban areas.

6. Draw a picture of a table in the space below.



7. State one importance of lines of latitude and longitude on a map.

8. _____
What is the meaning of the term resource?
9. _____
Mention the major cash crop grown in Kilombero Valley in Tanzania.
10. _____
Name the river that attracted most explorers to Uganda.
11. _____
Write any one method that Africans used to demand for independence.
12. _____
Why is Savanna Vegetation famous in Africa?
13. _____
Which service is provided by a veterinary doctor in the community?
14. _____
State one reason why people keep domestic animals at home?
15. _____
Name the raw material used for making glass.
16. _____
What does the Red colour on the Kenyan flag symbolize?
17. _____
Give one way the government can help people affected by landslides.
18. _____
How do farmers contribute to the growth of agro –based industries?
19. _____
Give one way peace and security can be promoted in the society.
20. _____
State one importance of clouds to people.
21. _____
Which flag was used in Uganda by the British?
22. _____
Give one importance of improved transport system in a country.
23. _____
State one major problem facing natural forests in Uganda today.
24. _____
Which water mass washes the West coast of Africa?
25. _____
Why did the Bantu settle in the Great Lakes Region?
26. _____
State the major cause of the Lamogi Rebellion.
27. _____
Why does the sun appear earlier in Mombasa than in Kasese?
28. _____
State one benefit of the tourism industry to a country.
29. _____
Which ethnic group occupies most part of Uganda?
30. _____
How are laws useful in society?
31. _____
Give one problem the government faces during tax collection.

32. Give the meaning of the term barter trade.
33. Mention any one effect of a civil war to the people of Africa.
34. How are humps important to road users?
35. Apart from Nalubaale Dam, give any other dam on R. Nile in Uganda.

For questions 36 – 40, answer either Christianity or Islamic but not both

36. ***Either:*** Mention the first of the ten commandments.

Or: Mention the first pillar of Ibadat.

37. ***Either:*** How is Palm Sunday important to Christians?

Or: How is Idd-el-fifr important to Moslems?

38. ***Either:*** Mention any one talent according to the Christian teaching.

Or: Give any one talent according to Islamic teaching.

39. ***Either:*** Give one problem caused by adultery.

Or: Which pillar encourages Muslims to help others?

40. ***Either:*** Give one importance of faith to a Christian.

Or: Give one importance of faith to a Muslim.

SECTION B

41. a) What is population census?

b) Give two reasons why government carries out population census.

(i) _____

(ii) _____

c) State one danger of high population density.

42. a) Mention two examples of economic activities.

(i) _____

(ii) _____

b) Give two reasons why people carry out economic activities.

(i) _____

(ii) _____

43. a) Write in full: GEACO

b) Why was GEACO formed?

c) Give two methods the colonialists used to establish their rule in A. Africa.

(i) _____

(ii) _____

44. a) Mention any two organs of a democratic government.

b) Give one role played by the following:

i) Uganda Police Force

ii) Uganda Prisons service.

45. Study the sketch of Africa below and use it to answer the questions that follow.



(a) Name the island country marked "Z"

(b) Which type of climate is experienced in the areas shaded xxx

(c) Use letter N to show the water body where River Nile pours its waters.

(d) Why was the feature labeled w constructed?

46. a) Give two factors that can promote good communication among people.

(i) _____

(ii) _____

b) Mention any two advantages of using a radio for communication.

(i) _____

(ii) _____

47. a) Mention any two duties of the Electoral Commission in Uganda.

(i) _____

(ii) _____

b) Give any two problems faced by the body above in carrying out its work.

(i) _____

(ii) _____

48. Give any one type of a leader apart from political leaders.

b) Mention one way through which a person becomes a political leader.

c) State any two examples of political leaders.

i) _____

ii) _____

49. a) What is mining?

b) State two importance of mining.

(i) _____

(ii) _____

c) Give one problem affecting mining in East Africa.

50. a) How did the early missionaries influence the following:

i) education?

ii) agriculture?

b) Give two problems faced by early missionaries in East Africa.

(i) _____

(ii) _____

For questions 51-54 answer either Christianity or Islamic but not both on the same number.

51. ***Either:***

a) Write one contribution made by the following people towards Christianity in Uganda.

i) Alexander Mackay _____

ii) Apollo Kivebulaya _____

b) Mention any two qualities of a good Christian.

(i) _____

(ii) _____

Or: a) Write short notes about each of the following:

iii) Sheikh Shaban Ramadhan Mubajje _____

iv) Sheikh Siiman Kasule Ndirangwa. _____

b) Mention any two qualities of a good Muslim.

(i) _____

(ii) _____

52. ***Either:*** "This is my blood of the new covenant which is poured out for many"
(Mark 14: 24 – 25)

a) Who said those words according to the Bible?

b) Mention one sacrament the above person made on Holy Thursday.

c) What is used today in church to represent the blood of the person in (a) above.

d) Give one lesson we learn from the above teaching.

Or: a) Mention two signs that will take place before the Day of Judgement.

(i) _____

(ii) _____

b) Give two ways a Muslim can prepare for the Day of Judgment.

(i) _____

(ii) _____

53. **Either:** a) What does the word gospel mean?

b) Name the first gospel writer according to the Bible.

c) Mention two parables Jesus taught.

(i) _____

(ii) _____

Or: a) What does the word caliph mean?

b) Name the first caliph according to Islam.

c) How were the caliphs important in Islam? (Give two)

(i) _____

(ii) _____

54. **Either:**

a) Give any two causes of success in one's studies.

(i) _____

(ii) _____

b) Mention any two things successful people enjoy.

(i) _____

(ii) _____

Or:

a) Mention any two causes of failure in one's studies.

(i) _____

(ii) _____

b) Give two ways one can avoid failure in studies.

(i) _____

(ii) _____

55. **For both:**

a) Give any two factors one should consider before choosing a marriage partner.

(i) _____

(ii) _____

b) Write any two causes of marriage break down.

(i) _____

(ii) _____

SET THIRTEEN

SECTION A

1. Which feature on the Uganda coat of Arms shows that Uganda is a God fearing country?


2. State one way of solving conflicts between the school and the neighbourhood.

3. Give the reason why native Africans refused to take part in the construction of the Uganda railway?

4. How was the creation of Eritrea a disadvantage to the traders in Ethiopia?

5. Mention one way of preserving culture in our society.

6. Give any one problem associated with the development of natural resources in Africa.

7. In the space below, draw a map symbol of a canal.


8. Why was the Trans-Atlantic trade called the triangular trade?

9. Apart from Edward Blyden, mention any other earliest pan Africanist.

10. Which factor makes South Sudan to be one of the Nile Valley countries?

11. Which industry can be recommended to be set up in Karamoja region?

12. How does an increase in fuel prices affect the prices of goods?

13. Why is it important for a child to have an account in the bank?

14. How does Uganda benefit from the discovery of crude oil in the Albertine region?

15. Give one way nationalism is practiced in Ugandan schools today.

16. Mention any one challenge faced by the Uganda prison services.

17. Why is Gregory Maloba remembered in the political history of Uganda?

18. State the reason why areas covered with shrubs and thicket have few people.

19. How do school children benefit from the exploitation of graphite?

20. Name the largest national park in Uganda.

21. How can the problem of cattle rustling be solved in north eastern Uganda?

22. State any one value of wearing a school uniform.

23. Give one way of guarding against the effects of floods in an area.

24. Name one basic need of a P.7 child.

25. Give any one effect of rural urban migration.

26. Why are there many monkeys in Bwindi Impenetrable National park?

27. State the reason why early man ate raw meat during the Old Stone Age period.

28. In which one way did the Buganda chiefs benefit from the 1900 Buganda agreement?

29. State the importance of a birth certificate.

30. Why did river Nile attract European explorers to come to Uganda?

31. Give one advantage a drum has over Newspapers as means of communication.

32. Why do trees in rain forests have broad leaves?

33. Give a reason why the United Nations Organization was formed at the end of the Second World War in 1945.

34. How were the Aberdare forests helpful to the MAU MAU fighters?

35. What type of rainfall is received in Karamoja region?

For questions 36 – 40, answer Either Christianity or Islam But Not Both.

36. Either: State any one reason why Christians pray together.

Or: State any one reason why Moslems pray together.

37. Either:- What did God promise the apostles before he ascended to heaven?

Or:- What did prophet Muhammad promise his caliphs?

38. Either:- Name any one promise God made to Abraham.

Or:- Name any one promise Allah made to Abraham.

39. Either: Why did God punish people during Noah's time?

Or: Why did God punish people during Nuulu time.

40. For Both: Mention any one similar practice between Christianity and Islam.

SECTION B.

41. Study the sketch map of Africa below and answer the questions that follow.



(a) Name the ocean current marked with AA.

(b) State the major economic activity done in vegetation zone marked xx.

(c) Which regional grouping brings together countries in the shaded region above?

(d) Using letter P, show the first colony to be formed in Africa.

42. (a) Give the meaning of the term population structure.

(b) Mention any one information collected during population census.

(c) State any one reason why population census is conducted.

(d) Write down any one benefit a country enjoys as a result of low population.

43. Match correctly the ethnic groups with their tribes.

Ethnic groups

Tribe

Nilotics

Zulu

Bantu

Tuareg

44. (a) What are social activities?

(b) State any one importance of social activities.

(c) Mention any two problems faced by people as they carry out their work in your district.

(i) _____

(ii) _____

45. (a) Which organization was replaced by the United Nations organization?

(b) Write any one role of the following specialized agencies of the United Nations.

(i) WHO _____

(ii) UNHCR _____

(c) Give any one success of the United Nations.

46. (a) Mention the major irrigation scheme in the Nile valley.

(b) Name the Nile Valley country which is located in the upper Nile.

(c) Mention any two problems faced by the tenant farmers in the Gezira irrigation scheme.

(i) _____

(ii) _____

47. (a) Apart from taxation, give any other source of government revenue.

(b) State any two ways the government spends its revenue.

(i) _____

(ii) _____

(c) How can the government reduce on the problem of a deficit budget?

48. (a) How did the missionaries solve the problem of language barrier during the spread of Christianity in Uganda?

(b) Where was the first mission station established in East Africa?

(c) State any two achievements of early Christian missionaries to Africa.

(i) _____

(ii) _____

49. (a) What is the major duty of the Uganda People's Defense forces?

(b) State two ways the police maintains law and order.

(i) _____

(ii) _____

(c) Give one way children can help the police to maintain law and order.

50. (a) What is a political party?

(b) Mention any one reason why political parties were formed in the early 1950s.

(c) State any two problems facing political parties in the African continent today.

(i)

(ii)

From questions 51 – 55, answer Either Christianity Or Islam But Not Both.

51. Either: "A voice of one calling in the desert made a straight path for you" (Matt 3:3)

(a) Whose voice is referred to in the quotation?

(b) Whose path was being proclaimed in the quotation above?

(c) Which prophet in the Old Testament has the same message like that in the above quotation?

(d) Apart from the prophet in a above, name any other prophet who talked about the coming of Jesus.

Or :- (a) Name the prophet who is called the speaker of Allah.

(b) Who was the mother of Isa?

(c) Which prophet is remembered for demonstrating great patience along suffering in Islam?

(d) Which prophet is said to be the seal of the prophets in Islam?

52. Either: (a) Which miracle did Jesus perform during his arrest?

(b) How did Jesus show power over death?

(c) Give two reasons why Jesus performed miracles.

(i)

(ii)

Or:- (a) Which miracle was performed by prophet Muhammad?

(b) How did Prophet Muhammad show his power as a prophet?

(c) Give two reasons why Prophet Muhammad performed miracles.

(i)

(ii)

53. Either:- Match and write the given information in list A to that in list B correctly.

List A

List B

Holy communion	makes one member of God's family.
Confirmation	Unites a man and a woman as husband and wife legally.
Holy matrimony	Christians share the blood and body of Jesus.
Baptism	Strengthens one's faith in God

Or: Match and re-write the given information in list A to that in list B correctly.

List A

- (a) Nakkah
- (b) Belief in the will of Allah
- (c) Ablution
- (d) Saum

List B

- Fasting
- cleaning of body parts.
- initiates one into Islam.
- Holy marriage in Islam.

54. Either: (a) What does the word Pentateuch mean?

(b) From which part of the Bible do we find the Pentateuch ?

(c) Mention any two books of Pentateuch.

(i) _____

(ii) _____

Or:- (a) What is the Hadith ?

(b) "Bismillah Rahim Raheem" what does it mean?

(c) Name the prophet whom Allah revealed the first Surah of the Quran.

(d) How is a Quran a unique book?

55. For both:

a) What is reconciliation?

b) Give any two tradition ways of securing reconciliation.

(i) _____

(ii) _____

c) How is reconciliation important to Christians or Muslims today?

SET FOURTEEN

SECTION A.

1. Give one way children can show responsibility at home.

2. Why should people pay taxes in time?

3. Name the line of longitude marked 0° .

4. On which River is Kainji dam?

5. How do people benefit from the work of NEMA?

6. How is the Red Cross useful to the flood victims in an area?

7. How important is wildlife to the economy of Uganda?

8. Why do most farmers settle around water bodies?

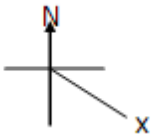
9. Mention any one symbol of the East African community.

10. How did UPC manage to win the 1962 independence elections?

11. Give one reason why industries should be constructed near sources of raw materials.

12. Mention any one important source of water in your community.

13. Write one danger of child labour.

14. Name the compass direction marked X.


15. Why is it easier to take care of a small family?

16. Name the district leader who heads all hospitals in a district.

17. Name one group of people that is not allowed to vote during National elections.

18. Give one way colonial masters delayed African countries to get independence.

19. Write one way the Judiciary can promote law and order in a country.

20. Give one reason why corruption should be fought in Uganda.

21. How can farming be improved in order to fight poverty?

22. Which colour of the Uganda National flag symbolizes brother-hood?

23. Why are there no hippos in Kidepo valley National Park?

24. Who was the president of Uganda by the time the East African community collapsed in 1977?

25. Give one way Ugandans can benefit from a National language.

26. How is around about important to the drivers?

27. Why does the temperate vegetation zone favour dairy farming in South Africa?

28. Mention any one factor that made Mau May rebellion to last for long in Kenya.

29. Why are mineral resources not fully exploited in East Africa?

30. Why is it shorter to use air transport from Entebbe to Kampala than Road transport?

31. What title is given to a person in charge of elections at a polling station?

32. Give one way people benefit from decentralization.

33. Why were there regents in Buganda kingdom by the time of signing the 1900 Buganda agreement?

34. Mention the political reason given for creating many districts in Uganda.

35. Give any one way in which rubbish can be managed in a school environment.

For numbers 36 to 40 answers either Christianity or Islam but not both.

36. EITHER:- Write one problem that early Christian converts faced?

OR:- Write one challenge that early Muslim converts faced.

37. EITHER:- Why do Christians celebrate Easter day?

OR:- Why do Moslems celebrate Iddi Adhuha?

38. EITHER:- What title is given to the followers of Jesus today?

OR:- What title is given to the followers of prophet Mohammad today?

39. EITHER:- Write one way in which a Christian can strengthen his faith in God.

OR:- Write one way in which a moslem can strengthen his faith in God.

40. EITHER:- Why was Jesus Christ circumcised at the age of 8 days?

OR:- Why was prophet Mohammad circumcised at an old age?

SECTION B.

41. (a) Which element of weather helps farmers to winnow their harvested crops?

(b) Mention any two ways human activities affect the climate of an area negatively.

(i) _____

(ii) _____

(c) Why is it important for crop farmers to know weather forecasting?

42. (a) Name the British administrator who introduced indirect rule in Tanzania.


(b) What term was used to mean the use of local leaders by the colonialist to rule on their behalf?

(c) How did the colonialists benefit from indirect rule?

(i) _____

(ii) _____

43. Study the Coat of Arms below and answer questions that follow.



(a) Name the features marked:-

B _____

D _____

(b) What does A symbolize?

(c) Why was feature C chosen as Uganda's National emblem?

44. Use the graph below to answer questions that follow.

(a) Name the type of climate described above.

(b) Write the lowest temperature recorded.

(c) How is the temperature related to rainfall?

(d) Which economic activity is mainly practiced in the above climate?

45. (a) Name the main gold mining area in South Africa.

(b) State two reasons why mining industry in Africa is not fully developed.

- (i) _____
 (ii) _____
 (c) Why is capital very important in the mining industry?

46. (a) Name the Portuguese explorer who invented a compass.

(b) State the use of a compass.

(c) Give one reason why the Portuguese explorers wanted to discover a sea route to India.

(d) State one reason why the Portuguese were interested in settling at the East African coast.

47. (a) Which National exercise enables the government to know the number of people living in a country?

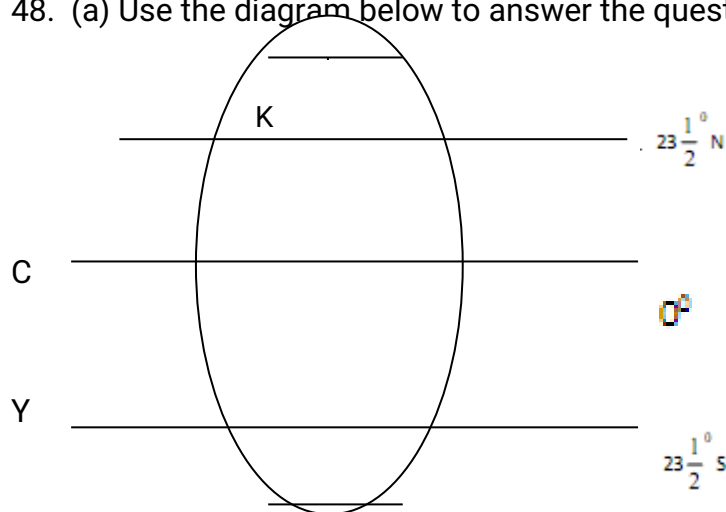
(b) State any two ways how a low population can negatively affect the economic development of a country.

(i) _____

(ii) _____

(c) Why does the Uganda government encourage people to practice family planning?

48. (a) Use the diagram below to answer the questions that follow.



(a) Name the imaginary line marked with letter Y.

(b) Why do places near imaginary line marked C receive a lot of rainfall.

(c) Name any one country in Africa crossed by latitude marked with letter K.

(d) Give any one way imaginary line marked C is important to a map

reader.

49. (a) Name the ministry in charge of Electoral commission in Uganda.

(b) State two duties of the Electoral commission.

(i)

(ii)

(c) Mention any one bad practice before elections.

50. Study the map below and answer the questions about it.



(a) Name the country marked with letter C.

(b) Why does river A flow into L.Victoria ?

(c) What climatic condition is experienced in the area marked with letter xxxxx?

(d) How is town marked with letter D important in the economic development of Uganda?

For numbers 51 to 55 answer either christianity or islam but not both.

51. EITHER:-

(a) Name any two free services you as a Christian can offer to your church.

(i)

(ii)

(b) State two benefits of offering free services in a church to a Christian.

(i)

(ii)

OR:-

(a) State any two free services you can offer to the mosque as a Moslem child.

(i) _____
(ii) _____

(b) State any two benefits of offering free service to a Moslem.

(i) _____
(ii) _____

52. EITHER:-

(a) Give one reason why pupils need to pray before.

(i) eating food

(ii) sleeping

(iii) sitting for examinations.

(b) State any one advantage of reading the Bible every day.

OR:-

(a) Give the reason why Moslem pupils pray before

(i) eating food.

(ii) sleeping

(iii) sitting for examinations

(b) State one advantage of reading /reciting the Quran every day.

53. EITHER:-

(a) State any two ways churches have created employment to most people in Uganda.

(i) _____
(ii) _____

(b) Give two ways how churches solve the challenge of lack of enough furniture.

(i) _____
(ii) _____

OR:-

(a) Give any two reasons why it is not good to worship small gods today.

(i) _____
(ii) _____

(b) State two reasons why witch craft is discouraged in the Moslem community today.

(i) _____
(ii) _____

54. EITHER:-

(a) Give two reasons why it is not good to revenge when someone has

done wrong to you.

(i) _____

(ii) _____

(b) Give two ways people benefit from reconciliation today.

(i) _____

(ii) _____

OR:-

(a) State two reasons why it is not good to revenge when someone does wrong to you.

(i) _____

(ii) _____

(b) Why does Islamic encourage reconciliation in its teachings?

(i) _____

(ii) _____

55. FOR BOTH CANDIDATES.

Match A with B correctly.

A

(a) 1st day of creation

(b) 2nd day of creation

(c) 4th day of creation

(d) 5th day of creation

B

sky

sea animals

light

sun and moon

SET FIFTEEN

SECTION A.

1. Why do churches have signposts?

2. How did the Republican constitution affect traditional institutions?

3. Give one contribution of Uganda Railway to the economic development of Uganda.

4. Give one way of preventing conflicts between a school and the community.

5. State the body responsible for carrying out National population census in Uganda.

6. Mention one problem that can be caused by potholes on roads.

7. Give the importance of the road symbol below



8. In which way did land affect the settlement patterns of early migrants?

9. Mention one effect of the earth's rotation.

10. Give one safety method of controlling loss of life by accidents on water

transport.

11. Write one effect of HIV /AIDS on the economic production.

12. State one effect of drought in an area.

13. Which early man's discovery enabled him to live in caves?

14. Give one result of the Berlin conference.

15. How does a community benefit from an industry that has been set up in their area?

16. Why did the colonialists encourage natives to grow cash crops?

17. How does the supreme law promote human rights?

18. Mention any one raw material obtained from swamps.

19. Name the European country that attempted to colonise Ethiopia.

20. State one factor that has made DRC not to fully utilize its natural resources.

21. How has drought affected the people of Uganda today?

22. Name the Organisation that was replaced by African Union (AU).

23. How is kilombo valley and Natal similar in terms of economic activities.

24. Mention any one responsibility of a child in a home.

25. How is peace and security important in any given country?

26. Which type of leaders is mostly obtained through inheritance?

27. Mention any one challenge faced by social service providers in Uganda.

28. Apart from sending people's letters, state one other service offered by the Uganda post office.

29. State one problem faced by island districts in Uganda.

30. Give any one cause of depopulation in an area.

31. Name the forces that led to the formation of fold Mountains.

32. Why do we need local leaders in our communities?

33. Apart from teachers, which other people create order in a school.

34. How did the coming of the Luo Babito affect Bunyoro Kitara kingdom?

35. Mention any one town in East Africa with an oil refinery.

For questions 36 – 40, answer Either Christianity or Islam but not both.

36. Either: Why shouldn't a Christian fear death?

Or: Why shouldn't a Moslem fear death?

37. Either: Mention one way Abraham showed faith in God.

Or: Mention one way Ibrahim showed faith in God.

38. Either: Why did God create human beings last?

Or: Why did Allah create human beings last?

39. Either: Apart from praying, how else can a Christian overcome temptation?

Or: Apart from praying how else can a Muslim overcome temptation?

40. Either: Why do Christians consider the coming of the Holy Spirit as a very important event?

Or: Why do Muslims perform Hajj?

SECTION B

41. (a) What title is given to a person who heads the central bank of Uganda?

(b) Give any two importance of the central Bank of Uganda?

(i) _____

(ii) _____

(c) Why should people who enter the central Bank be checked when entering?

42. (a) Give any one factor that influences climatic

(b) Mention any two climatic regions not found in Uganda.

(i) _____

(ii) _____

(c) How can crop farming be made possible in drier areas of Uganda?

43. (a) What is the importance of a market in the community?

(b) How can market areas be kept clean for trade?

(c) Give one way the government benefits from markets.

(d) Name any one market in your local community.

44. (a) Apart from school fees, write any two other ways schools get income.

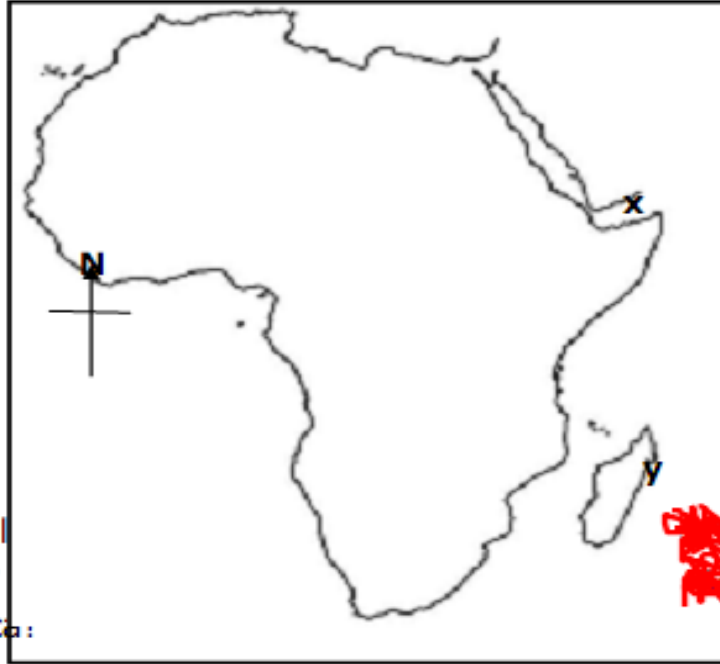
(i) _____

(ii) _____

(b) Mention any one item found on a school signpost.

(c) Under which Ministry are secondary schools in Uganda?

45. Study the map below and answer questions that follow.



(a) Use letter K to show the Suez canal on the above map.

(b) Why is the region of Africa marked X on the map referred to as the Horn of Africa?

(c) Apart from using water transport, how else can one reach Island Y?

(d) How is the southern part of Africa different from the northern part in terms of size?

46. (a) Name the body that is responsible for the maintenance of major roads in Uganda.

(b) How is good transport network important in any given country?

(c) Write down two causes of road accidents.

(i) _____

- (ii) _____
47. (a) What is an ethnic group ?

(b) Mention any one race of people in Africa.

(c) State any one climatic factor that led to the migration of the Bantu.

(d) Give the Bantu tribe that formed Rwanda kingdom.

48. (a) Give the meaning of the word budgeting.

(b) Mention two parts of a budget.
(i) _____
(ii) _____
(c) How is the parliament involved in budget making?

49. (a) What are children's rights?

(b) Mention any two importance of children's rights.
(i) _____
(ii) _____
(c) State one way children's rights can be protected in Uganda.

50. (a) Apart from Tanzania, mention any other East African country that was colonized by the Germans.

(b) How were the Jumbe and Akidas useful to the colonialists in Tanganyika?

(c) Why did the natives of Tanganyika hate the Germans?

(d) Give any one rebellion that was staged against the German in Tanganyika.

For questions 51 to 55, answer Either Christian or Islam but not both.

51. Either:- (a) At what age did Jesus start his ministry?

(b) What led Jesus Christ into wilderness?

(c) State the first miracle to be performed by Jesus Christ.

(d) Why did Jesus Christ perform the above mentioned miracle?

Or:- At what age did prophet Mohammad start spreading Islam?

- (b) What helped prophet Mohammad to survive his enemies during the flight to Medina?

(c) Give two reasons why Prophet Mohammad performed miracles.
(i) _____

- (ii) _____
52. Either:- (a) Write A.T.R in full.

(b) Write down any two similar beliefs between ATR and Christianity.
(i) _____
(ii) _____
(c) Why are the dead called living dead in ATR beliefs ?

- Or:- (a) Write ATR in full.

(b) Write down any two similar beliefs between ATR and Islam.
(i) _____
(ii) _____
(c) Why are the dead called living dead in ATR beliefs?

53. Either:- (a) Give two signs of a Christian family.
(i) _____
(ii) _____
(b) Apart from Holy Wine, mention any two other symbols of Christian faith.
(i) _____
(ii) _____

- Or:- (a) Give any two signs of an Islamic family.
(i) _____
(ii) _____
(b) Apart from the kibra, mention any two other symbols in Islam.
(i) _____
(ii) _____

54. Either:- (a) What is a religion?

(b) Mention two examples of major world religions.
(i) _____
(ii) _____
(c) Give one major sect of Christianity.

- Or:- (a) What is a religion?

(b) Mention two examples of major world religions.
(i) _____
(ii) _____
(c) Give one major sect of Islam.

55. For Both:-
(a) What is a talent?

(b) In which way do musicians benefit from their talents?

(c) Give the talent religious leaders use to save sinners.

(d) How do people misuse their talents today?

SET SIXTEEN
SECTION A

1. Write down one element of weather that farmers depend on so much.

2. Why did the Bantu settle in the Lake regions of East Africa?

3. Why is it important for all adult people in Uganda to have national identity card?

4. Which social service is provided from the place whose symbol is shown below?



5. How did the construction of Uganda railway lead to the coming of some Asians into East Africa?

6. Name the agency of United Nations responsible for children.

7. Give one way commercial banks help people to develop economically.

8. Where is "frontal" rainfall received?

9. Which country has the smallest part of Lake Victoria?

10. Which Buganda king invited the Christian missionaries in Uganda?

11. What represents wildlife on the Uganda national coat of arms?

12. How can shortage of skilled manpower be solved in the mining industries of Africa?

13. Mention one useful product got from softwood.

14. Why don't most people use bark cloth in Uganda today?

15. Which group of people provides the main raw materials to agro-based industries?

16. Which people carried out slave trade in East Africa?

17. Name the first money to be used in Uganda.

18. Why was the Trans-Saharan trade called so?

19. How can livestock farmers prepare for a drought?

20. What do we call the movement of people out of a country to another for settlement?

21. State one duty of a father in a home.

22. Which type of transport is suitable for transportation of heavy large and shapeless goods from East Africa to Asia?

23. Which river forms s confluence with Nile at Nimule?

24. Why is Uganda a member of common wealth?

25. How is a national constitution important to a country?

26. State one benefit of the East African community to member countries.

27. Name one method of irrigation.

28. What name is given to a section of River Nile between Lake Victoria and Lake Albert?

29. Give one way pan-Africanists demanded for independence of African states.

30. State the main tribe that settles around mountain Moroto.

31. Which system of leadership was introduced to East Africa by the Bachwezi?

32. What caused the Sudan's mutiny?

33. Suggest one reason why the African chiefs supported slave trade.

34. What do we call the cutting down of trees for timber?

35. Why is it important for voters to be educated before participating in national elections?

In questions 3to 40, answer either Christianity or Islam but NOT both alternatives in one number.

36. Either: What name is given to the day when Jesus was welcomed to Jerusalem as a King of Kings?

Or: Where did Prophet Muhammad go to escape the Meccans who wanted to kill him.

37. Either: Who was the mother of Jesus Christ?

Or: Who was the mother of Prophet Isa?

38. Either: State one importance of religious symbols.

Or: Give one importance of religious symbols.

49. Either: Mention one behaviour that can build good relationship in a Christian family.

Or: Mention one behaviour that can build good relationship in a Moslem family.

SECTION B 60 (Marks)

41. (a) Why was it wrong for the Arabs to call the coast of East Africa an empire?

(b) What name did the Arabs give to the black people at the coast of East Africa?

(c) How did the Arabs promote trade in East Africa?

(d) Write down one coastal town the Arabs developed.

42. (a) Besides being sold to get income, state another importance of cash crops.

(b) Give two ways the government can help crop farmers.

(i) _____

(ii) _____

(c) What do we call crops that take more than one year to mature?

43. (a) Why should stories of long ago be told to children?

(b) Mention one traditional story told by the:-

(i) Acholi _____

(ii) Baganda _____

(c) State one advantage of written records as a source of history.

44. (a) Name two types of transport that passengers use in Uganda.

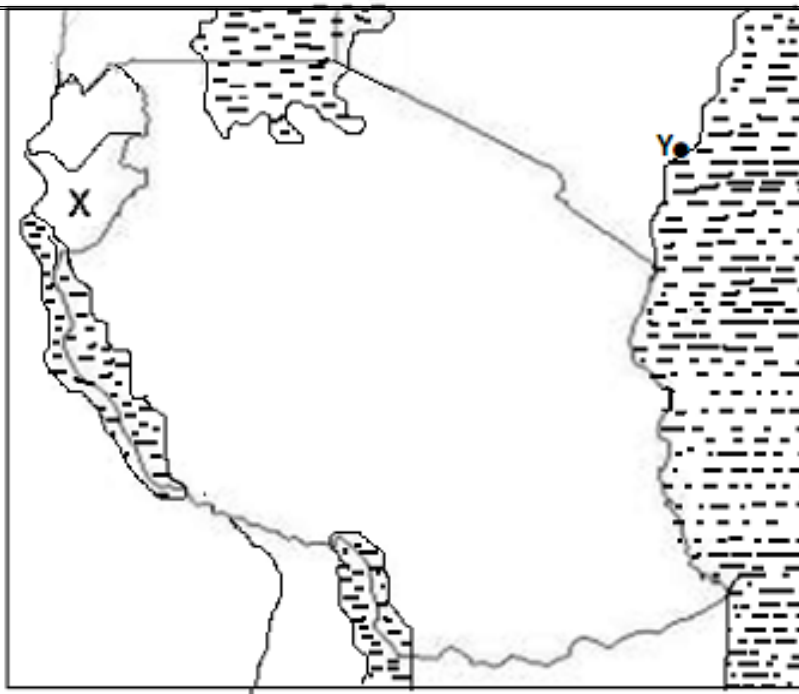
(i) _____

(ii) _____

(b) Why are some means of transport not used by some people?

(c) State one cause of accident on water bodies.

Study the map below and use it to answer question 44.



45. (a) From the map, name:-

(i) country X _____

(ii) Sea port Y _____

(b) How is port marked Y important to Uganda?

(c) Use letter A to show on the map the location of Malawi.

46. (a) What is decentralization?

(b) Give any two reasons for dividing Uganda into many new districts.

(i) _____

(ii) _____

(c) Name one district found in Lake Victoria.

47. (a) Name one ethnic group in Southern Africa.

(b) State one reason why white settlers were interested in some African countries.

(c) Give one way Apartheid policy was practiced in South Africa.

(d) How did the settlement of Europeans and Asians in African countries benefit African natives?

48. (a) Give the importance of longitudes and latitudes to map readers.

(b) How is the Equator similar to the Greenwich meridian?

(c) Name the capital city in Africa crossed by the prime meridian.

(d) When does equinox occur?

49. (a) What title is given to the head of a republic?

(b) State one advantage of having many political parties on a country.

(c) Why are the personalities below remembered in the political history of Uganda?

(i) Kangave Musaazi

(ii) Milton Obote

50. (a) State two requirements for a manufacturing industry to be set up in an area.

(i) _____

(ii) _____

(b) What do we call industries that produce raw materials?

(c) How can a manufacturing industry promote development in an area?

In questions 51 to 55, answer either Christianity or Islam but NOT both alternatives in one number.

51. Either: (a) Why did God create man?

(b) Besides man, what else was created on the sixth day?

(c) Give one way you can care for the creation below;

(i) plants _____

(ii) animals _____

Or: (a) Name the prophet remembered for creation.

(b) Who was the wife of the above prophet?

(c) State one way you can care for Allah's creation below;

(i) plants _____

(ii) animals _____

52. Either: "Build a boat for yourself out of good timber and make it 133 metres long, 22 metres wide and 13 metres high." (Gen 6:14 – 16)

(a) Whom did God tell those words?

(b) Why did God save the person in (a) above from the floods?

(c) How long did the rain take to stop?

(d) What moral lesson can you learn from the above bible story?

Or: (a) Give two reasons why Allah wants us to work.

(i) _____

(ii) _____

(b) Give two ways in which work creates joy.

(i) _____

(ii) _____

53. Either: (a) Mention the first two Bible books with Good news about Jesus Christ.

(i) _____

(ii) _____

(b) What general name is given to the books that talk about the life of Jesus?

(c) Why should a P.7 child read a bible?

Or: (a) On which mountain was the Qura'n revealed to Prophet Muhammad?

(b) What do we call the saying and teachings of Prophet Muhammad?

(c) Give two reasons why a Muslim child should read the holy Qura'n.

(i) _____

(ii) _____

54. Either:

(a) How much was paid to Judas Iscariot for betraying Jesus?

(b) How did Judas Iscariot meet his death?

(c) What do we learn from Judas Iscariot?

(d) Give one reason why people betray others today.

Or: (a) Give two ways the first Muslim converts were tortured.

(i) _____

(ii) _____

(b) Write down two ways the Muslim community helps suffering people today.

(i) _____

(ii) _____

55. **FOR BOTH.**

(a) Mention one evil practice that was practiced in African traditional religion.

(b) In which two ways is Christianity different from African traditional religion?

(i) _____

(ii) _____

(c) Which was the first foreign religion to be introduced in Uganda?

SET SEVENTEEN

SECTION A

1. Either: How did Mary the Mother of Jesus show her faith in God?

Or: How did Prophet Ibrahim show his faith in Allah?

2. Either: In which book of the Bible do we find the departure of the

Israelites?

Or: State the holy book revealed to Prophet Isa.

3. Either: How do Christians promote injustice in our community?

Or: How do Muslims promote injustice in our community?

4. Either: How have Christians taken care of Allah's environment?

Or: How have Muslims taken care of Allah's environment?

5. Either: Why should Christians apologize to one another whenever in wrong?

Or: Why should Muslims apologize to one another whenever in wrong?

6. Either: How do people benefit from playing football as a talent?

Or: How do Muslims benefit from playing netball and football as their talent?

7. Either: How do Christians make use of land as a resource?

Or: How do Muslims make use of land as a resource?

8. Either: What prevents some Christian believers from co-operating with one another?

Or: What prevents some Muslim believers from co-operating with one another?

9. Either: Why do some people prefer praying in a group?

Or: Why do some Muslim people prefer praying in a group?

10. Either: As God's people, how can we take care of sick people?

Or: How can we take care of sick people as Allah's believers?

11. Either: Why did Jesus weep for Lazarus?

Or: Why did Prophet Isa weep for the sick?

12. Either: According to the Bible, who was first person to commit murder?

Or; According to the Qur'an, who was first person to commit murder?

13. Either: How did God promise to save mankind from eternal suffering?

Or: How did Allah promise to save mankind from eternal suffering?

14. Either: How is Cana different from Canaan?
Or: How is Umra different from Hegira?
15. Either: How is fasting important to Christians?
Or: How useful is fasting to Muslim believers?
16. Either: Mention any one symbol of the Holy Spirit.
Or: Mention any one symbol of the Islamic faith.
17. Either: How is the Garden of Eden important in Christianity?
Or: How is the Garden of Eden important in Islam?
18. Either: How was the birth of Jesus perfect?
Or: How has the mosque cared for the bodily needs of its followers?
19. Either: Why did God choose Moses to rescue the Israelites out of Egypt?
Or: Why did Allah choose Musa to rescue the Israelites out of Misir?
20. For both: How do people benefit from being selfless?

SECTION B

21. Either: a) Why did God choose Noah to build the Ark by then?
b) Why did Noah curse his own son Ham?
c) Why did God save only Noah and his family?
d) Mention one lesson Christians learn from Noah's work.
Or: a) Why did God instruct Nuuh to build the Ark?
b) Why did Nuuh curse his own son Ham?
c) Why did Allah save only Nuuh and his family from the floods?
d) What lesson do Muslims learn from Nuuh's work.
22. Either: a) State one way in which people in our community can reconcile to one another.
b) Why is it important for Christians to reconcile each other?
(i) _____

(ii) _____
c) What would happen to God's believers in case they fail to reconcile?

Or: a) State one traditional way in which Allah's people can reconcile.

b) Why should people reconcile to one another?

(i) _____

(ii) _____

c) Maria and Aslam fought each other and then the teacher called them to solve their problem. What method was applied in this matter?

23. Either: How has RedCross helped God's believers?

(i) _____

(ii) _____

b) Which voluntary organization;

i) caters for orphans? _____

ii) AIDS victims? _____

Or: a) State any two ways in which the Red Cross is useful to Muslim believers.

(i) _____

(ii) _____

b) Which voluntary organization caters for;

i) people with HIV/ AIDs? _____

ii) orphans in Uganda? _____

24. Either: a) Why did the Israelites complain to Moses after crossing the Red sea?

b) Why did God call Moses on Mt. Sinai?

c) Give one excuse Moses gave for fearing to go to rescue the Israelites out of slavery.

d) Why did Moses die?

Or: Why did the Israelites complain to Musa after crossing the Red Sea?

b) Why didn't Musa reach the Promised Land?

c) State any one excuse that Musa gave for fearing to rescue the Israelites out of Msiri?

d) Why did Musa die?

25. Either: a) What is divorce? _____

b) State any two reasons as to why many married people divorcetoday.

(i) _____

(ii) _____

c) What does the Bible teach us about divorce?

Or: a) What is divorce? _____

b) Why is it that many married couples are breaking up today?

(i) _____

(ii) _____

c) State any one situation where divorce is allowed in Islam.

26. Either: a) How useful was the Holy Spirit to Jesus Disciples?

b) How did the Holy Spirit appear to Jesus' apostles on the day of Pentecost?

(i) _____

(ii) _____

c) Why do Christians need the Holy Spirit in their daily lives?

Or: a) What is Hadith?

b) Why do sick people need encouragement?

c) State any two problems caused by early sex in Islam.

(i) _____

(ii) _____

27. Either: a) Why did God give us the talents?

b) How best can one make use of his/ her talents?

(i) _____

(ii) _____

c) How can we use the talents given to serve ourselves?

Or: a) Why did Allah give us the talents?

b) How can one make use of his/ her talents to benefit others?

(i) _____

(ii) _____

c) How can we use the talents given to serve ourselves?

28. Either: a) State any two ways in which God's believers make use of their money wisely.

(i) _____

(ii) _____

b) How do Christians misuse their time in te day to day activities?

(i) _____

(ii) _____

Or: a) How do Allah's believers make use of the money given to them?

(i) _____

(ii) _____

b) State any two ways in which the people of Allah misuse their time in their daily activities.

- (i) _____
(ii) _____
29. Either: a) What is a sacrament? _____
b) Which sacrament did Jesus perform first? _____
c) What is the visible sign used in Baptism? _____
d) Why was Jesus baptized yet he was sinless? _____
- Or: a) Why are Muslims circumcised? _____
b) Why do pilgrims slaughter animals on Idd Day? _____
c) Mention the two types of Idd.
(i) _____
(ii) _____
30. Either: a) Give one reason as to why people work. _____
b) State any one kind of work done by God's believers. _____
c) State any two reasons as to why God's people tend to resign from their jobs?
(i) _____
(ii) _____
31. Either: a) What is suffering? _____
b) State any two reasons as to why people suffer.
(i) _____
(ii) _____
c) Mention any one form of suffering people meet in their day to day lives. _____
- Or: a) Briefly explain suffering. _____
b) What might be causing suffering among Allah's people today? _____
c) Mention any one form of suffering Allah's people meet today. _____
32. Either: a) How do people pray to their God? _____
b) State any one reason as to why some people don't pray to their God. _____
c) Why should Christians pray to God?
(i) _____
(ii) _____
- Or: a) How do Muslims pray to their Allah? _____
b) State one reason as to why some people don't have time for Allah? _____

c) Why do Muslims pray to their Allah?

(i) _____

(ii) _____

33. Either: a) Why is it useful for Christians to forgive one another?

b) How should people apologise to one another?

(i) _____

(ii) _____

c) When should Christians apologise to one another?

Or: a) Why should Muslims forgive each other?

(i) _____

(ii) _____

b) How should people apologise to one another?

c) When should people apologise to one another?

34. Either: a) What is a church? _____

b) How do Christians take care of their church?

(i) _____

(ii) _____

c) How do people contribute to the development of their church?

Or: a) State any two ways in which Muslims take care of their place of worship.

(i) _____

(ii) _____

b) How do people contribute to the development of their mosque?

c) How useful is a Mwazini in the Islamic faith?

35. ***For Both.***

a) Mention any two similarities of African Traditional Religions and modern religions.

(i) _____

ii) _____

b) State any two differences between the practices done by Muslims and Christians.

(i) _____

(ii) _____

SET EIGHTEEN

SECTION A

1. Which element of a map helps a pilot to find correct direction?

2. Name the best means of transport over sand dunes in the Sahara Desert.

3. Give any one way telephone companies in Uganda benefit from hills.

-
4. State any one way bad roads affect trade activities in an area.
-
5. Give any one way increase in level of prices affects prices of goods in an area.
-
6. Name the ministry in charge of tourism and wildlife in Uganda.
-
7. Write UNICEF in full.
-
8. State any one reason why swamp reclamation is important in an area.
-
9. Name the type of tax charged on locally made goods.
-
10. What kind of vegetation grows best in salty waters of the coast?
-
11. Name any one national game park famous for mountain gorillas.
-
12. State any one dangers of some vegetation in our environment.
-
13. What is a clan?
-
14. Who are Immigrants?
-
15. State any one challenge government meets in providing social services.
-
16. Give any one example of crafts made from local materials in the environment.
-
17. State any one reason why traders buy and sell goods in market areas.
-
18. Give any one reason why children who perform well in schools need to be given gifts.
-
19. State any one challenge people get as they carry out their daily duty of farming.
-
20. State any one way too much rain is dangerous to potters.
-
21. Give any one reason why most people have failed to start any business in Uganda.
-
22. Why is marriage introduction ceremony regarded as a social activity?
-

23. State any one advantage of having a district headquarters in an area.

24.State any one way thieves are dangerous in society.

25. Give any one example of a local material made from clay soil.

26. Name any social activity that promotes friendship among people in our community.

27. Give any one way the government of Uganda is promoting the provision of medical services.

28. Give any one way petrol stations are important to people who own vehicles.

29. State any one reason why people need safe drinking water sources in their communities.

30. Give the use of an anemometer in a weather station.

31. State any one way armed forces provide security in our country.

32.Give any one way the government of Uganda supports her farmers.

33. State any one reason why family planning services is good in a country.

34. Give any one way of fighting corruption in our society.

35.What is poaching?

For questions 36 – 40, answer Either Christianity Or Islam but not both alternatives.

36. Either:
Who was the mother of Jesus?

Or:
Who was the mother of Prophet Isa?

37. Either:
Which important event took place on Palm Sunday?

Or:
Which important event took place on Hejira?

38. Either:
What was the work of Moses before he was called by God?

Or:
What was the work of Musa before he was called by Allah?

39. Either:
In which book in the Bible is the story of creation?

Or:
What is hadith in Islam?

40. Either:
State any one way Christians use water to serve God.

Or:
State any one way Moslems use water to serve Allah.

SECTION B

41. (a) Who heads the judiciary of the Uganda government by title of office?

(b) State any two challenges facing the judicial organ in Uganda today.

i. _____

ii. _____

(c) What is the role of the judiciary?

42. Match minerals in list A with the places where they are mined in list B.

A		B
(a)	Cobalt	Kabale
(b)	Salt	Kasese
(c)	Wolfram	Tororo
(d)	Phosphates	Lake Katwe

43. (a) What term is used to mean the buying and selling of goods and services.

(b) State any two factors that attract business people in an area.

i. _____

ii. _____

(c) Give any one challenge traders selling similar goods face in an area.

44. The table below shows rainfall and temperature recorded in a region. Study it and answer questions that follow.

Months	J	F	M	A	M	J	J
Temperature	21	24	28	31	31	28	36
Rainfall (mm)	0	0	3	11	69	117	206

(a) Name any one month where rainfall was received.

(b) In which month was the highest amount of rainfall received?

(c) What was the temperature range?

(d) What kind of climate is shown on the table.

45.(a) Name the Ugandan politician who formed the first political party.

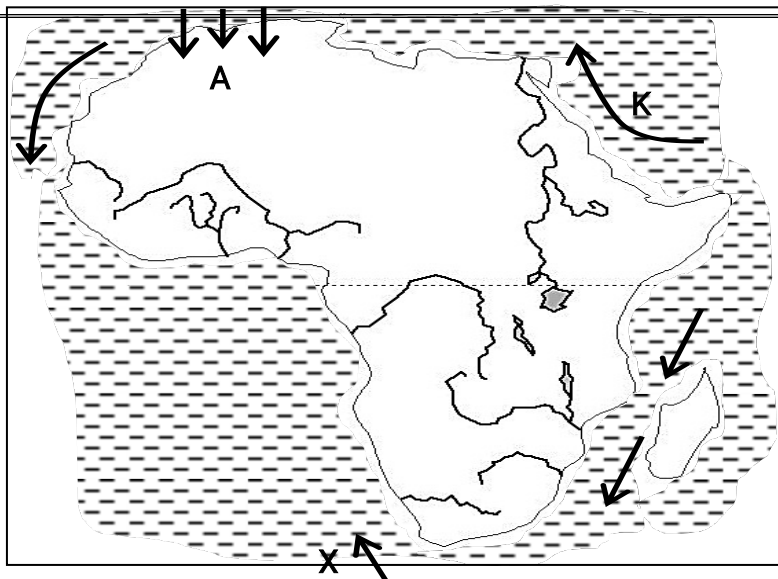
(b) State any two difficulties faced by nationalists during the struggle of independence.

i. _____

ii. _____

(c) Mention any one event that took place on 9th October, 1962 to show that Uganda had acquired freedom from colonialism.

46. Study the map of Africa below and use it to answer questions that follow.



(a) Name the winds marked A.

(b) Name the ocean current marked X.

(c) Why don't winds marked A form rainfall in an area?

(d) Name the water body marked K on the map.

47.(a) Name the body which unites all the oil producing countries in Africa.

(b) Mention the largest oil producing country in Africa.

(c) In which two ways do member states benefit from the body in (a) above.

i. _____

ii. _____

48.(a) What word is used to refer to a group of people who share similar origin and speak related languages.

(b) State any two factors that show that Bagishu and Baganda are in the same origin.

i. _____

ii. _____

(c) Why were the Bantu able to form kingdoms?

49. (a) Who were the first foreigners to come to East Africa.

(b) State two reasons why the above foreigners came to East Africa.

- i) _____
 ii) _____
 (c) State one problem faced by the early traders in East Africa.

50. (a) What are primary industries?

(b) State two advantages of having primary industries in a country.

i. _____

ii. _____

(c) State any one disadvantage of an industry constructed far away from the source of raw materials.

For questions 51 – 55, answer Either Christianity or Islam but not both alternatives. No marks will be awarded to a candidate who attempts both alternatives.

51. Either:

Match the days of the Christian calendar in list A with their meanings in list B.

List A

List B

- | | |
|----------------------|---|
| (a) Ascension Day. | Day Jesus was born. |
| (b) Holy Thursday | Day Jesus went to heaven. |
| (c) (c)Christmas day | Marks beginning of fasting. |
| (d) Ash Wednesday | Day Jesus served the last supper to the apostles. |

Or:

Match the information in list A with that in list B.

List A

List B

- (a) Miraj
 (b) Eid-el-fitr
 (c) Umra
 (d) Isra

52. Either:

(a) What does the word 'seed' mean in the parable of the sower?

(b) State any two reasons why some Christians fail to practice what has been preached to them.

i. _____

ii. _____

(c) How do priests help Christians to practice what has been preached?

Or:

(a) What does the Islamic word Kutubah mean?

(b) State any two reasons why some Moslems fail to practice what has been preached to them.

li _____

(c) State any one way Imams help Moslems to fear Allah.

53. Either:

(a) How did the death of Jesus Christ affect Christians?

(b) Name the first two people to see the empty tomb of Jesus.

i. _____

ii. _____

(c) Why was Simon Peter able to preach the word of God?

Or:

(a) Apart from Abubaker, name any other two caliphs of Prophet Muhammad.

i. _____

ii. _____

(b) Mention two reasons why Abubaker was chosen as the first caliph.

i. _____

ii. _____

54. Either:

"Let the little children come to me".

(a) Who said those words?

(b) To whom did he say them to?

(c) What two lessons do you learn from the Bible quotation above?

i. _____

ii. _____

Or:

(a) Give any two benefits of following Prophet Muhammad's teaching and sayings to a Moslem?

i. _____

ii. _____

(b) Give any two ways of caring for children in Islam.

i. _____

ii. _____

55. For Both:

(a) Who is a martyr?

(b) Give any lessons Christians and Moslems learn from martyrs.

(c) State any one reason why Christians and Moslems go for pilgrimage.

SET NINETEEN

SECTION A

1. Name the symbol that helps to show the location of the school.

2. Give any one social service centre in the community.

-
3. Why should a map have a key?
-
4. How helpful is rainy weather to crop farmers?
-
5. Give one responsibility of a child at school.
-
6. How can one become a political leader in the district?
-
7. Give any one value of having Bye laws at the district level.
-
8. Name the example of a resource where most human activities are done.
-
9. Give one reason why mangrove timber is preferred for making boats and ships.
-
10. Mention any one benefit of high population to a country.
-

11. Give any one advantage of using a mobile telephone as a means of communication.
-
12. In which way is a midwife helpful in the community.
-
13. Why did the member countries of ECOWAS form ECOMOG?
-
14. Mention the landlocked country found in the horn of Africa.
-
15. Give one way the legislature helps judiciary to do its work in the country.
-
16. State one reason why a country like Uganda should have a national language.
-
17. State one way in which poor methods of growing crops lead to the destruction of environment.
-
18. Give any one role of citizens in a country.
-
19. Why is Ignatius Kangave Musaazi remembered in the struggle for independence in Uganda?
20. Group that settled in "Pubungu" before moving to other areas.
-
21. Mention one danger of landslides to the people who live near highland areas.
-
22. Give any one way in which countries of East Africa benefit from their common market.
-
23. State one way missionaries promoted economic development in Uganda.
-
24. Why should the people of East Africa have knowledge of road signs and symbols?
-
25. Mention one way swamps are useful to man.
-
26. Name the latitude which is marked $22\frac{1}{2}^{\circ}$ on the map of Africa.
-
27. What political change took place in Uganda on 9th October, 1962?
-
28. Facing North, John turned an angle of 135° clockwise which new direction is he facing?
-
29. Apart from rules and regulations, what other way is peace promoted at school?
-

30. How useful are donkeys to the people of Kapchorwa district?

31. Why does the government of Uganda encourage the growing of nontraditional cash crops?

32. Name the type of currency which was introduced by Arabs in East Africa.

33. What is Great Trek?

34. Name the traditional cash crop grown by both the Chagga and Bagisu on mountain slopes.

35. State the political importance of River Semiliki to Uganda and DRC.

For questions 36 – 40, answer Either Christianity Or Islam but not both alternatives.

36. Either: What name is given to the day when Jesus Christ was born?

Or: Mention the city in which prophet Muhammad was born?

37. Either: What did Jesus Christ do to show love to his people?

Or: What did Prophet Muhammad do to show love to his people?

38. Either: What sacrament makes one to join God's family?

Or: What pillar makes one to join Islam?

39. Either: How did God show love to Noah and his family?

Or: How did God show love to Nuuhu and his family?

40. Either: What lesson do you learn from the resurrection of Jesus Christ?

Or: What lesson do you learn from the action of Prophet Muhammad?

SECTION B

41. (a) Name any two groups of people who use a compass in their daily life.

i. _____

ii. _____

(B) Give one reason why the people you have mentioned in (a) above use a map of an area.

_____ (c) State one reason why the people you have mentioned in (a) above use a compass.

42. (a) What term is used to mean a home and its surrounding?

(b) Give any two qualities of a good homestead.

- i. _____
- ii. _____

(c) How can people promote unity at their home?

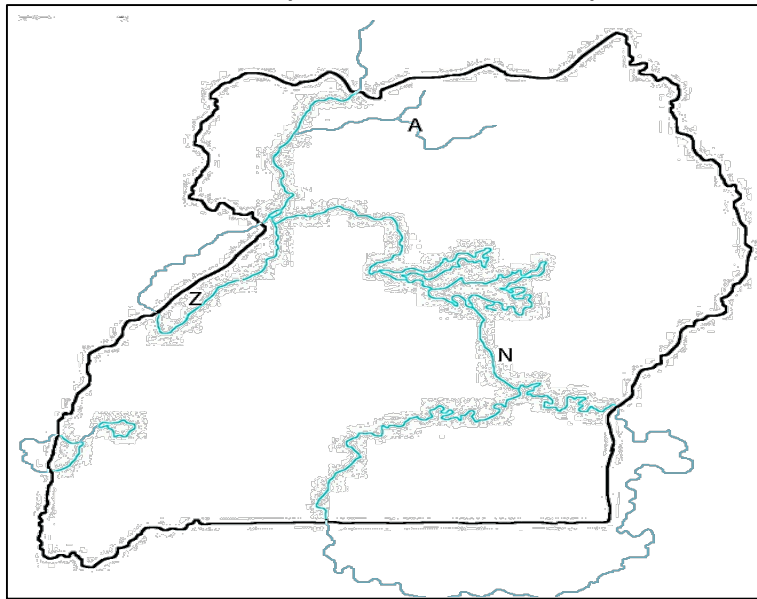
43. (a) Mention any one factor that can attract a high population in an area.

(b) Give any two challenges of high population in urban areas today.

- i. _____
- ii. _____

(c) State any one way of controlling high population growth in an area.

44. Use the map below and answer questions that follow.



(a) Name the river marked (A) on the map.

(b) State any two economic activities done in a place marked Z on a map.

(c) Why is water transport on the part of the river marked N difficult?

45.(a) Mention any one service provided by UNICEF to children in Uganda.

(b) Write down any two challenges people face in meeting their needs in the community.

- i. _____
- ii. _____

(c) Give one solution to problems facing people in meeting their needs.

46.(a) Which organ of the Organization of African Unity (OAU) was headed by Secretary General?

(b) Give any two duties of African Union.

- i. _____
- ii. _____

(c) Why does African Union (AU) need a standing army today?

47. (a) Name the member in the local council one (L.C.I) committee responsible for children's welfare.

(b) Give any two dangers of child abuse in the community.

(c) State any one way of reducing child abuse in the community.

48. (a) What title is given to a person who leads electoral commission in Uganda?

(b) Apart from pens, ink and inkpads list down any other two materials used during the voting process.

(c) Why should a country like Uganda carry out regular elections?

49. Match the following raw materials with their products as on the table below.

List A

List B

- | | |
|---------------|--------|
| (a) Crude oil | cement |
| (b) Clay | ropes |
| (c) Limestone | diesel |
| (d) Sisal | pots |

50.(a) Name the collaborator who extended the British rule to Eastern Uganda.

(b) Give any two ways in which the British extended their rule to different parts of

Uganda.

- i. _____
- ii. _____

(c) Give one reason why it was simple for the British to rule Buganda than Karamoja.

For questions 51 – 55, answer Either Christianity Or Islam but not both alternatives.
51. Either: (a) Who did God send to earth to save the sinners?

(b) Mention two things the above-named person did.

- i. _____
- ii. _____

(c) What does the death of the above named person on the cross show to the people?

Or: (a) Who was the last prophet in Islam?

(b) Mention two things the person named above did.

- i. _____
- ii. _____

(c) How is the person named above important in Islam?

52. Either: (a) What two things did God do to create good relationship with his people through Moses?

- i. _____
- ii. _____

(b) How can Christians make good relationship with God today?

(c) Give one reason why Christians should have good relationship with God.

Or: (a) What two things did Allah do to create good relationship with the people through Musa?

- i. _____
- ii. _____

(b) How can Muslims make good relationship with Allah?

(c) Give one reason why Muslims should have good relationship with Allah.

53. Either: (a) Give two similarities between Christians and Islam.

- i. _____
- ii. _____

(b) Give two differences between Christianity and Islam.

- i. _____
- ii. _____

Or: (a) Give two similarities between Christianity and Islam.

- i. _____

ii. _____

(b) Give two similarities between Islam and Christianity.

i. _____

ii. _____

54.Either: (a) Who created heaven and earth?

(b) In which two ways can a Christian thank God?

i. _____

ii. _____

(c) Give one reason why God created mankind.

Or: (a) Who created heaven and earth?

(b) In which two ways can a Muslim thank Allah?

i. _____

ii. _____

(c) Give one reason why Allah created mankind.

55.Either:

(a) What name is given to the first book in the Bible?

(b) Why are the first four books in the New Testament called Gospel?

(c) In which two ways is the Bible useful to Christians?

i. _____

ii. _____

Or:

(a) What name is given to the first Chapter in the Qur'an?

(b) Which prophet was given the Qur'an?

(c) How is the Qur'an useful to Muslims?

(d) How do Muslims respect the Qur'an?

SET TWENT
SECTION A

1. Name the place in a school where all text books are kept.

2. State the cardinal point on a compass which shows the direction where the sun rises from.

3. Give any one bad act that can affect a child's life.

4. Which method is used in a District to get a Local Council Five Chairman?

5. Name the archaeological site found in the Eastern District of Kumi.

6. In which Political way is Lake Victoria used by the three East African countries of Kenya, Uganda and Tanzania?

7. Why does a school need to employ a watchman to do night duties?

8. Which country forms a border with West Nile Region in Uganda?

9. Give any one characteristic of Desert climate found in North Africa.

10. In which one way is land useful to man as a natural resource?

11. Which group of foreigners taught the word of God to Africans?

12. In which one way is transport important to man as a social service?

13. Give any one positive economic development in Uganda brought by the British Colonial Rule.

14. How is traditional type of mining dangerous to people in areas where it is practiced?

15. Give any one item of trade that the Arab traders took away from Buganda. _____
16. Why is it not possible for the gorillas and chimpanzees to live in Kidepo National Game Park?

17. In which one way did the migration of the Nilotes affect the people of Bunyoro Kitara Politically?

18. What is the importance of the symbols to a Nation?

19. Give one way in which early marriages bring about the increase of population.

20. In which region of Africa was assimilation used as a method of administration?

21. Name one common activity at home done by both boys and girls today.

22. In which one way did World War 13 affect the lives of Ugandans who fought in it?

23. Which is the commonest fast means of communication today in Uganda?

24. State any one problem facing our electoral commission in Uganda?

25. State one way by which our land in Uganda is polluted.

26. What was the main aim of forming the Pan-African Movement in 1900?

27. How does a District Probation Officer help families in a District?

28. State any one problem that affects Africa's Regional Economic bodies.

29. How is cattle-keeping useful to the Karimojong in Northern Uganda?

30. Give an example of a cultural practice done in a community in Uganda today.

31. In which one way were social norms important in Ethnic groups?

32. Give the name of the continent which is found North of Africa.

33. What can a school benefit from its neighborhoods?

34. Which agency of the United Nations Organisation has helped

refugees in Africa?

35. In which one way can a carpenter be useful to the community he lives in?

36. Either: Who is the Prince of peace?

Or: Who is given the title of Peace Be Upon Him?

37. Either: What is love in Christian faith?

Or:
What is love in Islamic faith?

38. Either: When do we need a prayer in Christian faith?

Or: When do we need a prayer in Islamic faith?

39. Either: Why did God send his messages through prophets?

Or: Why did Allah send his messages through prophets?

40. Either: As a Christian. How do you relate with others?

Or: As a Muslim, how do you relate with others?

SECTION B

41. (a) Give any two common punishments given to children at School.

- i. _____
- ii. _____

(b) State any two positive effects of promoting peace and security in an area.

- i. _____
- ii. _____

42. (a) In which two ways are lakes in Uganda negatively affected?

- i. _____
- ii. _____

(b) Give any one Game Park in Uganda which is found in the Rift Valley.

(c) State one way in which the presence of a Rift Valley can affect transport system.

43. (a) Name one tribe living in West Nile Sub-Region of Uganda that

belongs to the Nilotic Ethnic group.

(b) Give one tribe in one Ethnic group in Uganda which had their Political Organisation in form of Kingdoms.

(c) Why is the National Anthem sung during National Celebrations?

(d) When was the British National Anthem last sung in Uganda?

44. (a) State any two methods used in schools to give educational messages to pupils.

i. _____

ii. _____

(b) State how child-to-child programme helps in schools.

(c) How can peace and security be promoted by parents in a home?

45. (a) Name the King of Buganda who received John Hanning Speke at his palace.

(b) Give the name of a missionary who helped people in Uganda to know how to read and write.

(c) State any two positive effects of colonial Administration in Africa.

46. (a) What helps a country to rule its citizens properly?

(b) Which Organ of the Government interprets the constitution?

(c) A school had an income of sh.8 million and spent sh.5 million. What type of budget did that school use?

(d) State any one way a government can use to get money to run its activities in a country.

47. (a) In which town in Africa was the Organisation of African Unity formed?

(b) State at least two organs of the African Union.

i. _____

ii. _____

(c) Give at least one solution to Regional Economic Problems in Africa.

48. (a) Where are Diamonds mined in South Africa?

(b) Give any one social and economic challenge affecting economic developments in Africa.

i. Social challenges

ii. Economic challenges

(c) State any one possible solution to the challenges affecting economic development in Africa.

49. (a) State one reason why the league of Nations was formed in 1919.

(b) Why has the United Nations Organisation been successful in some activities?

(c) What role is being played by the International Court of Justice in Africa?

(d) What title is given to the head of the Secretariat of the Common Wealth Countries?

50. (a) Give any two ways of caring for wild animals.

i. _____

ii. _____

(b) State two reasons why forested areas in Africa have low population.

i. _____

ii. _____

51. Either:

(a) Mention any one form of suffering Jesus met while in earth.

(b) Give any two ways Jesus overcame suffering.

i. _____

ii. _____

(c) State any one way suffering helps us to grow in faith.

Or:

(a) Mention any one form of Buffering Prophet Mohammed met while on earth.

(b) Give any two ways Prophet Mohammed overcame suffering.

i. _____

ii. _____

(c) State any one way suffering helps Muslims to grow in faith.

52. Either:

(a) Mention two examples of decisions Christians make.

i. _____

ii. _____

(b) In which two ways did Abraham make right decision?

i. _____

ii. _____

Or:

(a) Mention two examples of decision Muslims make.

i. _____

ii. _____

(b) In which two ways did Ibrahim make right decision?

i. _____

ii. _____

53. Either:

Match the items in A with the statements in B.

A

B

i. Nazareth

Birth place of Jesus

i. Golgotha

Where Jesus began teaching

ii. Capernaum

where Jesus grew up

iii. Bethlehem

where Jesus was killed

Or:

Match the items in A with statements in B.

A

B

i. Mecca

Burial place for Mohammed

ii. Medina

Birth place for Mohammed

- iii. Mina Pilgrims get water from
iv. Zamzam well Where pilgrims stone the Devil

54. Either:

(a) Write one word to mean the achievement of a goal in one's life _____

(b) State any two ways that can help a Christians be successful.

- i. _____
ii. _____

(c) In which one way has the Holy Bible helped people to achieve goals in life?

Or:

(a) Write one word to mean achievement of a goal in one's life.

(b) State any two strong points that have enabled Moslems achieve different things in their lives.

- i. _____
ii. _____

(c) In which one way has the Quran helped Moslems to achieve goals in life?

55. Either:

(a) What shows that Africans worshipped God before the coming of Christian missionaries?

(b) Write down any three attributes of God in African Traditional Religions.

- i. _____
ii. _____
iii. _____

Or:

(a) What evidence is there to show that Africans in Uganda worshipped Allah (Almighty) before the introduction of Islam

(b) Write down any three characteristics of Allah (the Almighty) that exist in African Traditional Religions to prove His existence.

- i. _____
ii. _____
iii. _____

SET TWENTY ONE SECTION A.

1. Name any one service center where security is provided in our community.

2. Why should a rain gauge be placed in an open place?

3. State any one reason for a district to have good leaders.

4. Give any one advantage air transport has over other types of transport.

5. What do shield and spear stand for one the Uganda Coat of arms?

7. What was the use of the tool below to early man?



7. Give any one reason why there are many different types of natural vegetation in Africa.

8. How do strong winds affect people's crops and houses?

9. State any one way in which the farmers benefit from a food processing factory.

10. Name the agreement in which the boundaries of Buganda were fixed?

11. State any one reason why Kabaka Mutesa I was later not happy with the missionaries

12. Mention any one way the partition of East Africa affected some tribes.

13. Why did the people of Acholi support the Lamogi rebellion?

14. Give one reason why people living in equatorial vegetation zone have poor transport network.

15. Name the school attribute from which children can be differentiated from one school to another.

16. Give any one problem experienced by people living along River Nile in Uganda.

17. State any one way the government of Uganda can solve the problem of lack of water in semi – arid areas.
18. Mention any one method used by early man to get food.
19. Name the Africa leader who proposed the formation of African Union.
20. State any one problem that has slowed down the development of Island countries of Africa.
21. Give any one reason why people should not settle in Wetlands.
22. What is the use of a hygrometer at a weather station?
23. What title is given to the head of Local council one?
24. State any one effect of the earth rotating on its axis.
25. Why is it important for Judiciary to interpret laws to the citizens of Uganda?
26. Name the body in Uganda which is responsible for protecting forests.
27. State any one cause of poverty among people.
28. Mention any one problem caused by a big population in an area.
29. How can the government encourage people in urban areas go back to villages?
30. What causes misunderstandings between the school and the community?
31. How does natural vegetation influence animal distribution in an area?
32. Give any one way the people of East Africa express their need for independence during colonial rule?
33. State any one use of a clock face in a school
34. How is tax collection important to the development of a country?
35. Name the early man's discovery that helped him to live in caves.

For questions 36 – 40 answer either Christian or Islam but not both.

36. Either: Name any one talent that Christians receive from God.

Or: Name any one talent that Muslims receive from Allah?

37. Either: How did Jesus show his power over the sick people?

Or: How did prophet Mohammed show his power over sick people?

38. Either: According to the Bible, who is referred to as God the Son?

Or: According to the Qu'ran name the prophet who was born without a father.

39. Either: Give the reason why Christians humble themselves during prayers

Or: Give the reason why Muslims humble themselves during prayers?

40. Either: State any one Christians benefit from church marriage.

Or: State one way Muslims benefit from Nikah.

SECTION B (60 MARKS)

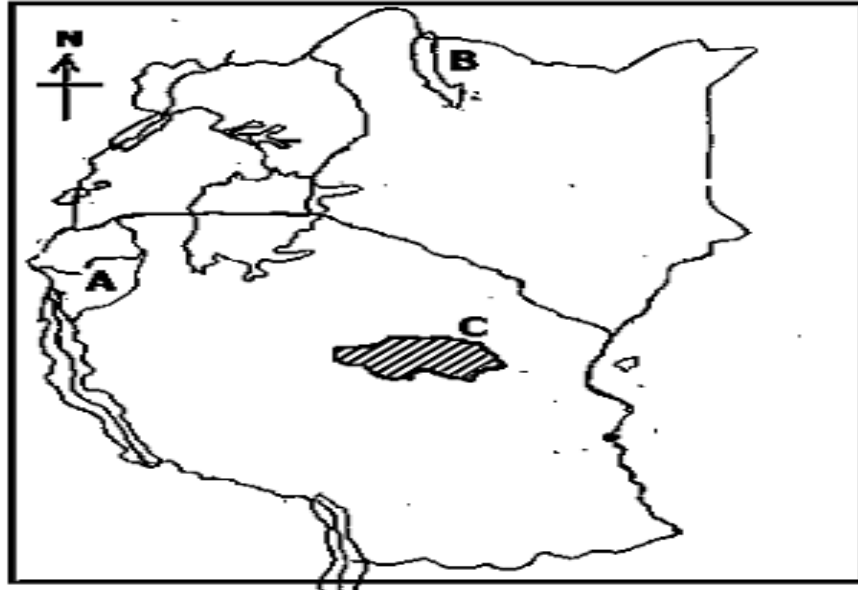
- 41(a) What system of trade is referred as the exchange of good for goods or services?

- (b) Give any two reasons why it is difficult in carrying out trade in some areas.
(i) _____
(ii) _____
- (c) How do traders benefit from a commercial bank in the community?

- 42(a) Name any one natural resource found on land.

- (b) State any two ways in which people have misused land in Uganda.
(i) _____
(ii) _____
- (c) How do people use their land to benefit from it?

43. Study the sketch of East Africa below carefully and use it to answer the questions that follow.



(a) Name the country marked A.

(b) How was lake marked with letter B formed?

(c) Give any two causes for low population in the area marked C.

(i) _____

(ii) _____

44(a) Mention any two causes of large family sizes in Uganda.

(i) _____

(ii) _____

(b) Give any problems a large family is likely to face.

(i) _____

(ii) _____

45. Name any two raw materials from the swamps that are used in the craft industry.

(i) _____

(ii) _____

(b) Apart from providing raw materials for crafts, give two other importance of swamps.

(i) _____

(ii) _____

46(a) Give any two reasons why there are many people living in Savanna Vegetation zone in Africa.

(i) _____

(ii) _____

(b) Mention any two ways in which people use vegetation to satisfy their needs.

(i) _____

(ii) _____

47(a) What was the largest inland slave market in East Africa?

(b) Mention any two ways Arabs used to get slaves in East Africa.

(i) _____

(ii) _____

(c) Why were chiefs and kings in East Africa unhappy when slave trade was stopped?

48(a) State any one duty for each of the following organs of government.

(i) Parliament:

(ii) Executive:

(b) Give any two ways the government improves the welfare of its citizens

(i) _____

(ii) _____

49(a) Name the largest national game park in East Africa?

(b) Which National game park is known for Mountain Gorillas in Uganda?

(c) Give any two reasons why people carry out poaching?

(i) _____

(ii) _____

50(a) What is an ethnic group?

(b) How did over population cause ethnic migration from their cradle land in Africa.

(c) Mention any two positive effects of the Bantu migration in areas they settle in Africa.

(i) _____

(ii) _____

For questions 51 – 54 answer either Christianity or Moslem but not Both.

51. Either: (a) What material was Eve created from?

(b) What was the reason for God creating Eve?

(c) State the punishment God gave to each of the following for their disobedience?

(i) Adam:

(ii) Cain:

Or: (a) What material was Hawa created from?

(b) What was the reason for Allah creating Hawa?

(c) State the punishment Allah gave to each of the following for their disobedience?

(i) Adam:

(ii) Qabil:

52. Either: (a) Write UJCC in full.

(b) Name any one religious sector that belongs to UJCC.

(c) State any two functions of UJCC.

(i) _____

(ii) _____

Or: (a) Write UMSC in full.

(b) Name any one group of Muslims in Uganda today.

(c) State any two functions of UMSC.

(i) _____

(ii) _____

53. Either: (a) Which helper appeared of Apostles of Jesus on Pentecost day?

(b) State one unusual thing that happened when the helper names in (a) above appeared to the Apostles.

(b) Mention any two ways the helper named in (a) above is useful to Christians to day.

(i) _____

(ii) _____

Or: (a) Whose power do Moslems use to overcome difficulties?

(b) Mention any three ways in which the above named power is useful to Muslims today?

(i) _____

(ii) _____

(iii) _____

54. Either: (a) Name he country where Israelites were delivered from by Moses.

(b) Why did God want the Israelites leave the above named country?

(c) Give any two ways God helped Moses to deliver the Israelites from the country names in (a) above.

- (i) _____
(ii) _____

Or: (a) Name the country in Africa where the Ban Israel were delivered from by Musa.

- (b) Why did Allah want the Ban Israel leave the above country?

- (c) Give any two ways Allah helped Musa to deliver the Ban Israel from the country names in (a) above.

- (i) _____
(ii) _____

55. Either: Complete the table below showing how Christians use their gifts to glorify God.

_____	to read the Bible.
Mouth	_____
_____	to walk to the Church.
Ears	_____

Or: Complete the table below showing how Christians use their gifts to glorify God.

_____	to recite the Qua'ran
Mouth	_____
_____	to walk to the Mosque.
Ears	_____


SET TWENTY TWO SECTION A

- What direction is opposite to North West?

- Give the meaning of the word poaching.

3. How do swamps filter water into large water bodies?

4. What does the symbol below represent?



5. How is written records very use?

6. What do we call places in Uganda where elections are held?

7. Name the organ of the government that implements policies.

8. Joshua was coming from school at 4:00pm. He saw his shadow on the left hand side. Towards what direction was Joshua moving?

9. What term means the situation where the number of people is equal to the resource available?

10. Apart from Bwindi impenetrable forest N. Park, which other N. Park inhabits mountain Gorillas?

11. Bantustans were the reserved places for the black people in S. Africa during apartheid policy. Mention township of the blacks.

12. Suggest a reason why the British used indirect rule in Uganda during the colonial period.

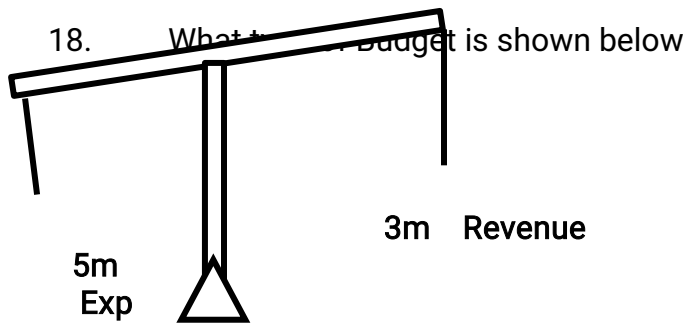
13. Why does R. Congo pour a lot of water to the Ocean than any other river in Africa?

14. Give a reason why Bishop James Hannington was murdered in Busoga on the orders of Kabaka Mwanga.

15. State the main economic activity carried out in semi-desert areas of E. Africa.

16. Who in Uganda is the political head of the sub-county?

17. Suggest a reason why road accidents are at an increase in Uganda today?



19. How has the government tried to help the people of Kalagala to overcome a problem of transport across L. Victoria?
-
20. Which political party allied with U.P.C to win independence elections?
-
21. Who founded the Luo-Babiito Dynasty?
-
22. How are the Chagga and the Bagisu similar in settlement pattern?
-
23. In what way are volcanoes dangerous to transport industry?
-
24. Name the European explorer who drowned at Bussa rapids on R. Niger?
-
25. Who was responsible for conducting clan meetings during the clan systems in Uganda?
-
26. How does a high population promote industrial growth in an area?
-
27. In which way were the Ruga-Ruga similar to the Abarusura?
-
28. Which ministry in Uganda organizes national elections?
-
29. Name the coastal terminal town for Tazara railway.
-
30. Define term "Imports".
-
31. How does a school promote law and order among the learners?
-
32. State one way in which highlands and mountains modify climate?
-
33. Which mineral deposit is got from Hima and Osukuru hills respectively?
-
34. Why is livestock farming not common around the water bodies and forest?
-

35. Give any one way how rural electrification will help Ugandans.

For Questions 36-40 answer Either Christianity or Islamic but not both on each number.

36. Either: Who was the mother of Ishmael?

OR: Who was the mother of Prophet Muhammad?

37. Either: Give a reason why Christians work today.

OR: Suggest a reason why Muslims should engage in work today.

38. Either: How did Jesus fulfill his plan of salvation?

OR: How did Prophet Mohammed try to wake up the people of Mecca?

39. Either: Why is Mt. Horeb important in Christianity?

OR: Why is Mt. Hira important in Islam?

40. Either: State the common belief among the Christians about death.

OR: State the common belief among Muslims about death.

SECTION B

41. a) What is family?

b) Name the type of family without biological children.

c) State two disadvantages the family mentioned above.

- i. _____
- ii. _____

42. a) Name:

- i. The smallest local government unit in Uganda.
- ii. The largest local government unit in Uganda.

b) Name any two posts on a local council committee.

- i. _____
- ii. _____

43. Match the following raw materials in A with their products in B.

A

Pyrethrum

Cloves

138

B

Plywood

Candles

INTERNAL EXAMINATIONS BOARD OF TILDA AND PAUL P/S.

P.O.BOX 43, ENTEBBE – MPALA

TEL: 0782634937/0754056534

Spices

ii. _____

i) I.C.R.C

47. Study the map of Uganda and answer



TEL: 0782634937/0754056534

- i. Which rebellion in Uganda was staged around place marked P?

 - ii. Why was region marked 1 and 2 transfer to Kenya?

 - iii. How did lake TT lead to growth of Buganda kingdom.

 - iv. Name country Y.

48. a) Why was Ghana called "GoldCoast" by the Colonialists?

- b) Identify any two political similarity between Ghana and Uganda.
- i. _____
 - ii. _____
- c) In what way is Mukono similar to Bundibugyo in Uganda in terms of economic activity?

49. a) What one activity can cause soil erosion?

- b) How is soil erosion controlled in:
- i) Plain / flat area?

 - ii) Steep slope areas?

- c) Why is soil erosion dangerous in an area?

50. a) Suggest one way how transport can promote trade in a country.

- b) Name the type of trade which is:
- i. Carried out within the country?

 - ii. Carried out between two or more countries across borders?

 - iii. _____

For question 51-55, answer Either Christianity or Islamic but not both.

51. Either: a) Who was the main wife of Abraham?

- b) State three of God's promises to Abraham.
- i. _____
 - ii. _____
 - iii. _____
- Or: a) Who was Ibrahim's wife?

- b) State three of Allah's promises to Ibrahim.
- i. _____

- ii. _____
- iii. _____

52. Either: a) Define the term "Authority"?

b) Give one way Jesus showed his authority over nature.

c) State any two ways Jesus expressed his authority over sickness.

- i. _____
- ii. _____

OR: a) What are impurities in Islam?

b) Identify any three impurities in Islam.

- i. _____
- ii. _____
- iii. _____

53. Either: a) What is denomination?

b) List down any two denominations in Uganda.

- i. _____
- ii. _____

C) Write U.J.C.C in full.

OR: a) Give the meaning of these terms in Islam.

- i. Allah Akbar

- ii. Asalaamlikum

54. State the main duty of these people.

- i. Imam

- ii. Muezzin

For both

a. What is peace?

b. State two effects of peace in a society.

- i. _____
- ii. _____

c. Give one thing that may happen to a society when there is no peace.

55. Either: a) What is a sacrament?

- _____
- b) A part from baptism, list down two other sacraments in Christianity.
- i. _____
- ii. _____
- c) In what sacrament do Christians confess their sins to God?

OR: a) How many pillars of faith (Imam) are Islam.

- _____
- b) Which pillar of Islam (practice) is the same as the pillar of faith?
- _____
- c) State any two pillars of faith in Islam.
- i. _____
- ii. _____

SET TWENTY THREE
SECTION A

1. What name is given to a piece of land surrounded by water in a lake or sea?
- _____
2. Name the main cash crop grown in Kakira and Lugazi area.
- _____
3. Why does Uganda want to drill oil which was found around Lake Albert?
- _____
4. Which district in Uganda is covered by true equatorial vegetation?
- _____
5. What was Uganda known as during the colonial period?
- _____
6. Name the element which shows a map reader what the map is about. _____
7. Mention any one problem the local council committee solves in a community.
- _____
8. Name the feature on a road that motorists, cyclists and pedestrians use to cross a river.
- _____
9. Which missionary is known for starting technical education in Uganda?
- _____
10. Give any one reason why the people of a district are represented in the National Parliament.
- _____
11. State the importance of having good roads in a district. _____
12. Apart from rainy season, under which other weather condition would one use an umbrella?
- _____

13. Why would you advise carpenters to plant trees?

14. Omara was facing the East on a sunny morning. In which compass direction was Omara's shadow?

15. Give any one danger of fishing using sub-standard nets.

16. Mention any one way in which pupils keep law and order in the school.

17. Name any one place that provides medical treatment of people in a community.

18. Why is tobacco growing declining in Uganda?

19. What title is given to the person who is responsible for all primary schools in a district?

20. What is citizenship by descent?

21. What name is given to the laws that are set by the local council of an area?

22. Why is Islam connected to the coming of Arabs in Uganda?

23. Name the line of latitude which is $23\frac{1}{2}^{\circ}\text{N}$.

24. Suggest one way a farmer can keep his piece of land fertile.

25. Name the political party that won the first multi-party elections in Uganda.

26. Give one role played by a veterinary doctor in a district.

27. In which way is a rain gauge important to a crop farmer?

28. Give any one example of a traditional cash crop.

29. State the difference between rain and rainfall.

30. Which discovery marked the end of the stone age period?

31. Mention the official language of Uganda.

32. Give any one problem which a child may find on the way from home to

school.

33. State any one reason why Entebbe town is important to the economy of Uganda.

34. Give one reason why people are discouraged from building houses in swamps.

35. Name Uganda's neighbour to the south.

For questions 37 to 40, answer EITHER the Christian OR Islamic question but not both.

NOTE: No marks will be awarded to a candidate who attempts both alternatives.

36. Either: Give one way Christians worship God.

Or: Give one way Muslims worship Allah.

37. Either: Who was the mother of Abel?

Or: Who was the mother of Habel?

38. Either: Where did God put Adam to live?

Or: Where did Allah put Adam and Hawa to live?

39. Either: Mention any one example of leaders of Christianity in our community.

Or: Mention any one example of leaders of Islam in our community.

40. Either: Why do Christians kneel down when praying?

Or: Why do Muslims perform ablution?

SECTION B

41 (a) The following are the colours of the Uganda national flag: State what each colour represents.

(i) Black _____

(ii) Yellow _____

(iii) Red _____

(b) Give one reason why the Uganda flag exists at all offices in Uganda.

42 (a) What are basic needs?

(b) Apart from food, mention any other three basic needs of man.

(i) _____

(ii) _____

(iii) _____

43 (a) What takes place in a bank?

(b) State one way a bank is useful to farmers.

(c) Name the bank that is responsible for printing money in Uganda.

(d) Apart from printing new notes, state one other function of the bank named above in 43 (c).

44. (a) What is rural –rural migration?

b) State three reasons for rural - rural migration.

i) _____

ii) _____

iii) _____

45 (a) Use the spaces provided below to draw and name these road signs; humps ahead, bridge, men at work.

Humps ahead	Bridge	Men at work

(b) Give the main reason why traffic signs are put on roa

46 (a) What is rural-urban migration?

(b) Give any two factors in rural areas that force people to go to towns.

(i) _____

(ii) _____

(c) Mention any one social problem that may arise as a result of too many

people living in one area.

47 (a) Name the highest mountain in Uganda.

(b) Give the type of mountain you have named above.

(c) Apart from mountains, name two other landforms in Uganda.

(i) _____

(ii) _____

48. Match the name in list A to the correct sentence in list B.

Name A

B

(i) C.T. Wilson

was the first European to reach Mt. Rwenzori.

(ii) Ahmed bin Ibrahim

the first British Commissioner in Uganda.

(iii) Harry Johnson

was part of the CMS group of missionaries.

(iv) H.M Stanley

was the first foreign trader in Uganda. encouraged cotton growing in Uganda.

49 (a) What is Barter trade?

(b) Define the following terms as used in trade.

(i) imports

(ii) exports

(c) Which of the above goods helps to bring in foreign exchange?

50 (a) Draw and name two hunting tools which early man used.

(b) Apart from hunting, mention any two other ways by which early man obtained food.

(i) _____

(ii) _____

For each of the questions 51 to 55, answer EITHER the Christian OR Islamic question, but not both. No marks will be awarded to a candidate who attempts both alternatives in a number.

51. Either:

(a) From what did God create man?

(b) Why did God create man?

(c) State any one way man cares for each of these creations of God.

(i) animals

(ii) plants _____

Or:

(a) From what did Allah create man? _____

(b) Why did Allah create man? _____


(c) State any one way man cares for each of these creations of Allah.

(i) animals _____

(ii) plants _____

52. Either:

(a) Draw a cross in the space provided below.



(b) Apart from the cross, name other two symbols of a Christian family.

(i) _____

(ii) _____

(c) Give one reason why Sunday is a very important day for Christians.

Or:

(a) Draw a crescent in the space provide below.



(b) Apart from the crescent, name
other two symbols of a Muslim
family.

(i) _____

(ii) _____

(c) Give one reason why Friday is a very important day for Muslims.

53. Either:

(a) How did the following people meet their death?

(i) Jesus Christ _____

(ii) Judas Iscariot _____

(b) What happened to Jesus on each of these days?

- (i) Good Friday _____
(ii) Easter Sunday _____

Or:

- (a) Write brief notes about each of the following people;

(i) Amina

(ii) Hadijah

(iii) Abdallah

(iv) Mohammad

54. Either:

- (a) Who baptized Jesus Christ?

(b) Apart from baptism, mention any other two sacraments a Christian should have.

(i) _____

(ii) _____

- (c) How is baptism important to a Christian?

Or:

- (a) State any four pillars of faith (Iman)

(i) _____

(ii) _____

(iii) _____

(iv) _____

55. Either:

- (a) Write any three of the ten commandments of God.

(i) _____

(i) _____

(ii) _____

- (b) Where was Moses when the Ten Commandments were given to him?

Or:

- (a) What is Prophet Ibrahim known for in Islam?

(b) In which city do we find the Kaaba?

(c) State the importance of the Kaaba to a Muslim.

(d) Give any one thing you can do to show that you obey Allah.

SET TWENTY FOUR
SECTION A (40 Marks)

1. Name the school symbol that promotes smartness among the

148

INTERNAL EXAMINATIONS BOARD OF TILDA AND PAUL P/S.

P.O.BOX 43, ENTEBBE – MPALA

TEL: 0782634937/0754056534



school children.

2. _____
Give a reason why flowers are referred to as perishable goods.
3. _____
Mention one social service provided by a post office.
4. _____
Why do areas near water bodies receive reliable rainfall?
5. _____
How are legends important in the community?
6. _____
State one way in which physical features were politically important to the colonialists.
7. _____
Give any one way in which agriculture promote industrialization.
8. _____
Mention any one problem faced by enumerators during population census.
9. _____
Give any one reason why the government of Uganda is registering her citizens from 5 years and above.
10. _____
How do forests hinder the political development of a country?
11. _____
In the space below, draw a map symbol of a canal.



12. _____
Why did early man eat raw meat in the Old Stone Age period?
13. _____
How did the introduction of the printing press by Alexander Mackay promote development in Uganda?
14. _____
Which symbol of Uganda as a Nation is used as number plate to the president's official car?
15. _____
Give any one way in which apartheid policy was practiced in South Africa.
16. _____
Name the main item of trade that was taken to America from West Africa during Trans-Atlantic Trade.

-
17. Mention the landlocked country in the Horn of Africa.
-
18. Give any one reason why most African countries export raw materials instead of processed goods.
-
19. Write **UIA** in full.
-
20. State any one disadvantage of land grabbing in Uganda today.
-
21. Give the difference between Lake Kyoga and Lake Magadi in terms of formation.
-
22. State any one political contribution of the Bachwezi in Uganda.
-
23. Give any one way in which school rules and regulations are important.
-
24. How is **ECOMOG** important to member states of **ECOWAS**?
-
25. Name the mineral mined at Kimberly in South Africa.
-
26. In which one way is fish smoking a threat to the environment?
-
27. State any one way in which a national constitution is important to a country like Uganda.
-
28. How can the government of Uganda overcome a deficit budget?
-
29. Name any one ocean current that affects the climate of Africa negatively.
-
30. Mention the multi-purpose river project that was set up on River Niger.
-
31. Give any one advantage of getting leaders through inheritance.
-
32. How did I.K. Musaaazi contribute to the political development of Uganda?
-
33. In which way is the work of Pan African Parliament similar to that of Legislature?
-
34. Give a reason why the Uganda railway was extended to Kasese.
-
35. How are mobile phones important to traders?
-

For questions 36 – 40, answer Either Christianity OR Islam but not BOTH

alternatives.

36. **Either** : What does the term Genesis mean?

Or : Name the Holy book given to Prophet Musa.

37. **Either** : Write down any one form of suffering.

Or : Write down any one form of suffering.

38. **Either** : Who was the last Prophet according to the Bible?

Or : Who was the last Prophet according to the Koran?

39. **Either** : As a P.7 candidate, what lesson do you learn from Prophet job?

Or : As a P.7 candidate, what lesson do you learn from Prophet Ayub?

40. **Either** : Give any one form of sexual deviation.

Or : State any one form of sexual deviation.

SECTION B (60 Marks)

41. (a) Mention any one type of a bank.

(c) Write down any two commercial banks operating in Uganda.

(i) _____

(ii) _____

(c) Give any one importance of the central bank.

42. **Use the table below to answer questions that follows.**

Temp. (O°C)	20	20	24	26	25	22	20	20
Rainfall (MM)	80	91	160	265	244	122	96	84
Months	J	F	M	A	M	J	J	A

- (a) What type of climate is shown above?

- (b) Name the wettest month in the table above.

- (c) Calculate the temperature range.

- (d) What is the relationship between temperature and rainfall?

43. (a) How did Long Distance Trade lead to increased demand for slaves?

(b) Give any one way slaves were obtained by the slave traders in East Africa.

(c) Mention any two effects of slave trade.

(i) _____

(ii) _____

44. (a) Mention any one indicator of democracy.

(i) _____

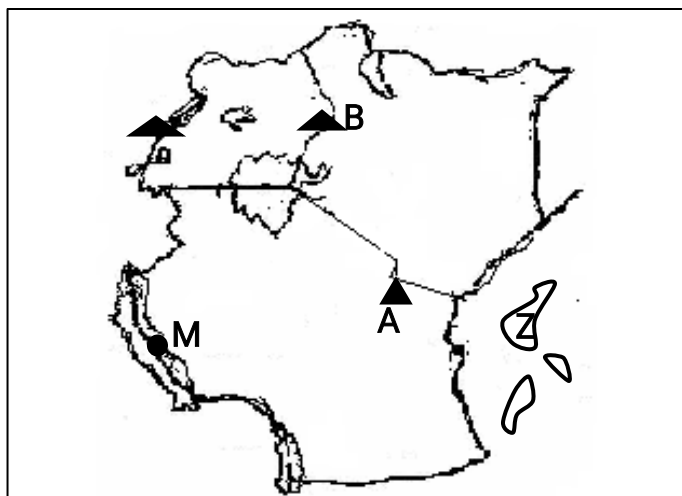
(b) State any two advantages of democracy.

(i) _____

(ii) _____

(c) Give any one way democracy is disadvantageous to a country.

45. Use the map below to answer questions that follow.



(a) How are the people who live mountain **A** and mountain **B**. similar in terms of their economic activity?

(b) Name the inland port marked with letter **M**.

(c) Give any one product got from the crop grown at a place marked **Z**.

(d) Name the first European explorer to see and name mountain **B**.

46. (a) What is child abuse?

(b) Mention any two forms of child abuse.

(i) _____

(ii) _____

(c) How do witch doctors violate children's rights?

47. (a) In which country is Gezira irrigation scheme located?

(b) Give any one factor that made the establishment of Gezira irrigation scheme possible.

(c) Write down any two advantages of irrigation farming.

(i) _____

(ii) _____

48. (a) Mention any one resistance staged in East Africa against colonialists.

(b) Give any two causes of Maji Maji resistance.

(i) _____

(ii) _____

(c) Write down any one positive effect of Maji Maji rebellion to the people of Tanzania.

49. (a) How does tax defaulting lead to under development of Uganda?

(b) Apart from taxes, name any other two ways the government gets her revenue.

(i) _____

(ii) _____

(c) Give any way the government spends her revenue.

50. (a) State any two recommendations of the 1990 Buganda Agreement.

(i) _____

(ii) _____

(b) Write down two parts of land which were included in the 1900 Buganda Agreement.

(i) _____

(ii) _____

In questions 51 to 55, answer Either Christianity or Islam but not both alternatives on the same number.

51. **Either** :

(a) State any two punishments God gave to Egyptians for failing to release the Israelites.

(i) _____

(ii) _____

(b) Write down any one problem the Israelites faced on their way to the promised land.

(c) Mention one way how God solved the problem of the Israelites on their way to Canaan.

Or :

(a) Give any two punishments God gave to Egyptians for failing to release the Israelites.

(i) _____

(ii) _____

(b) Write down any one problem the Israelites faced on their way to the Promised Land.

(c) Mention one way how God solved the problem of the Israelites on their way to Canaan.

52. **Either** :

(a) Who guided the Bible writers?

(b) Mention any one way in which the above person is important to the Christians today.

(c) Write down two symbols of the above person.

(i) _____

(ii) _____

Or :

- (a) Who revealed the Quran to Prophet Muhammad?

- (b) Give any two reasons why Prophet Muhammad performed Hegira.
(i) _____
(ii) _____
- (c) Write down any one problem met by Prophet Muhammad during Hegira.

53. **Either :**

- (a) According to the parable of the sower, what do the following stand for.
(i) the seed: _____
(ii) the sower: _____
- (b) Apart from the above parable; Give any other one parable used by Jesus during His ministry.

- (c) State any one reason why Jesus Christ used parables in His teachings.

Or :

- (a) Write any two pillars of Iman.
(i) _____
(ii) _____
- (b) Give any two ways tarawiih prayer is important to Moslems.
(i) _____
(ii) _____

54. **Either :**

Match items in "A" to those in "B"

A	B
Baptism	- Strengthens one's faith in God.
Holy Communion	- Initiates one into God's family.
Holy Confirmation	- Unites a man and a woman as a husband and wife.
Holy Matrimony	- Help us to share the blood and body of Jesus Christ.

- (i) Baptism _____

- (ii) Holy Communion _____
 (iii) Holy Confirmation _____
 (iv) Holy Matrimony _____

Or :

Match items in "A" to those in "B"

A	B
Isra	- Prophet Muhammad's journey from Mecca to Medina
Miraj	- Compulsory Holy journey performed by Muslims to Mecca.
Hegira	- Prophet Muhammad's journey from Mecca to Jerusalem.
Hajj	- Prophet Muhammad's journey from Jerusalem to Heaven.

- (v) Isra _____

 (vi) Miraj _____

 (vii) Hegira _____

 (viii) Hajj _____

FOR BOTH

55. (a) Give any two factors one should consider while choosing a marriage partner

(i) _____

(ii) _____

(b) State any two qualities of a good marriage partner.

(i) _____

(ii) _____

**SET TWENTY FIVE
SECTION A: 40 MARKS**

1. Why is it difficult to study a map without a key?

2. Name the major line of latitude that crosses through Lake George.

3. State one way people of Kisoro have addressed the problem of soil erosion.

3. Name the physical feature from which geothermal power is generated.
-
5. Give the meaning of the term decentralization.
-
6. State one reason why snows on mountain Rwenzori is reducing.
-
7. Why is it not good to set up a livestock farm near a game park?
-
8. Name the channel that joins Lake Edward and Lake George.
-
9. What title is given to the Head of Civil servants in a Municipality?
-
10. Dorcus was facing in the North. She turned 90° anti clockwise, what was her new compass direction?
-
11. State one way swamps have promoted the art and craft industry.
-
12. How are civil wars in South Sudan a problem to Uganda?
-
13. Name the group of people who introduced the first form of currency in East Africa.
-
14. State the social value of rearing goats in your community.
-
15. How was the creation of Eritrea a disadvantage to Ethiopia?
-
16. Name one place at school that helps to promote children talents.
-
17. Why is the year 1894 important in Uganda's history?
-
18. Name one example of a mass media in Uganda.
-
19. How was River Nile responsible for the coming of early explorers in Uganda?
-
20. Name the type of transport suitable for transporting fragile goods.
-
21. How is Mountain Kilimanjaro different from Mountain Rwenzori in terms of their formation?
-
22. Which Sea Port does Uganda use most to import and export her overseas goods?
-

23. How is fish smoking dangerous to the environment?

24. Which European country prepared Uganda to the self rule?

25. Give the meaning of population census.

26. Draw a map symbol of a canal.



27. Mention one human activity that affects wildlife.

28. Why are hotels built near National parks?

29. Which organ of government makes a budget?

30. Write down one service provided at a post office.

31. What is the use of limestone as a mineral mined in Uganda?

32. Which side of a mountain receives heavy rainfall?

33. Name the water way that connects Red sea to Mediterranean Sea.

34. State any one reason for the migration of ethnic groups into East Africa.

35. Why was Lord Dalamere not liked by Kenya natives?

For questions 36 – 40, answer Either Christianity or Islam but not both alternatives.

36. **Either:** How did Adam and Eve fail to live up to God's standard?

- Or:** How did Adam and Hawa fail to live up to Allah's standard?

37. **Either:** Who was the Head of the Twelve Apostles?

- Or :** Name the Holy Book for Muslims?

38. **Either:** Which religion existed in Uganda before the coming of
158 INTERNAL EXAMINATIONS BOARD OF TILDA AND PAUL P/S.
P.O.BOX 43, ENTEBBE – MPALA
TEL: 0782634937/0754056534

foreigners?

Or : Which religion existed in Uganda before the coming of foreigners?

39. **Either:** Give a reason why baby Jesus was taken to Egypt by His Parents?

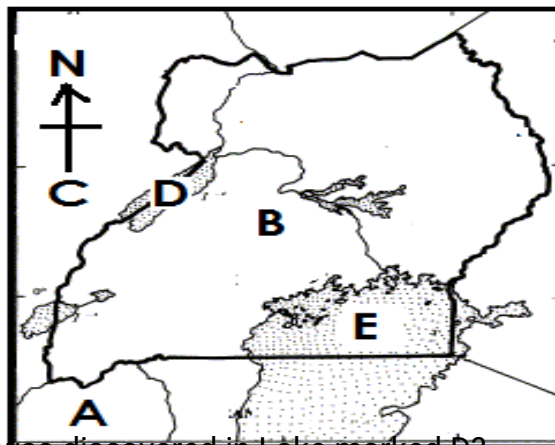
Or : What forced Prophet Muhammad to leave Mecca and go to Madina?

40. **Either:** State the greatest Commandment in Christianity.

Or : State the greatest pillar of Islamic faith.

SECTION B

41. Study the map of Uganda below and answer questions that follow.



- a) Which mineral was discovered in Lake marked D?
 - b) Name the Sea Port of the country marked C.
 - c) How is country A related to country B in terms of their location?
 - d) State any one characteristics of the Lake marked E.
42. a) Name the place where the headquarters of the Bachwezi were in Uganda.
- b) State any two economic contributions of the Bachwezi.
 - (i) _____
 - (ii) _____
 - c) What factor led to the final collapse of the Bachwezi Empire?

43. a) What is farming?

- b) Which type of coffee is grown on slopes of Mount Elgon?

- c) State any two problems faced by crop farmers in Uganda.
(i) _____
(ii) _____
44. a) What title is given to the Head of the police force in Uganda?

- b) State the main duty of the police force in Uganda.

- c) Which department of police is in charge of putting out fire?

- d) How do people help the police to do their work?

45. a) Name the town that has the headquarters of the East African Community.

- b) State any two reasons for the revival of the East African Community.
(i) _____
(ii) _____
- c) Mention any one Head of State who revived the East African Community.

46. a) Name the country in Southern Africa which experiences Mediterranean climate.

- b) Write any two crops that grow well in Mediterranean climatic region.
(i) _____
(ii) _____
- c) How important are the South East trade winds to farmers in Southern Africa?

47. a) Mention any one term of the 1900 Buganda agreement.

- b) State any two recommendations of the 1900 Buganda agreement.
(i) _____
(ii) _____
- c) How did the 1900 Buganda agreement affect land owners?

48. a) Who is a citizen?

b) Apart from birth, how else can acquire Ugandan citizenship.

c) Mention any one type of citizenship.

d) How can one lose citizenship in Uganda?

49. a) Name the oldest stone age site in East Africa.

b) How are Stone Age sites economically important to the government of Uganda?

c) Give two ways early man obtained food.

(i) _____

(ii) _____

50. a) What is population?

b) Masaka town has a population of 100,000 people with total area of 1000 square kilometers. What is its population density?

c) State any two problems faced by densely populated areas.

(i) _____

(ii) _____

For questions 51 – 55, answer Either Christianity or Islam BUT NOT BOTH on a the same number

51. **Either :**

a) What is a sacrament?

b) Which sacrament unifier a man and a woman as husband and wife?

c) Apart from the sacrament mentioned in (b) above, give any other two sacraments.

(i) _____

(ii) _____

Or :

a) Why did Prophet Muhammad perform Hegira?

b) State any two reasons why Moslems make pilgrimage to Mecca.

(i) _____

(ii) _____

c) Name the mountain on which Prophet Muhammad received the Quran.

52. Either: Match list A with B correctly.

List A

List B

a) Isaiah

- survived the floods

b) Elijah

- preached about the coming of the Messiah

c) Moses

- preached trust and true worship

d) Noah

- rescued Israelites from slavery

Or: Match list A and B correctly.

List A

List B

a) Aminah

- first wife of Prophet

Muhammad

b) Abdallah

- first Calliph

c) Abubakar

- mother of Prophet

Muhammad

d) Khadijah

- father of Prophet Muhammad

53. Either:

a) Give any two gifts of the Holy Spirit.

(i) _____

(ii) _____

b) Mention any two fruits of the Holy Spirit.

(i) _____

(ii) _____

Or : Write down any four pillars of Islam.

(i) _____

(ii) _____

(iii) _____

(iv) _____

54. Either :

a) What is lent?

b) What day marks the beginning of lent period?

162

INTERNAL EXAMINATIONS BOARD OF TILDA AND PAUL P/S.

P.O.BOX 43, ENTEBBE – MPALA

TEL: 0782634937/0754056534

c) In which two ways is lent important to Christians.

(i) _____

(ii) _____

Or :

a) What is Saum?

b) How many days does the Saum take

c) How is Idd-el-fitr important to Muslims?

d) State any one importance of Saum to Muslims.

55. **FOR BOTH**

a) Who is a leader?

b) Give any three qualities of a good leader.

(i) _____

(ii) _____

(iii) _____

SET TWENTY SIX
SECTION A: 40 MARKS

1. Name one Lake in Uganda which is crossed by the Equator apart from Lake Victoria.

2. How are barbers important to people in communities?

3. Give one reason why schools have assemblies.

4. State one way hotels support tourism in East Africa.

5. Why do people attend burials without being invited?

6. Give a reason why traffic officers wear uniforms.

7. In which way is the Bank of Uganda different from Stanbic bank in their types?

8. What make rainfall an important need of farmers?

9. How can a P.6 child promote security in a home?

10. Why is fish smoking dangerous to the natural environment?

11. Who were the occupants of East Africa before the coming of the Bantu?

12. Why is a market also considered as an important place in a district?

13. Name the bird that was chosen to be Uganda's emblem due to its good qualities.

14. Draw a map symbol of a mountain peak in the space provided.



15. State one way of controlling soil erosion is a compound.

16. How is raffia important in technology?

17. Which body is responsible for protecting natural forests?

18. How do children respect other people of the family?

19. Where in East Africa was the oldest human skull discovered?

20. Why was the Union Jack lowered on 9th October, 1962?

21. State any one cause of conflicts between the school and the neighborhood.

22. Why is rice commonly grown in swampy areas?

23. How is smuggling affecting the East African community?

24. Give one way democracy is exercised in Uganda.

25. Why is crop growing mainly done by irrigation in the East Africa plateau?

26. How did the Arabs promote modern religions in Uganda?

27. In which way do good roads lead to road accidents?

28. What type of climate is experienced in areas around Lake Victoria?

29. Name any one of the first Ugandans to join the Legislative Council.

30. How did faulting lead to formation of physical features in East Africa?

31. Why is the sun seen earlier in Mombasa than Masaka in the morning?

32. How is bush burning dangerous to wildlife?

33. Give one factor that influence population distribution in East Africa.

34. Name any one example of a temporary house.

35. State one reason why some people don't use modern fishing methods in Uganda.

For questions 36 – 40, answer either Islam or Christianity BUT NOT BOTH.

36. **Either:** Which son of Adam killed his brother?

165

INTERNAL EXAMINATIONS BOARD OF TILDA AND PAUL P/S.

P.O.BOX 43, ENTEBBE – MPALA

TEL: 0782634937/0754056534



Or : Which son of Habel killed his brother?

37. **Either:** How did Jesus Christ serve his people on Holy Thursday?

Or : How did Prophet Muhammad serve the people of Mecca?

38. **Either:** Give one way Abraham expressed his faith to God.

Or : Give one way Ibrahim expressed his faith to Allah.

39. **Either:** Mention one sin committed by some children.

Or : Mention one sin committed by some children.

40. **For both:** How is fasting important to the soul of believers?

SECTION B

41. a) Name the coffee variety grown on the slopes of Mount Elgon.

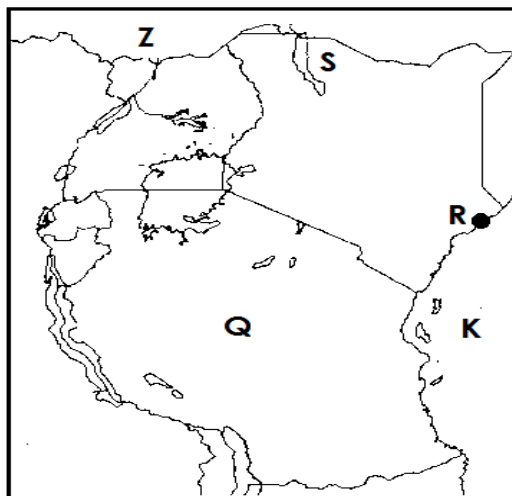
b) State any two problems affecting coffee growers in Uganda.

(i)

(ii)

c) Give one way coffee growing is important to Uganda.

42. Study the map below and answer questions the follow.



ILDA AND PAUL P/S.

A
I

- a) Name the country marked Z on the above map.

- b) How is town marked R important to Uganda's economic development?

- c) Name the feature marked K on the above map.

- d) Why is country marked Q advantaged by its location?

43. a) State any one reason why European missionaries came to Uganda.

b) Which one problem did European missionaries face in Uganda?

c) How did IBEACO support missionary work in Uganda?

d) Why is it difficult for Ugandan's to forget European missionaries

44. a) Give one reason why Uganda creates new districts.

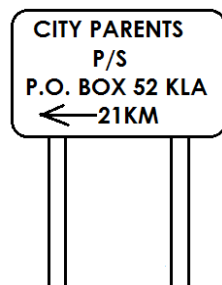
b) Which ministry is responsible for creating new districts?

c) What title is given to the following district officials who
(i) Heads of civil servants

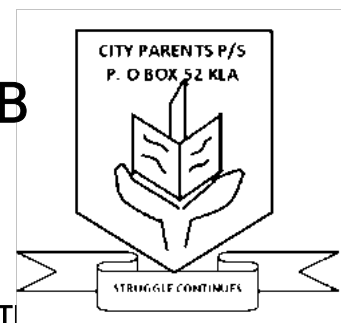
(ii) Heads education

45. a) Name the following school symbols.

A



B



167

MINISTRATIONS BOARD OF T
P.O.BOX 43, ENTEBBE – MPALA
TEL: 0782634937/0754056534

b) How is school symbol marked A important to parents?

c) Mention one item found on symbol marked A.

46. a) Write the full of the organization which unites countries of East Africa.

b) Name any one founder president of the above organization.

c) State two reasons why the above organization was formed.

(i) _____

(ii) _____

47. a) What type of wood is produced by Mahogany trees?

b) Give one way man destroys vegetation.

c) State two importance of vegetation to the people of East Africa.

(i) _____

(ii) _____

48. a) Why should people budget before spending?

b) Which organ of a democratic government makes a national budget?

c) How does Uganda Revenue Authority help the government in getting funds?

49. a) Give two ways children's rights are violated today.

(i) _____

(ii) _____

b) How can you guard against child abuse?

c) Name one group of people who violate children's rights.

50. a) What was the original cradle land of the Bantu?

- b) Why did the Iteso change from cattle keeping to mixed farming?

- c) Give two reasons why people migrated long ago.
(i) _____
(ii) _____

Answer Either Christianity or Islam but not both on the same number.

51. **Either:**

- a) What is lent?

- b) State two ways Christians observe lent.
(i) _____
(ii) _____
- c) What marks the beginning of lent?

Or :

- a) What is Saum?

- b) Give any two ways how Muslims observe begin.
(i) _____
(ii) _____
- c) Which celebration marks the end of Ramadhan?

52. **Either:**

- a) Define Holy Trinity.

- b) Mention three people that make up Holy Trinity.
(i) _____
(ii) _____
(iii) _____

Or: How were the following people related to Prophet Muhammad?

- a) Aminah:

- b) Abdullah:

- c) Abubaker:

d) Khadijah :

53. **Either:** How are the following towns related to Jesus?

a) Bethlehem

b) Caana

c) Jerusalem

Or :

a) How are the following towns related to Prophet Muhammad?

i) Mecca:

ii) Medina :

(b) Why was Prophet Muhammad chased away from Mecca?

c) What is Hegira?

54. **Either:**

a) Which prayer did Jesus give to His disciples?

b) State any two requests Christians make in above prayer.

(i) _____

(ii) _____

c) Why do Christians worship God?

Or: Write down four pillars of Islamic faith.

a) _____

b) _____

c) _____

d) _____

55. **FOR BOTH:**

a) What is a family?

- b) State two roles of parents in a family.
i) _____
ii) _____
c) Why is it important to have children in every family?

SET TWENTY SEVEN
SECTION A: 40 MARKS

1. Which element of a map helps a map drawer to explain symbols?

2. Name the biggest ethnic group in Uganda.

3. How is a wheelbarrow important to a farmer?


4. Give any one reason why road signs are useful on roads.

5. Which line of latitudes runs through Uganda?

6. Why do people carry umbrellas on sunny days?

7. Mention one problem faced by people in town areas.

8. Draw a map symbol of a quarry in the space provided below.



9. How can people benefit from a nearby factory in the community?

10. Give a reason why people settle in areas with fertile soils.

11. State one importance of swamps to farmers.

12. How do local people help the police to carry out its duty?

13. Why should homes have rubbish pits?

14. Give one way through which leaders are chosen in an area.

15. In which one way is port Mombasa useful to Uganda's economy?

16. Write RDC in full.

17. Which mountain has Muhavura as its highest peak?

18. Give one problem faced by people in towns.

19. Which clouds provide farmers with steady rainfall?

20. Name the commonest fish caught from swamps.

21. How did the discovery of fire help early man?

22. Why do most people in mountainous areas rear donkeys?

23. How can people control soil erosion in their home compounds?

24. State one way in which social activities are important in the community.

25. How do school children benefit from a school fence?

26. Mention any one example of a social service provider.

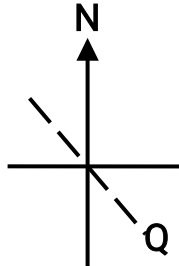
27. Mention the lake in Uganda shared by Uganda, Kenya and Tanzania.

28. Give one reason why the government of Uganda has created many districts.

29. State the importance of Lake Katwe to people of Uganda.

30. In which direction is one's shadow in the morning?

31. Which compass direction is labeled Q?



32. Why is Uganda referred to as a landlocked country?

33. Give one importance of radios to people.

34. Name the common type of coffee grown on the slopes of Mount Elgon.

35. How do balls bring happiness to school children?

For questions 36 – 40, answer either Christianity or Islam questions but not both.

36. **Either:**

"Love one another as I have loved you." Who said these words?

Or:

Give a reason why Muslims do not sit together with males during prayer time.

37. **Either:**

Why is December 25th an important day for Christians?

Or:

Why is Idd-el-fitri important in the Islamic faith?

38. **Either:**

What helped David to defeat the giant?

Or:

What helped Dauda to defeat the giant?

39. **Either:**

Give one symbol of a Christian family.

Or:

Give one symbol of a Moslem family.

40. **Either:**

In which town was Jesus born?

Or:

In which town was Prophet Muhammad born?

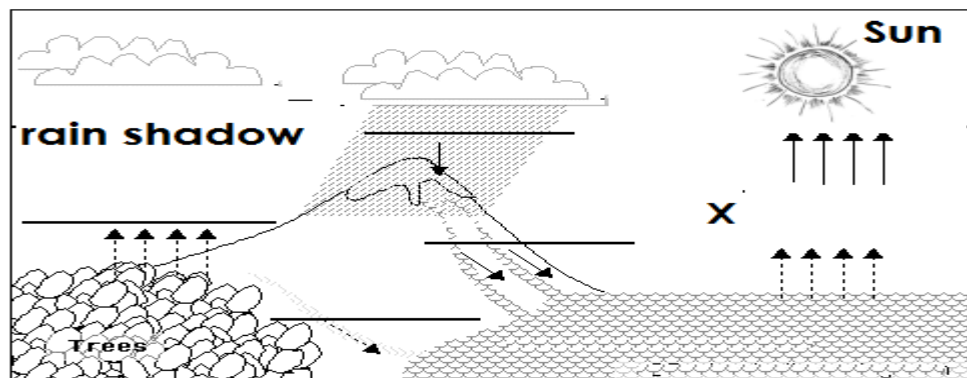
SECTION B: 60 MARKS

41. (a) Name the tribe which carries out male circumcision in Uganda.

(b) How is that practice important to the above people?

(c) Apart from circumcision give any other way culture is shown in communities.

42. Study the diagram below and answer the questions that follow.



(a) What type of rainfall is received in the diagram shown above?

(b) Why is crop farming suitable for the side of the mountain marked X.

(c) Give one use of rainfall to people in our district.

(d) Mention one problem faced by people in highland areas.

43. (a) What is a resource?

(b) Mention two examples of natural resources.
i) _____
ii) _____

(c) Give one way forest are useful to herbalists.

44. (a) State two ways in which the police enforces law and order.
i) _____
ii) _____

(b) Which department of police is responsible for;
i) investigating crimes committed by people?

ii) maintain proper flow of vehicles on busy roads?

45. Match list 'A' to list 'B' correctly.

LIST A

LIST B

- | | |
|--------------------------|---|
| i) Chairperson | - keeps official records and files. |
| ii) The Vice Chairperson | - mobilizes youth to take part in development. |
| iii) Secretary for youth | - signs official document and gives recommendation. |
| iv) General Secretary | - He is in charge of children's affair. |

46. (a) What is vegetation?

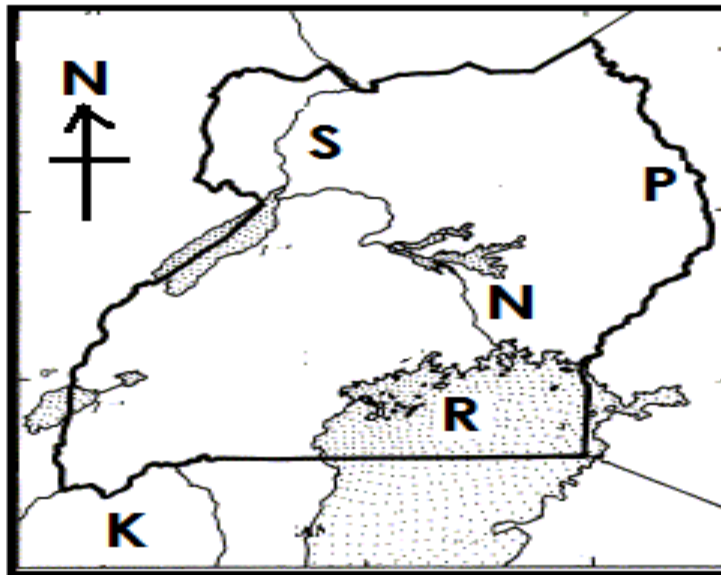
(b) Give one importance of forests to people.

(c) Why do people cut down trees in your area?

(d) In which way is cutting down trees without replacing them dangerous in an area?

47. (a) Name any two rift valley lakes in Uganda.
 i) _____
 ii) _____
- (b) State two characteristics of rift valley lakes.
 i) _____
 ii) _____

48. Use the map below to answer the questions that follows.



- (a) Name the part of R. Nile marked with letter S.

- (b) Name the direction to which river marked N flows.

- (c) How is the feature marked with letter R important to the people of Uganda?

- (d) Which country is marked K on the above map?

49. (a) Give the meaning of the following terms.
 i) legends

ii) clan

- (b) Mention any two symbols of a clan.

- i) _____
ii) _____

50. (a) Give any two reasons why people work.

- i) _____
ii) _____

(b) Identify two reasons why people work.

- i) _____
ii) _____

For questions 51 – 55, answer either Christianity or Islam but not both

51. **Either:**

(a) What is meant by the term Gospel?

- _____

(b) Name three gospel writers in the Bible.
i) _____ ii) _____
iii) _____

Or:

(a) What is Zakat?

- _____

(b) Mention any three groups of people who are given Zakat.
i) _____ ii) _____
iii) _____

52. **Either:**

(a) How did Adam/man break his relationship with God?

- _____

(b) In which way did God reconcile with mankind?

(c) State any two results of sin.

- i) _____
ii) _____

Or:

(a) How did Adam/man break his relationship with Allah?

- _____

(b) In which way does man reconcile with Allah today.

(c) State two results of a sin.

- i) _____
 ii) _____
53. **Either:**
 (a) What is a prayer?

- (b) Which prayer did Jesus teach His Apostles?

- (c) State any two requests made in the Lord's Prayer.
 i) _____
 ii) _____
- Or:**
 (a) What is Tayammum?

- (b) Give one condition under which Tayammum is done.

- (c) State two materials than can be used for Tayammum.
 i) _____
 ii) _____
54. **Either: Match the following correctly**
 i) Simon Peter - collected taxes
 ii) Mathew - betrayed Jesus Christ
 iii) Judas Iscariot - baptized Jesus Christ
 iv) John the Baptist - was a fisherman
- Or: Match the following correctly**
 i) Miraj - Prophet Muhammad's journey from Mecca to Jerusalem
 ii) Isra - Compulsory journey by Muslims to Mecca
 iii) Umra - Prophet Muhammad's journey from Jerusalem to heaven.
 iv) Hajj - Voluntary journey by Muslims to Mecca
55. **FOR BOTH:**
 (a) What is authority?

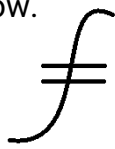
- (b) Mention any two types of authority
 i) _____
 ii) _____
- (b) Why is it important to have people in authority?

SET TWENTY EIGHT
SECTION A: 40 MARKS

1. State the use of the key on the map?

2. Mention any one traditional methods of preserving fish.

3. Write UPE in full.

4. Name the map symbol below.


5. Name the physical features which cover the biggest part of our district.

6. Name the major line of latitude marked 0° .

7. Name the highest mountain in Uganda.

8. Give one way of controlling soil erosion in hilly areas.

9. How is Lake Katwe important to Ugandans?

10. What title is given to the head of the family?

11. In which district is your school found?

12. Why should a hospital have an ambulance?

13. Mention one raw material we get from swamps.

14. Why do some people fail to get their basic needs?

15. Give one use of vegetation to people.

16. Mention one responsibility of a child in a family.

17. State any one traditional means of communication.

18. Give the major source of natural light.

19. Name the colour on the traffic light that tells drivers to stop.

20. Write down one means of road transport.

21. Draw a map of a pot in the space below.



22. Why do school children wear uniforms?

23. State any one danger of too much rainfall to crop farmers.

24. How important are hospitals and clinics to people?

25. Mention one requirement needed by a school child.

26. Why is it important to plant trees in school compound?

27. Who was the first Muganda man according to Baganda?

28. Mention any one important place in a school

29. State one cause of road accidents in your district.

30. Name any one brother of Nambi according to the legends.

31. How are markets important to people in a district?

32. Why do people keep their money in the bank?

33. Mention any one basic need of man.

34. Which word is used to mean the plant cover of an area?

35. Mention one semi-cardinal point of a compass.

Answer Either Christianity or Islam but not both on the same number.

36. Either:

180

INTERNAL EXAMINATIONS BOARD OF TILDA AND PAUL P/S.
P.O.BOX 43, ENTEBBE – MPALA
TEL: 0782634937/0754056534

Name the Holy book for Christians.

Or:

Name the Holy book for Muslims.

37. **Either:**

Who was the earthly father of Jesus Christ?

Or:

Who was the father of Prophet Muhammad?

38. **Either:**

Why do Christians go to church?

Or:

Why do Muslims go to Mosque?

39. **Either:**

State one way how Christians show respect to the church.

Or:

State one way how Muslims show respect to the Mosque.

40. **Both:**

Give one example of a bad behaviour among children.

SECTION B: 60 MARKS

41. **Match the following weather instruments.**

A

B

i)

Wind vane

- measures humidity.

ii)

Rain gauge

- measures the speed of wind.

iii)

Anemometer

- measures the direction of wind.

iv)

Hygrometer

- measures the amount of rainfall

42. (a) Give two reasons why people carryout farming.

i) _____

ii) _____

(b) Give one problem facing farmers in your district.

(c) Name one crop which grows best in swampy areas.

43. (a) What is environment?

(b) Mention any two components of environment.

i) _____

ii) _____

(c) Give one way of caring for our environment.

44. (a) State any two benefits of lakes to the people of our district.

i) _____

ii) _____

(b) State one method of catching fish.

(c) How are boats useful to fishermen?

45. (a) Name one important place in your district apart from banks.

(b) Name any two commercial banks in Uganda.

i) _____

ii) _____

(c) What title is given to the head of Central Bank?

46. (a) State the main use of a compass direction.

(b) Name two groups of people who use a compass.

i) _____

ii) _____

(c) Where does a compass needle face where at rest?

47. (a) How is class monitor chosen in your class?

(b) Mention any two examples of religious leaders.

i) _____

ii) _____

(c) State any one quality of a good leader.

48. (a) How do people meet their needs?

(b) Mention three economic activities carried out in your district.

i) _____

ii) _____

iii) _____

49. a) Mention any one component of culture.

(b) State any two importance of culture.

i) _____

ii) _____

(c) Name any one bad cultural practice.

50. a) Mention any two activities done to keep our school compound clean.

i) _____

ii) _____

(b) Give any two groups of people who work at school.

i) _____

ii) _____

For questions 51 – 55, answer either Christianity or Islam but not both

51. **Either:**

(a) What are Gospel books?

(b) Mention any two Gospel books in the Bible.

i) _____ ii) _____

(c) Give one good value that Jesus taught his disciples.

Or:

a) What is Islam?

(b) Mention three pillars of Islam.

i) _____

ii) _____

iii) _____

52. **Either: Match correctly**

A

B

- | | |
|--------------------|----------------------------------|
| i) Good Friday | - Apostles received Holy Spirit. |
| ii) Palm Sunday | - Jesus rose from the dead. |
| iii) Pentecost day | - Jesus was crucified and died |
| iv) Easter Sunday | - Jesus entered Jerusalem |

Or: Match correctly

A

B

- | | |
|-----------|-------------------------|
| i) Aminah | - Holy city of Muslims. |
|-----------|-------------------------|

183

INTERNAL EXAMINATIONS BOARD OF TILDA AND PAUL P/S.
P.O.BOX 43, ENTEBBE – MPALA
TEL: 0782634937/0754056534

- ii) Mecca - Fasting period of Muslims.
- iii) Ramadhan - Founder of Islam
- iv) Muhammad - Mother of Muhamma

53. Either:

(a) What is a sin?

(b) Name the punishment God gave to the following creatures;

i) Adam

ii) Eve

(c) Give any one result of sin.

Or:

(a) What is a sin?

(b) Name the punishment Allah gave to the following people;

i) Adam

ii) Hawah

(c) Give any one result of sin.

54. Either:

(a) What is a prayer?

(b) Which prayer did Jesus teach his disciples?

(c) State any two reasons why people pray.

i) _____

ii) _____

Or:

(a) Write IRE in full.

(b) How many days did Allah take to create the universe?

(c) Mention any two people who lived in the garden of Eden.

i) _____

ii) _____

55. **BOTH:**

(a) What are voluntary organizations?

(b) Mention any two voluntary organizations operating in Uganda.

i) _____

ii) _____

(c) How important are voluntary organizations to the people?

Parent's comment:_____sign_____contact_____

Teacher's comment:_____sign_____contact_____

NOTE:

Tilda and Paul Mixed Day and Boarding Primary School is found in Entebbe-Mpala region in Uganda, privately owned institution handling learners from Nursery to primary seven.

Registration is in progress from Nursery to P.7, from Monday -Saturday, starting 8:00a.am - 5:00P.M.

FOR MORE INFORMATION:

Director: 0782634937/0754056534

Head teacher: 0786983428

Director of Studies (DOS):0752113597/0778988819